



# BASIC TECHNICAL DRAWING

## Student Textbook

### Grade 12

#### Prepared by:

Amanuel Berhanu (BSc.)

Tolossa Deberie (MSc.)

#### Editor:

Tolossa Deberie (MSc.)

#### Reviewed by:

Abebe Basazeneu

Natenael Abebe

Yared Mekuria



FEDERAL DEMOCRATIC REPUBLIC OF ETHIOPIA  
MINISTRY OF EDUCATION

KURAZ INTERNATIONAL  
PUBLISHER



## **Acknowledgements**

The redesign, printing and distribution of this student textbook has been funded through the General Education Quality Improvement Project (GEQIP), which aims to improve the quality of education for Grades 1–12 students in government schools throughout Ethiopia.

The Federal Democratic Republic of Ethiopia received funding for GEQIP through credit/financing from the International Development Associations (IDA), the Fast Track Initiative Catalytic Fund (FTI CF) and other development partners – Finland, Italian Development Cooperation, the Netherlands and UK aid from the Department for International Development (DFID).

The Ministry of Education wishes to thank the many individuals, groups and other bodies involved – directly and indirectly – in publishing the textbook and accompanying teacher guide.

Every effort has been made to trace the copyright holders of the images and we apologise in advance for any unintentional omission. We would be pleased to insert the appropriate acknowledgement in any subsequent edition of this publication.

© Federal Democratic Republic of Ethiopia, Ministry of Education  
First edition, 2003(E.C.)

***Developed, printed and distributed for the Federal Democratic Republic of Ethiopia, Ministry of Education by:***

**Al Ghurair Printing and Publishing House CO. (LLC)**

**PO Box 5613**

**Dubai**

**U.A.E.**

Second edition, 2007 (E.C.)

By Tan Prints India Pvt. Ltd.

***In collaboration with***

**Kuraz International Publisher P.L.C**

**P.O. Box 100767**

**Addis Ababa**

**Ethiopia**

**ISBN: 978-99944-2-096-4**

All rights reserved. No part of this publication may be reproduced, stored in a retrieval system or transmitted in any form or by any means (including electronic, mechanical, photocopying, recording or otherwise) either prior written permission of the copyright owner or a licence permitting restricted copying in Ethiopia by the *Federal Democratic Republic of Ethiopia, Federal Negarit Gazeta*, Proclamation No. 410/2004 Copyright and Neighbouring Rights Protection Proclamation, 10<sup>th</sup> year, No. 55, Addis Ababa, 19 July 2004.

Disclaimer

Every effort has been made to trace the copyright owners of material used in this document. We apologise in advance for any unintentional omissions. We would be pleased to insert the appropriate acknowledgement in any future edition.

# Table of Contents

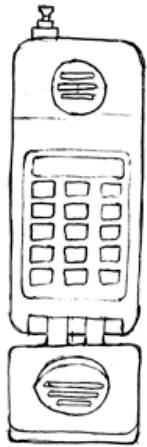
	Page
<b>UNIT 1. FREE HAND SKETCHING .....</b>	<b>1</b>
1.1 Introduction .....	2
1.2 Uses of Freehand Sketching .....	4
1.3 Types of Freehand Sketching .....	4
1.4 Sketching Materials .....	5
1.5 Fundamentals of Sketching .....	8
Unit Summary .....	29
<b>UNIT 2. AUXILIARY VIEWS .....</b>	<b>32</b>
2.1 Introduction.....	33
2.2 Overview of Orthographic Projection.....	34
2.3 Auxiliary Projection of Objects.....	44
2.4 Types of Auxiliary Views.....	47
Unit Summary .....	53
<b>UNIT 3. SECTIONAL VIEW .....</b>	<b>56</b>
3.1 Introduction.....	57
3.2 Cutting Plane and Section Lining .....	58
3.3 Visualizing a Sectional View .....	60
3.4 Types of Sectional View .....	61
3.5 Other Sectional View Representation .....	67
3.6 Conventional Representations in sectioning.....	69
Unit Summary .....	72

<b>UNIT 4. DIMENSIONING .....</b>	<b>80</b>
<b>4.1 Introduction.....</b>	<b>81</b>
<b>4.2 Lines and Symbols .....</b>	<b>81</b>
<b>4.3 Reading Direction of Figures .....</b>	<b>82</b>
<b>4.4 Theory of Dimensioning .....</b>	<b>83</b>
<b>4.5 Methods of Dimensioning.....</b>	<b>85</b>
<b>4.6. Placement of Dimension.....</b>	<b>89</b>
<b>Unit Summary .....</b>	<b>92</b>
<b>UNIT 5. DEVELOPMENT AND INTERSECTION.....</b>	<b>95</b>
<b>5.1. Introduction.....</b>	<b>96</b>
<b>5.2 Development.....</b>	<b>98</b>
<b>5.3 Intersection Between Geometrical Solids.....</b>	<b>114</b>
<b>Unit Summary .....</b>	<b>122</b>

# UNIT

# 1

## FREEHAND SKETCHING



2-D



3-D

### Learning Competencies:

Up on completion of this chapter you should be able to:

- Describe the use and application of freehand sketching;
- Identify freehand sketching materials;
- Use freehand sketching material properly;
- Prepare a sketch of line in freehand;
- Sketch different types of lines, areas, angles, circles, and arcs by applying sketching techniques;
- Layout a sketch using proportion;
- Sketch multiview drawing of 3D objects;
- Prepare a freehand sketch of any 3D objects in three types of pictorial drawing.

## 1.1. Introduction

- Have you ever sketched? If you do what is the thing you sketched and why did you sketched it?

Consider an Architect who wants to design a building, a Mechanical Engineer who wants to design a machine or a machine part; an Industrial Engineer who wants to design a plant layout; how would he/she start the design? Practically all starts and put their idea with freehand sketch. Freehand sketching is one of the most effective ways to communicate a pictorial or verbal idea to a workman. Sketching may be schematic, expressing new ideas, or instructional to convey ideas to draftsmen. After these ideas, concepts, and details for a project have been finalized, precise technical drawings are produced using instruments so that parts may be manufactured or constructed. Freehand sketches are also used by engineers to clarify, evaluate and record preliminary ideas and concepts. Sketches can be used by all persons irrespective of their specialization to support their ideas with figures.

The fundamental concepts in technical drawing are the same whether instrumental or freehand drawing is used in representing or transferring ideas. But freehand sketching is preferable to draw easily and freely as hand writing, and the mind of the sketcher would be free to concentrate upon an idea,

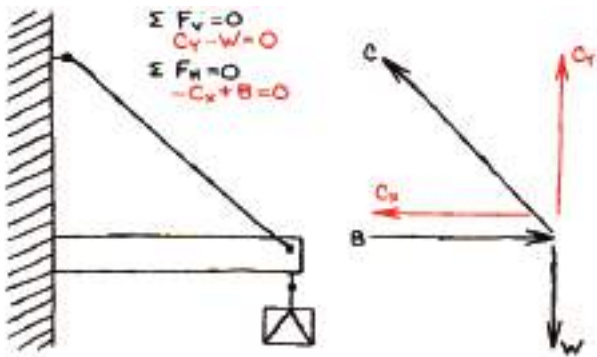
not upon the technique of sketching the idea. Sketching, similar to writing, is a skill that can be developed through practice. Some examples of analytical sketches are illustrated. These represent the type of sketches you might be asked to produce in industry or on the job site. In this unit the basic techniques of both two-dimensional sketching and pictorial sketching are discussed.

### Comparison between freehand sketching and instrumental drawing

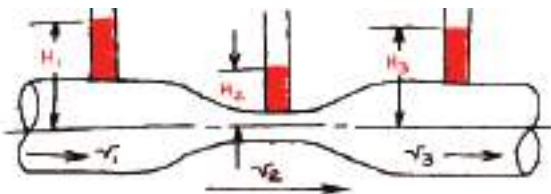
Freehand sketching	Instrumental drawing
<ul style="list-style-type: none"> <li>• The process of producing a rough preliminary drawing representation.</li> <li>• A first stage of the design process.</li> <li>• Done in freehand.</li> <li>• A stepping tone to the next sketch or drawing; where ideas are refined, detailed is added and new ideas are formed.</li> <li>• Used to clarify the design idea to non technical individuals.</li> <li>• Takes less time</li> </ul>	<ul style="list-style-type: none"> <li>• The process of producing a final drawing.</li> <li>• It's a final stage of a design process.</li> <li>• Done with instruments.</li> <li>• Used to clarify the design to technical personnel.</li> <li>• Takes relatively longer time to draw.</li> </ul>

1 Free hand Sketching

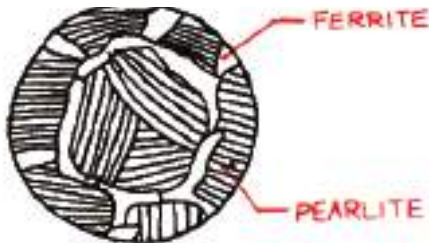
Application of sketching



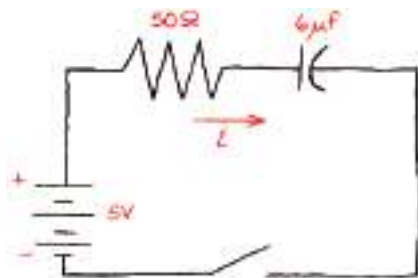
Typical sketch for 2-D statics problem



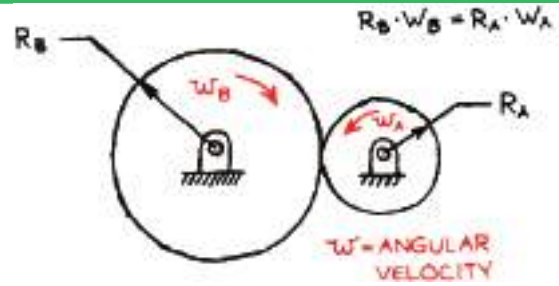
Mechanical, chemical or civil engineers might use this type of sketch



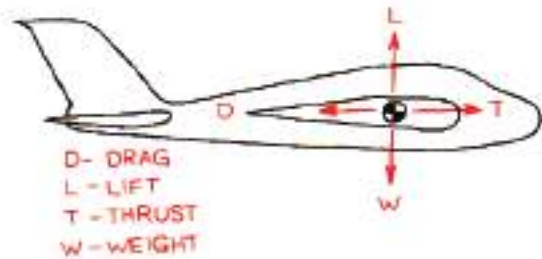
Metallurgical engineers sketch microstructures of materials



Electrical engineers often sketch circuits




Sketch of typical mechanical technology application



Aeronautical engineers typically sketch effects of forces acting on aircraft



Sketch of a cellular phone



Architects often sketch buildings

**Fig.1.1 Typical applications of freehand sketching**



## 1.2. Uses of Freehand Sketching

- What do you think is the use of sketching for engineers and designers?

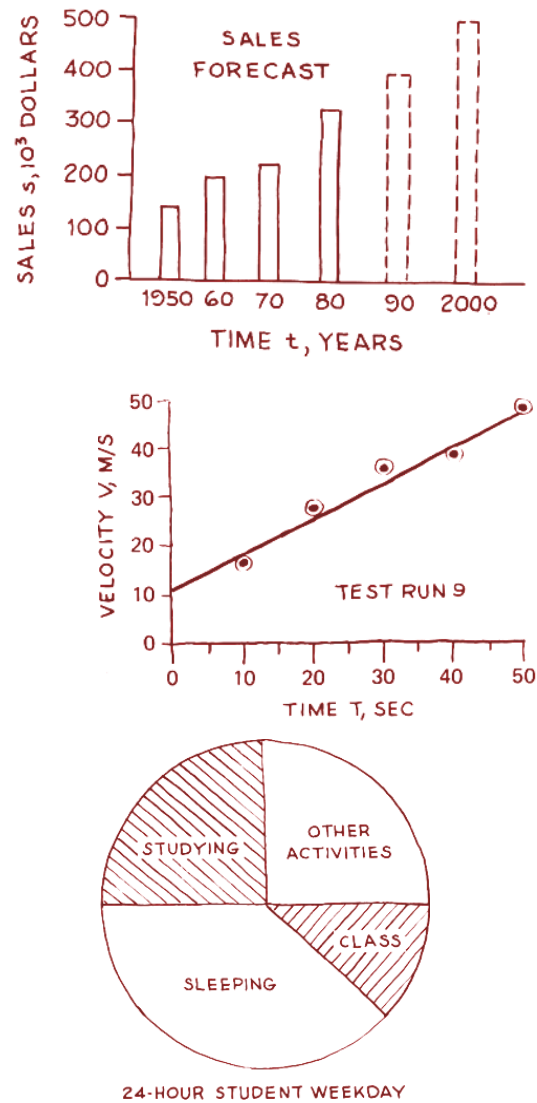
Sketching is as much a thinking process as it is a communication technique and it is a rapid method of drawing. In addition to gaining speed freehand sketches have the following uses;

- Transferring information, obtained in the field or shop, to the engineering office.
- Conveying the ideas of the designer to the draftsman.
- Making studies of the layout of the views required in an instrumental drawing.
- A means of making preliminary studies of a design to show how it functions.
- Furnishing a three-dimensional picture of an object; this will help to interpret the orthographic views.

## 1.3. Types of Freehand Sketching

Freehand sketches can be categorized into three:

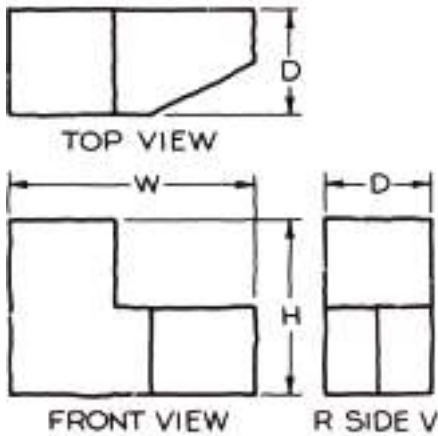
1. Sketches which communicate technical data such as charts, graphs, maps, and diagrams as shown in Fig.1.2.



**Fig. 1.2 Communication of information using charts and graphs**

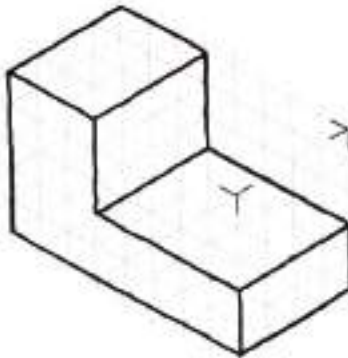
2. Sketches which illustrate two dimensions of an object such as a multi-view representation of an object as shown in Fig. 1.3.





**Fig. 1.3 Multi-view representation of an object**

3. Sketches which are two dimensional representations of three dimensional objects such as pictorial sketches of an object. See Fig. 1.4.



**Fig. 1.4 Pictorial representation of an object**

### Checkpoint 1.1

Practice sketching multi-view and pictorial representation of any object, which is familiar to you.

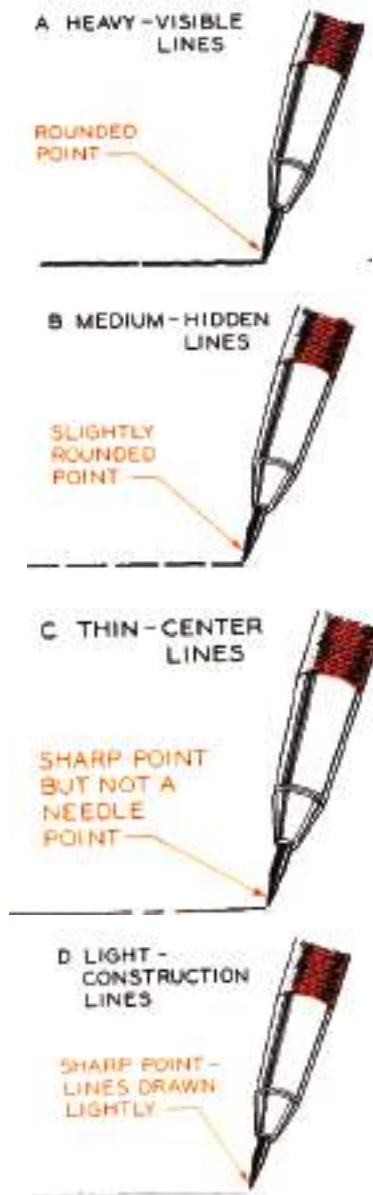
## 1.4. Sketching Materials

- What kind of sketching materials do you suggest from the drawing materials you know?

One of the advantages of freehand sketching is that it requires only pencil, paper and eraser, items that anyone has for ready use.

**Pencil:** there are different types of pencil used in technical drawing. Technical sketching is usually made by the pencils in the medium group, F, H, and 2H. The H pencil is more recommended for sketching purpose.

- **Sharpening the sketching pencil:** A sketching pencil should be sharpened on a file or piece of sandpaper to conical point. The point then should be rounded slightly on the back of the sketch pad or another sheet of paper to the correct degree of dullness. The alphabets of lines that are sketched freehand are all made with the same pencil grade. The variation in the lines is achieved by varying the sharpness of the pencil point as shown below in Fig. 1.5.



**Fig. 1.5 Pencil points and sketch lines**

**Eraser:** A good eraser that will not cause dirty mark should be used. A soft eraser should be used to remove construction lines and incorrect markings.

**Papers:** When sketches are made in the field, where an accurate record is required, a small note book or sketching pad is frequently used. Often clip boards are employed to hold the paper.

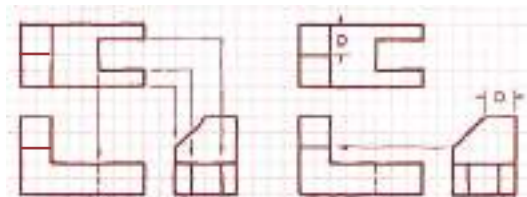
Sketching paper might be blank, rectangular grid, isometric grid or perspective grid paper.

**Blank paper:** Blank paper of durable and high quality can be used as a sketching paper for all types of sketches. In this course we shall be using the blank paper to learn the different techniques of sketching.

**Rectangular grid paper:** This type of paper helps in estimating distances easily. It is used in sketching two-dimensional figures such as multi-view drawings. It is also used for making oblique sketches.



**(a) Rectangular grid**

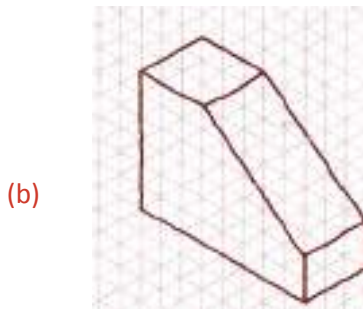
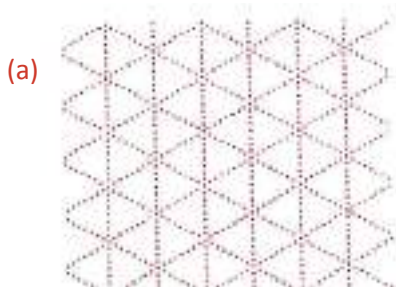


**(b) Freehand sketching in rectangular grid paper**

**Fig. 1.6 Using rectangular paper grids**

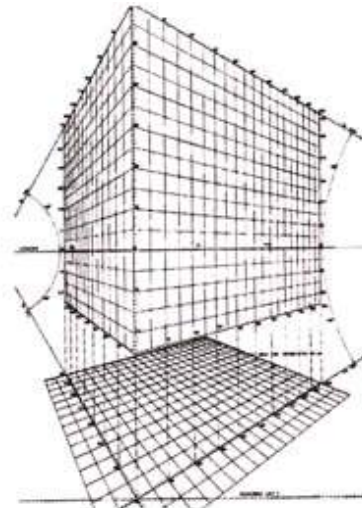
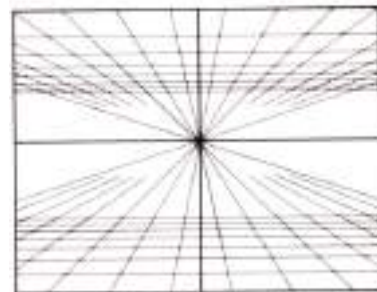

## 1 Free hand Sketching

**Isometric grid paper:** This paper helps to draw pictorial sketches called isometric drawings easily, which is composed of a series of lines making  $60^\circ$  angles with one another. Angles cannot be measured with a protractor in isometric pictorial; they must be drawn by measuring coordinates along the three axes of the printed grid.



**Fig. 1.7 (a) Isometric grid (b) Freehand sketching on Isometric grid paper**

**Perspective grid paper:** Like the rectangular coordinate and the isometric ruled papers, sketching papers with perspective grids are also available. These types of papers are used to simplify sketching of pictorial drawings called perspective drawings.



**Fig. 1.8 Perspective grid paper**

### Checkpoint 1.2

Practice sketching a multi-view on a plain A4 drawing paper and rectangular grid paper. Then explain the difference between drawing sketches on a plain paper and on grip paper.  
Practice pictorial sketches on isometric and perspective grid papers.

## 1.5. Fundamentals of Sketching

The chief difference between an instrumental drawing and a freehand sketching lies in the characteristics of the technique of the lines. A good freehand line should not be rigidly straight or exactly uniform, as an instrumental line. The effectiveness of an instrumental line lies in exacting *uniformity*, while the quality of freehand lines lies in its *freedom* and *variety*.

Good sketches constitute the following techniques.

- When sketching hold the pencil loosely and at a greater distance from the pencil point than in normal writing. This distance may range from about 3 to 5cm. Eye-hand coordination and muscle control are important and come with practice.
- During sketching short lines, use finger movement keeping the wrist stationary.
- When sketching longer lines, use less finger action with a stiffer arm

movement.

- Whenever possible sketch lines in a direction away from the body.
- As you sketch, rotate the pencil slightly between the thumb and fingers. This helps to preserve the sharpness of the pencil point and to make uniformly thick lines.
- Because more freedom of movement is necessary when sketching, avoid fastening the paper to the working surface. The paper should be free to move across the working surface as the sketch is developed.
- Final lines on sketches should be bold, dark, and clean-cut.
- Straight lines should be drawn with minimum waviness. When sketching, avoid using ragged, overlapping strokes.

### 1.5.1 Sketching Lines

#### 1. Straight Lines

Since most sketches consist mainly of straight lines (horizontal, vertical, and inclined lines), it is important for you to learn the simple techniques involved in sketching these lines.

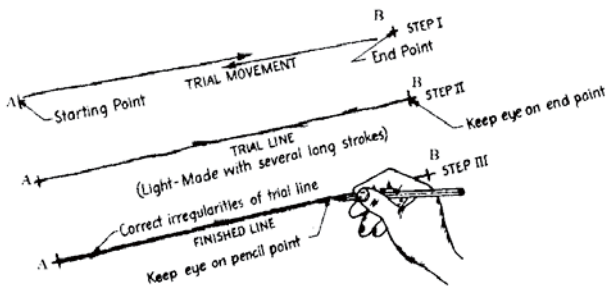
**The following steps are recommended for sketching straight line:**

**Step 1:** Mark the end points

**Step 2:** Make a few trial motions between the marked points to adjust the eye and hand to the contemplated line.

**Step 3:** Sketch a very light line between the points by moving the pencil in two or three sweeps. When sketching the trial line, the eye should be on the point toward which the movement is directed.

**Step 4:** Darken the finished line, keeping the eye on the pencil point on the trial line. The final line, replacing the trial line, should be distinct, black, uniform, and straight.



**Fig. 1.9 Steps in sketching a straight line**

### **a. Horizontal Lines**

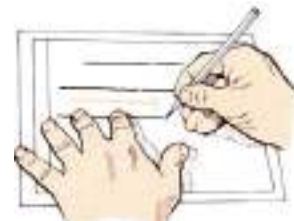
The normal way to draw parallel horizontal lines is from left to right for right-handed people or right to left for left-handed people. You should be able to develop enough skill to draw many evenly spaced horizontal lines while leaving uniform spaces between the lines (See Fig.1.10 (a)).

### **b. Vertical Lines**

Vertical lines are usually drawn from top to bottom, with finger and wrist movements, you should be able to develop enough skill to draw uniformly spaced parallel vertical lines. The edge of the drawing surface can be used for this as well as demonstrated in Fig.1.10(b).

### **c. Inclined lines**

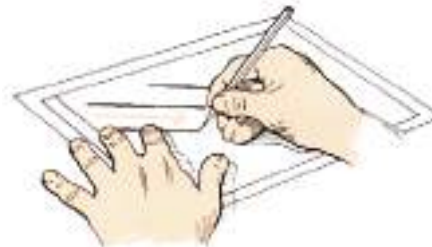
Inclined lines may be made to conform in direction to horizontal or vertical lines by turning the paper slightly (Fig.1.10 (c)).



**a) Horizontal strokes**



**b) Vertical strokes**



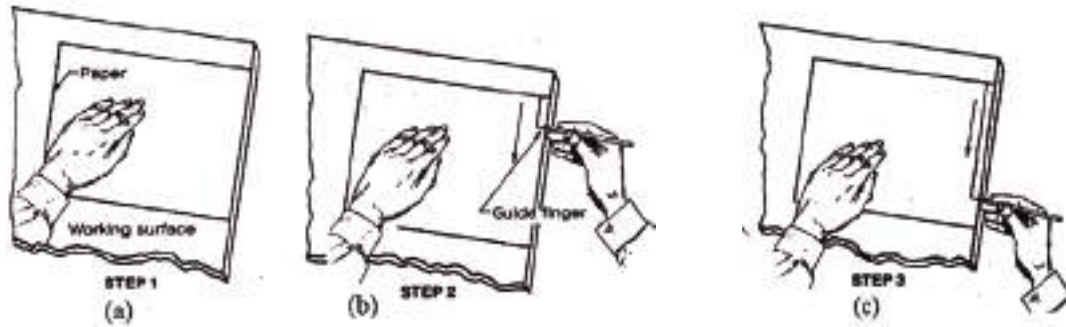
**c) Inclined strokes**

**Fig. 1.10 Freehand sketching techniques**

### **d. Sketching Border Lines**

Border lines are a combination of vertical and horizontal lines. Therefore, they can be sketched in the manner discussed before.





**Fig. 1.11 Sketching a border line**

**The following steps may be followed to sketch boarder line easily,**

**Step 1:** Begin by aligning the edge of the paper with that of the board. Prevent the paper from sleeping by one hand while holding the pencil firmly by the other hand as shown in Fig.1.11 (a).

**Step 2:** Use the idle fingers of the hand holding the pencil as a guide against the edge of the board (Fig.1.11 (b)).

**Step 3:** Then slowly sketch the line pulling the pencil toward you (Fig. 1.11 (c)). Here you need not to sketch a trial line; instead produce a final bold line at the first stroke.

### Checkpoint 1.3

**Sketching horizontal, vertical and inclined lines**

Practice sketching horizontal, vertical and inclined lines on a plain sheet of A4 size paper. Sketch about ten more parallel lines spaced by eye about 15mm apart. Try to keep the lines reasonably parallel.

**Sketching boarder lines**

Sketch several differently spaced boarder lines around the edges of a plain sheet of A4 size paper. Try to produce neat square corners where the lines intersect. Avoid extending one line beyond another.

## 2. Curved lines

1. Have you ever sketched a circle? How accurate were you?
2. What method do you suggest for accuracy?

Curved lines are identified as circles, arcs, ellipse or irregular curves.

### a. Sketching Circles

Circles can be sketched by using light guidelines along with centerlines. Since it

## 1 Free hand Sketching

is difficult to draw a freehand circle in one continuous line, short arcs are drawn using the guidelines.

**The recommended steps to draw circles are given below.**

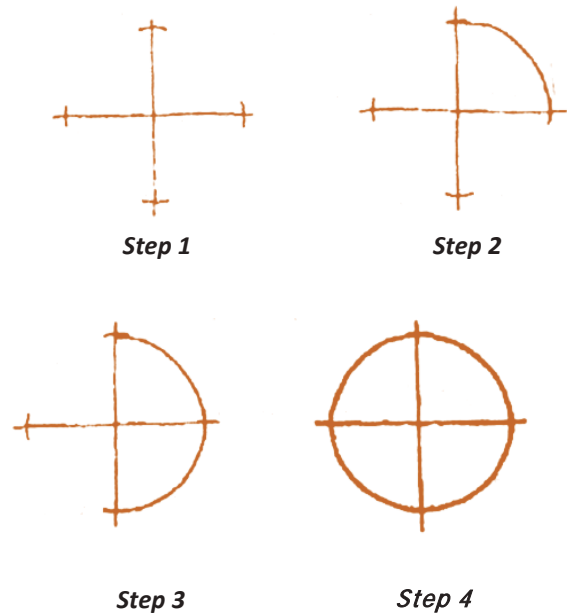
*Small sizes up to 25 mm diameters*

**Step 1:** Sketch a center line by drawing a horizontal and a vertical line that intersect at the center of the desired circle.

Estimate and mark off the radius distance from the centerpoint on each side of the centerline shown in step 1 of Fig. 1.12.

**Step 2:** Sketch one quarter of the circle lightly and then sketch the other quarter of the circle as shown in step 2 and 3 of Figure 1.12.

**Step 3:** Sketch the other half of the circles in the same manner. Darken the finale circle and change the light horizontal and vertical construction lines intersecting at the center of the circle into centerlines as shown in step 4 of Fig.1.12.

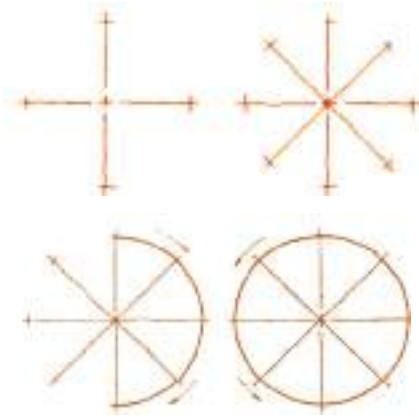


**Fig. 1.12 Sketching a circle with diameter greater than 25mm**

## Large Sizes Greater Than 25 mm Diameter

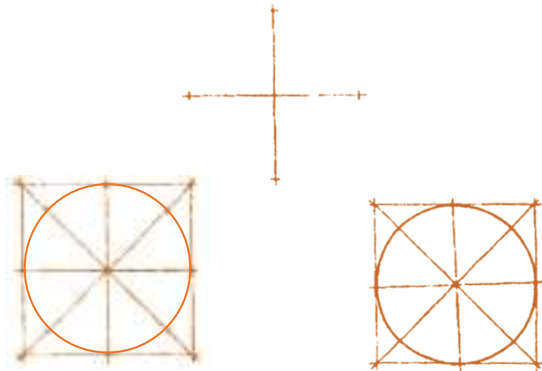
If the size of the circle is large (greater than 25mm diameter) the number of construction lines used is increased to mark more number of points on the circle. For example, a circle is sketched as shown in Fig. 1.13 by using four construction lines intersecting at the center of the circle. By marking off the radius on each of these lines, eight points are found. These points are joined to sketch the required circle. The sketching process of a circle is simpler when there are more number of points.





**Fig. 1.13 Sketching a circle with diameter greater than 25mm**

When sketching even larger circles, sketch a construction square box whose side length is equal to the diameter of the circle as illustrated in Fig. 1.14. This box will help to make the roundness of the circle as perfect as possible.



**Fig. 1.14 Sketching a large circle**

**Checkpoint 1.4**

**Sketching circles**

On an A4 paper sketch as many circles as you can. Use the same point as a center to all circles. Start with a circle of 10mm diameter.

**b. Sketching Arcs**

As an arc is part of a circle, sketching of arcs is similar to that of the circles.

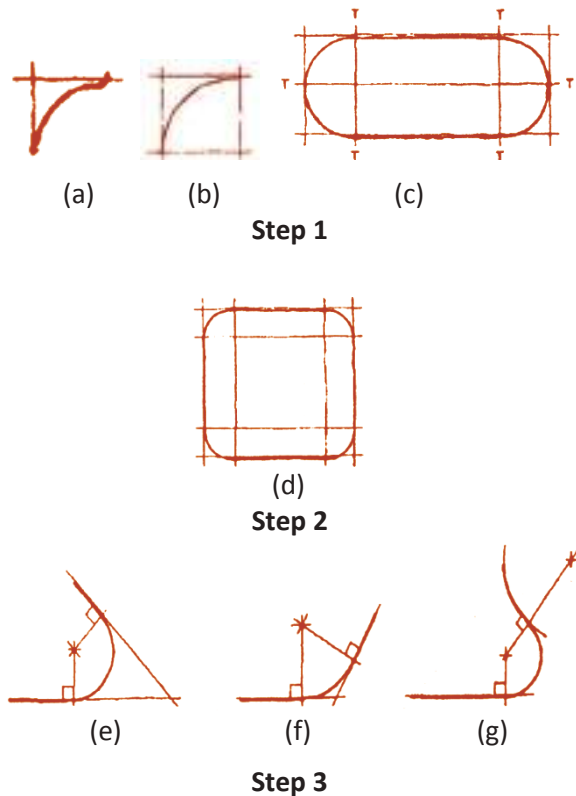
**Steps to sketch an arc**

**Step 1:** Sketch construction lines intersecting at the center of the arc; more number of construction lines may be necessary for large size arcs.

**Step 2:** Mark the radius of the arc on all construction lines.

**Step 3:** The marked points are joined to complete the arc.

Sketching of arcs of different sizes at various conditions are illustrated in Fig. 1.15.



**Fig. 1.15 Sketching arcs**

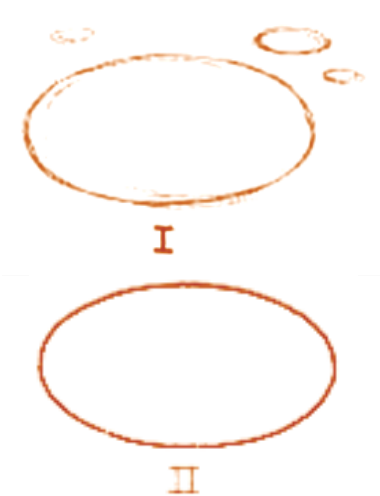
**Checkpoint 1.5**

*Sketching arcs*

On an A4 drawing paper copy the arcs shown in Fig.1.15 to any convenient size.

**Sketching Ellipses**

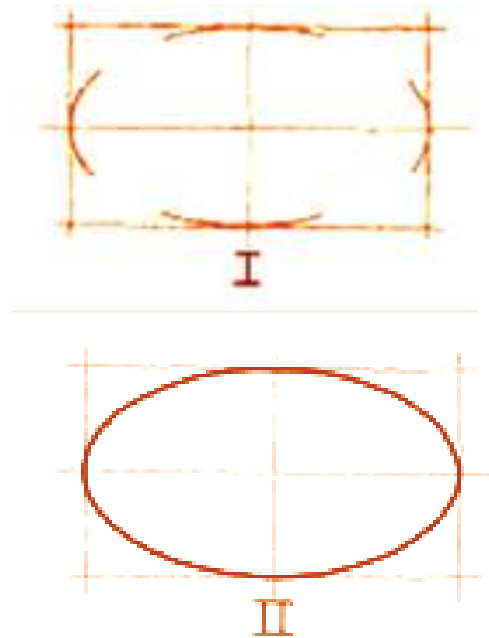
If a circle is viewed obliquely, it appears as an ellipse. With a little practice, you can learn to sketch small ellipses with a free arm movement. Hold the pencil naturally, rest the weight on the upper part of the forearm, and move the pencil rapidly above the paper in the elliptical path desired; so lower the pencil so as to describe several light overlapping ellipses, as shown at I and heavy in the final ellipse II.



**Fig. 1.16 Sketching an ellipse with free arm movement**

Another method is to sketch lightly the enclosing rectangle, Fig.1.17 (I) mark the midpoints of the sides, and sketch light tangent arcs, as shown. Then, Fig.1.17 (II)

complete the ellipse. Lightly all lines and heavy in the final ellipse.



**Fig. 1.17 Sketching ellipse with light enclosing rectangle**

**Checkpoint 1.6**

*Sketching ellipses*

Practice sketching ellipses on a plain sheet of A4 size paper whose major and minor diameters are 50mm and 30mm respectively.

**1.5.2 Dividing Lines and Areas Equally**

The beginner must recognize the importance of being able to estimate comparative relationships between the width, height, and depth of an object being sketched. The complete problem of proportioning a sketch also involves relating the estimated

dimensions for any component parts, such as slots, holes, and projections, to the over-all dimensions of the object. This is not the practices of attempting to estimate actual dimensions.

To become proficient at sketching one must learn to recognize proportions and be able to compare dimensions "by eye" until one is able to do so. One cannot really "think with ones pencil". Some people can develop a keen eye for proportion with only a limited amount of practice and can maintain these estimated proportions when making the views of a sketch.

### 1. Dividing a line into equal parts

*To divide a line into any even number of equal parts follow the following steps;*

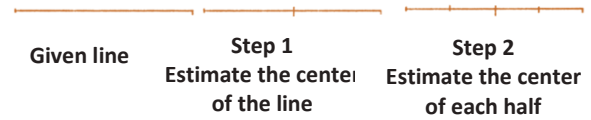
**Step 1:** Estimate the mid-point of the line.

**Step 2:** Estimate the mid points of each half.

**Step 3:** Then estimate the mid points of the resulting four parts of the line and so on.

However, you should practice estimating one-third, one-fifth and one-seventh of short lines to be able to divide a line into three, five, seven, or a multiple of them. For example, to divide a line into ten equal parts, start by estimating the midpoint of the line. Then you should estimate the one-fifth of

each half and mark the division points all over the line. Figure 1.18 shows the steps involved in dividing a line into four equal parts.



**Fig. 1.18 Dividing a line into four parts**

#### Checkpoint 1.7

*Dividing a line into a required number of parts*

Sketch four horizontal lines which are 100mm long each on a plain sheet of A4 size paper. Carefully divide the first line into three equal divisions, the second line into five equal divisions, the third line into seven equal divisions, and the final line into eight equal divisions.

## 2. Dividing the Area of a Triangle

To divide a triangular area into any number of equal areas follow the following steps;

**Step 1:** Start by dividing the sides of the triangle into any number of parts as discussed above.

**Step 2:** Then sketch lines by connecting the vertex opposite to this side and the division points to divide the triangle into equal areas.

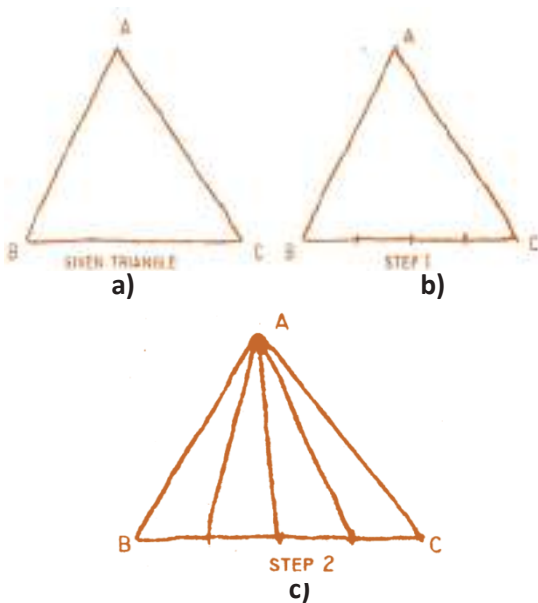


Fig. 1.19 Dividing the area of a triangle

### Checkpoint 1.8

*Dividing the area of a triangle*

Sketch a triangle whose sides are 60mm, 70mm, and 90mm long. Divide it into six equal areas as shown in Fig 1.19.

## 3. Dividing the Area of a Rectangle

In order to divide the area of a rectangle, its sides should be divided first. Fig.1.20 shows some of the techniques used in approximating one-half, one-third, one-fourth, and one-fifth of a side of a rectangle. The mid-point of a rectangle is the point of intersection of the diagonals. A line sketched through this point that is perpendicular to any side will establish the mid-point of that side. To determine a distance that is equal to one fourth the length of a side, the quarter point may be located by repeating this procedure for the small rectangle representing the upper left-hand quarter of ABCD.

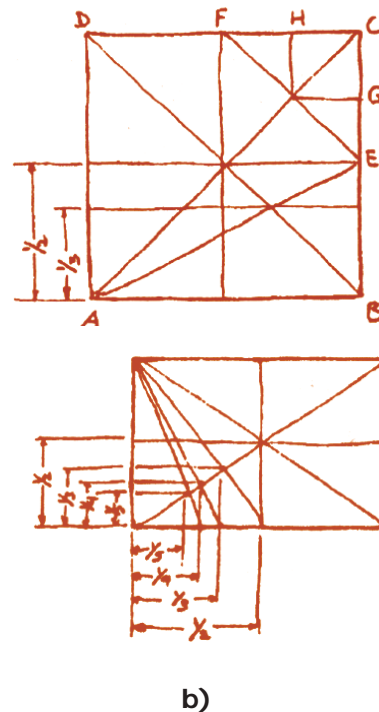


Fig. 1.20 Method of proportioning the area of a rectangle

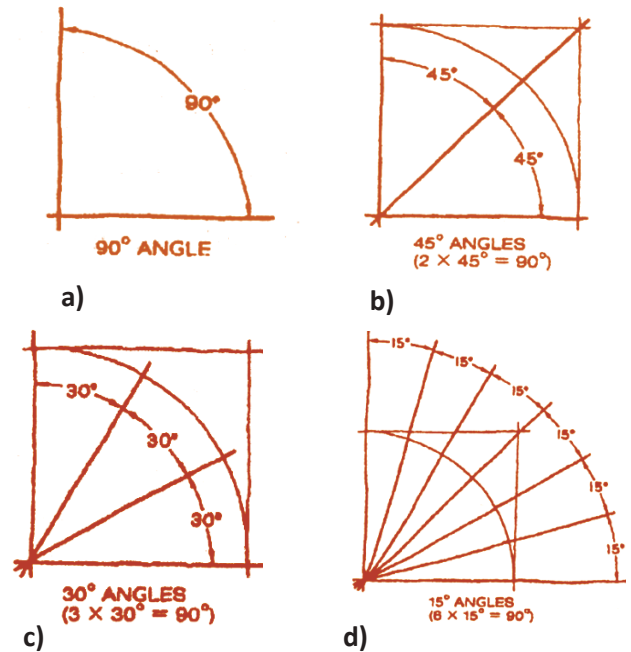
**Checkpoint 1.9***Dividing the area of a rectangle*

Sketch a rectangle whose sides are about 100mm and 50mm long. Divide its area into 10 equal rectangles.

**1.5.3 Sketching Angles****Activity 1.1**

- How can you estimate a given angle?  
Discuss and come with practical ideas to present in group.

One of the important sketching skills is the ability to approximate a required angle. As illustrated in Fig. 1.21, a  $90^\circ$  angle can be approximated by sketching two nearly perpendicular lines as shown at Fig 1.12 (a). To sketch a  $45^\circ$  angle, sketch a square and connect its opposite corners as shown at (b). To sketch a  $30^\circ$  angle, sketch a square and an arc inside the square as shown at (c). Then, divide the arc into three equal parts and connect the division points to the vertex of the angles. Similarly, a  $15^\circ$  angle can be approximated by dividing the arc into six equal parts as shown at (d). Different angles can be constructed by bisecting angles that can easily be approximated. For example, a  $7^\circ$  angle can be approximated by bisecting a  $15^\circ$  angle. A  $22^\circ$  angle can be approximated by bisecting a  $45^\circ$  angle.



**Fig. 1.21 Sketching approximate angle**

**Checkpoint 1.10***Sketching angles*

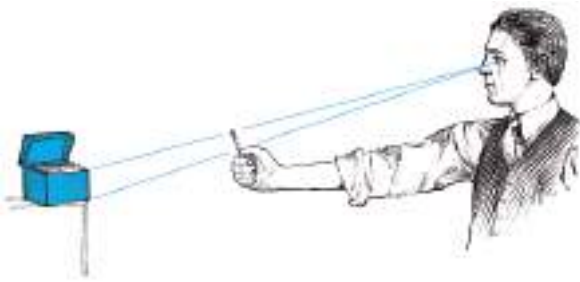
Sketch  $7^\circ$ ,  $15^\circ$ ,  $30^\circ$ ,  $45^\circ$ , and  $90^\circ$  angles whose sides are all 50mm long.

**1.5.4 Sketching the Given Objects**

As stated in section 1.7, in the sketch of an object, the relative proportions of its primary dimensions (width, height, and depth) are more important than their actual physical sizes. A proportion is the ratio between any two dimensions of an object. The most important rule in freehand sketching is to keep the sketch in proportion.

### 1. Proportioning Large Objects

In sketching from an actual object, you can easily compare various distances on the object by using the pencil to compare measurements as shown in Fig. 1.22. By holding the pencil between the eye and the object, one end of the pencil can be made to coincide with one end of the object and then the thumb is moved along the pencil until it coincides with the other end of the object. The length may then be used to obtain the relative proportions of the object. While doing this, do not change your position, and always hold your pencil at arm's length. The length sighted can then be compared in similar manner with any other dimension of



**Fig. 1.22 Method of obtaining proportions when sketching large objects**

As you have seen in grade 11 text, projection can be classified into *parallel* and *perspective projection*. Multi-view, isometric and oblique projection use parallel projection. In the following section sketching of each projection will be discussed.

### 2. Multi-view Sketching

There are two recommended procedures for laying out multi-view sketches: The *outside-in method* and the *inside-out method*. Both these methods use construction boxes to facilitate the sketching process.

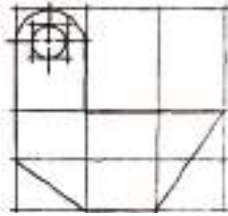
#### **a) Outside-in Method**

This method is illustrated in Fig 1.23. The first step is to block in the main outline of the given object to a desired scale. The blocking of details follows. Finally, the lines required to form the object are darkened. This method is particularly useful for objects whose outline is made up of straight lines.

#### **Activity 1.2**

1. Sketch a simple object from your class room, for example table or chair and show your instructor.
2. Form a group and share ideas on the concept of proportion. After this choose a group leader and let the group leader share your ideas to the other groups, similarly let the other group leader come to you and present the idea of others.





Given object



Step 1

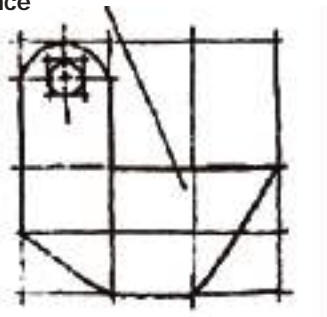
Sketch center lines and main construction box using proportional distances at the desired enlarged size.

This face is true



Step 2

Block in details of the object proportional distance



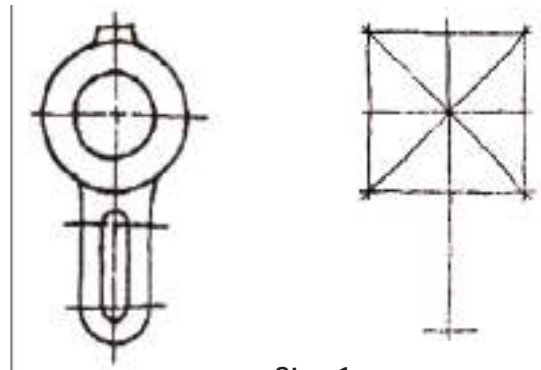
Step 3

Darken the final object

**Fig. 1.23 sketching an object to a reduced scale using the outside-in method**

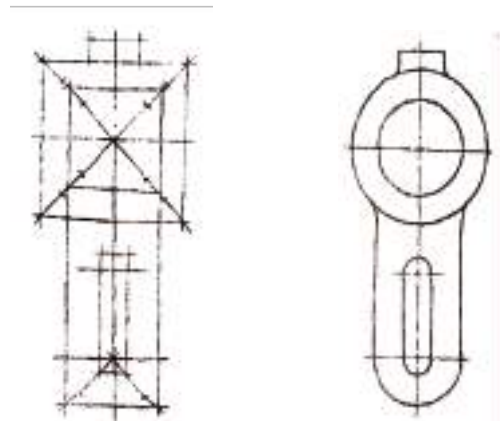
**b) Inside-out method**

In this method, as its name implies, construction is done from inside out. That is, no blocking of the object as a whole is necessary. Rather starting from a single detail, construction continues until all details are over. Finally, the desired lines are darkened. This method is illustrated in Fig. 1.24.



Step 1

Sketch center lines and main construction box using proportional distances at the desired enlarged size.



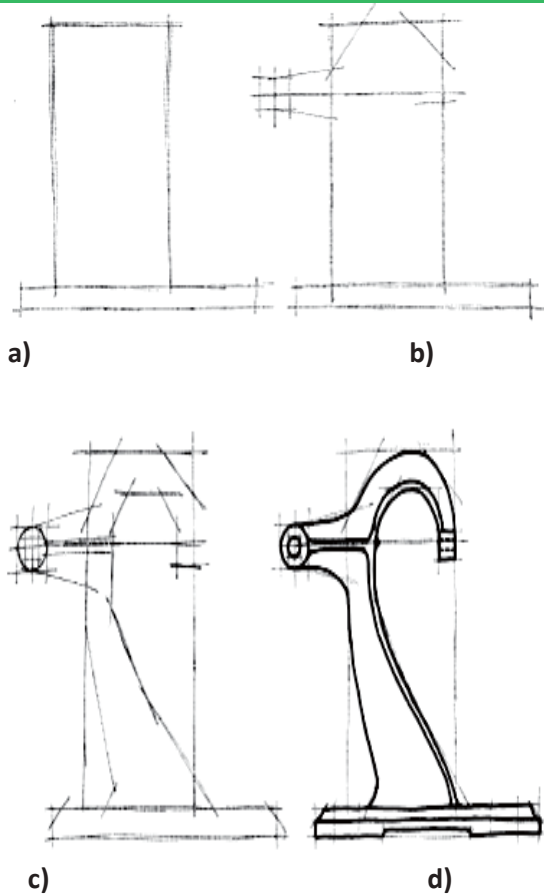
Step 2

Block in other details and mark off radii using proportional distances

Step 3

Darken final object



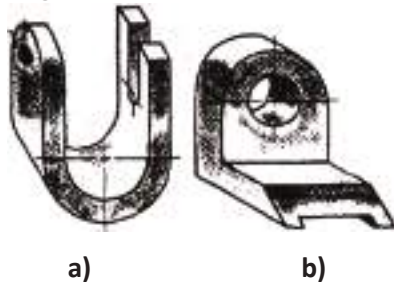


**Fig. 1.24** Sketching an object to a magnified scale using the inside – out method

**Check point 1.11**

**Sketch the view of an object**

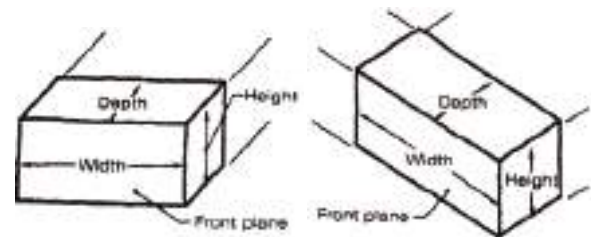
Sketch the three views of the objects shown in Figure (a) and (b) to any convenient magnified scale.



**3. Pictorial sketching**

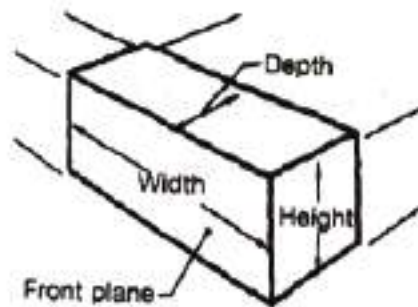
1. Recall the types of pictorial drawings you know from grade 11 parts.
2. How do you think pictorial drawing can be done by sketching?

Pictorial sketching is used for preparing pictorial drawings that shows all the three dimensions of an object: width, height and depth. Sales engineers may frequently include pictorial sketches with orthographic sketches when preparing field reports on the needs and suggestions of the firm's customers. Students may use pictorial sketches as an aid in visualizing and organizing problems.



Oblique: Receding Parallel lines  
(a)

Axonometric: Receding Parallel lines  
(b)



Perspective: Receding Converging lines  
(c)

**Fig. 1.25** Sketch the three types of pictorial sketches

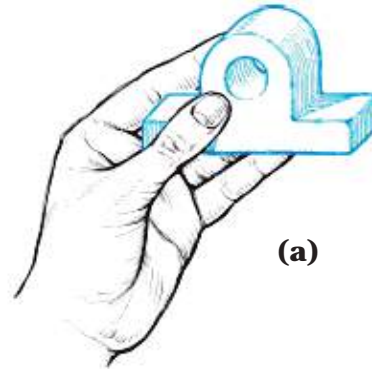
The three principal types of pictorial sketches are: *Oblique*, *Axonometric*, and *Perspective* sketches. These forms are illustrated in Fig 1.25. Of the three principal types of pictorial sketches, oblique and axonometric sketches are widely used by engineers but perspective sketches are mainly used by architects to produce sketches of interior and exterior of buildings.

As part of technical drawing, artistic ability is not necessary to prepare pictorial sketches. By practicing the basic sketching techniques, anyone can prepare pictorial sketches that will be satisfactory for all practical purposes.

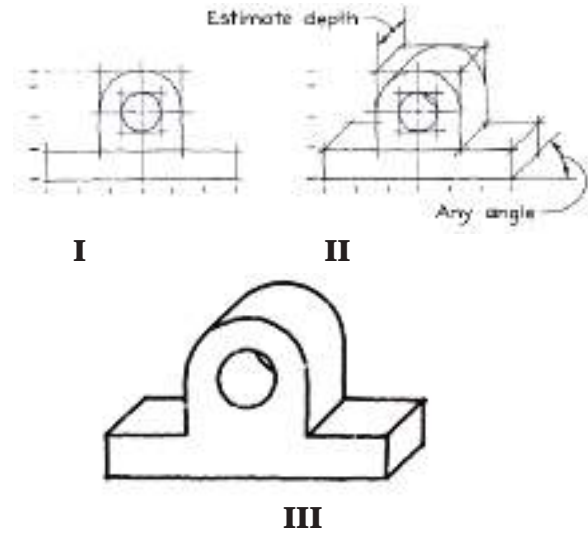
### ***i. Oblique sketching***

Oblique sketching is a simple method of sketching objects pictorially. The procedure for sketching is as follows:

- Block in the front face of the object, as if you were sketching a front view.
- Sketch receding (inclined) lines parallel to each other and at any convenient angle, say  $30^\circ$  or  $45^\circ$  with horizontal, approximately. Cut off receding lines so that the depth appears correct.
- Dimension all construction and darken the final lines.



**Fig. 1.26 Making of the oblique sketch**

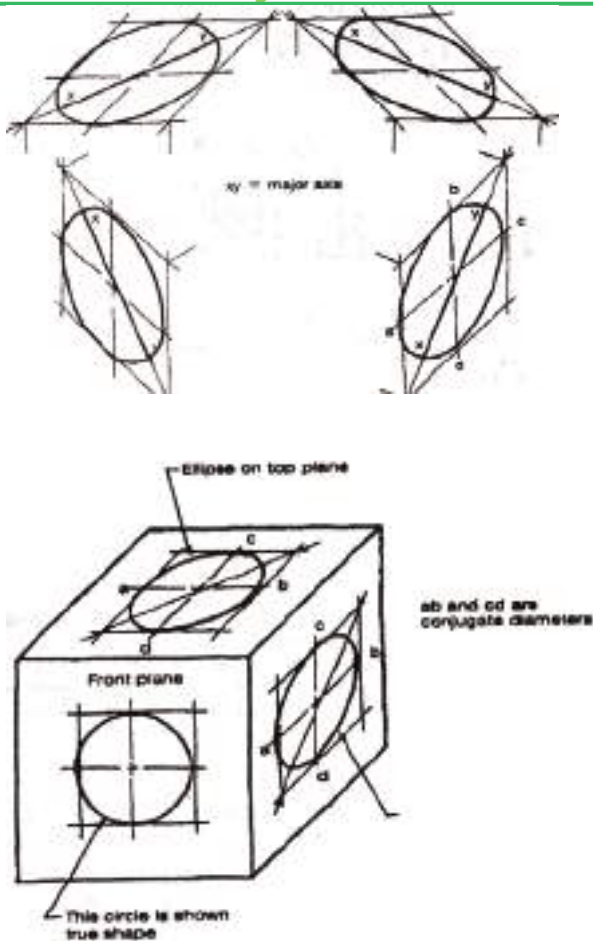


**Fig. 1.27 Making of Oblique sketch**

Note that, as discussed in oblique drawing, the direction of the receding lines may be different depending on the shape of the object and the necessary details to be revealed.

The steps to be followed while sketching cylindrical objects or cylindrical parts of objects are shown in Fig.1.29. Observe carefully how points of tangency are located before drawing the limiting line elements.

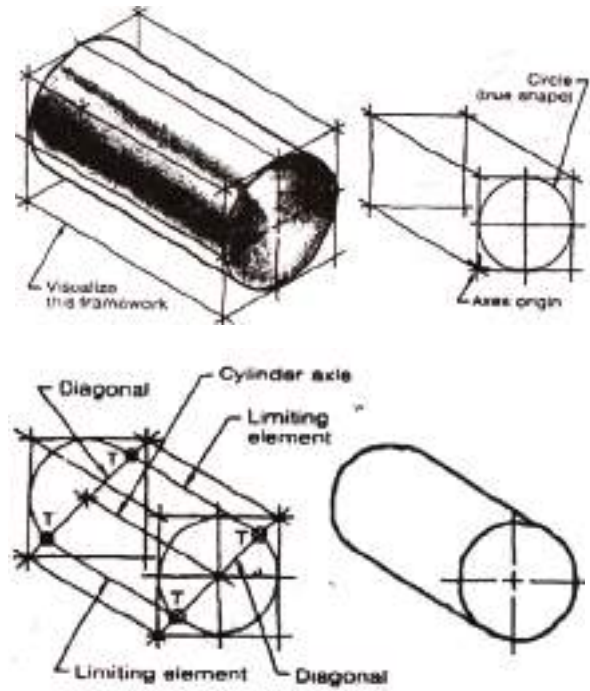
## 1 Free hand Sketching



**Fig. 1.28 sketching circles in oblique sketches**

Note that angles and circles to be made on the face formed by the vertical and horizontal axes (the front face) will be sketched as they are but distorted on the other faces. The angles will be formed automatically as their sides are sketched but the circles should be sketched as illustrated in Fig.1.28, and the circles become ellipses. These ellipses are sketched after sketching the enclosing rhombuses whose sides are equal to the diameters of the circles. The ellipses should be sketched tangent to the sides of the rhombuses at their midpoints.

The diagonals of the rhombuses are used to help keep the ellipse symmetrical.



**Fig. 1.29 Making an oblique sketch of a cylinder**

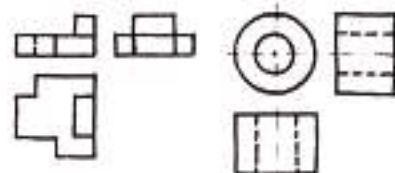
### Check point 1.12

#### Making oblique sketches

Make oblique sketches of the objects whose multi-view sketches are shown in Fig. (a) and (b) with magnified scale.

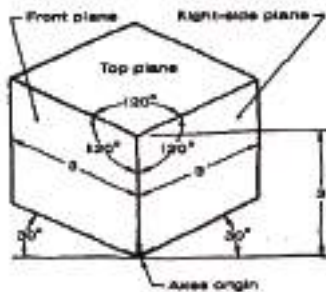
a)

b)

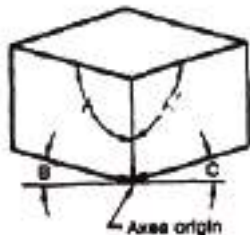


## ii. Axonometric Sketching

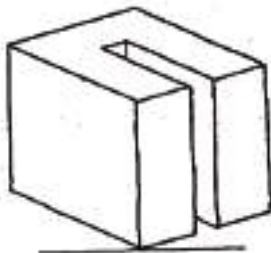
Similar to axonometric drawing you have learned in your grade 11 lesson, there are three types of axonometric sketches: isometric, dimetric, and trimetric. Recall that the difference between these sketches is the angle between the three axes used for construction, as shown in Fig. 1.30.



- a) Isometric position three equal angles three equal axes



- b) Dimetric position: two equal angles (angle  $a = \text{angle } a'$ ) angle  $b$  and  $c$  may be drawn at any convenient angle



- c) Trimetric position: no equal angles.

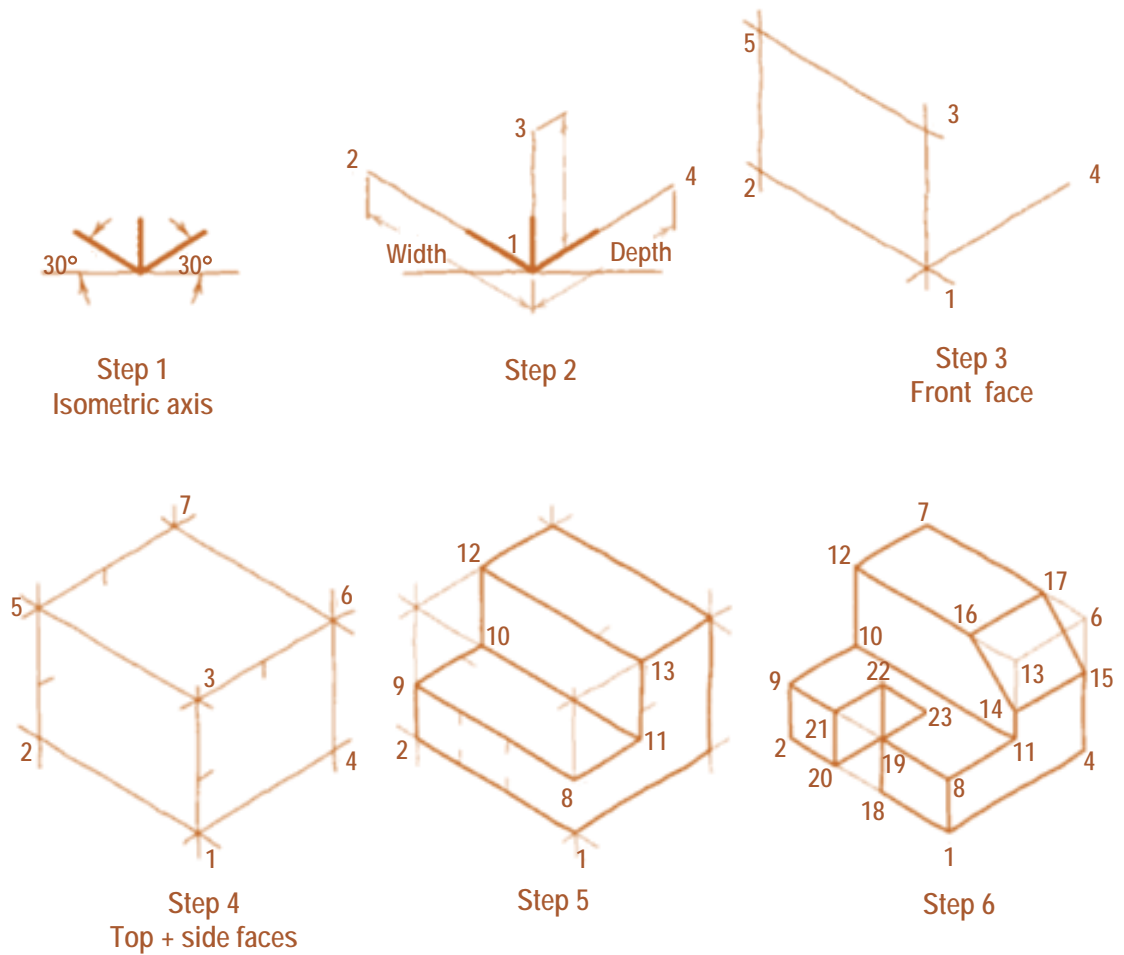
Among these three types of axonometric sketches, the isometric sketch is the most common. Below are given some important techniques in isometric sketching.

### Making an Isometric Sketch

Another type of three-dimensional pictorial is the isometric drawing, which may be drawn on a specially printed grid composed of a series of lines making  $60^\circ$  angles with one another.

Many of the sketching techniques are the same as those used to produce single-view and oblique sketches, particularly with respect to blocking in the original object and estimating proportions. To prepare an isometric sketch of a given object, begin by sketching the axes. Then sketch the enclosing box as shown in step 4 of Fig. 1.31. Continue to sketch details as shown in step 5. Note that distances or dimensions are always measured parallel to the axes. These axes in isometric sketching are known as isometric axes. Draw non-isometric axes and finally darken the necessary lines as shown in step 6.

**Fig.1.30 making an isometric sketch**



**Fig. 1.31 Making an isometric sketch**

### Project work

Sketch at the end of this unit real two or more buildings around your school or home with A<sub>4</sub> size paper by applying the techniques you have learned. Then, show to you classmate and share ideas on the concept of proportion and the techniques you have used.

Examples to be sketched

1. School laboratories buildings
2. City administrative buildings
3. Your neighbor homes .....etc.

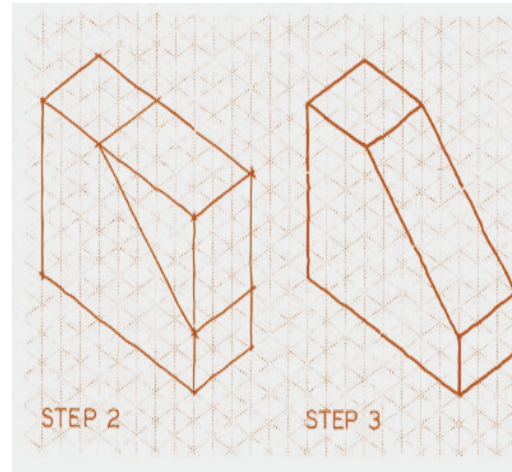


**Steps to make a pictorial sketching are:**

**Step 1:** Begin by drawing a box using the overall dimensions given in the orthographic views. Count the squares, and transfer them to the isometric grid.

**Step 2:** Angles cannot be measured with a protractor. Angles will be either larger or smaller than their true measurements. Find each end of the angle by measuring along the axes.

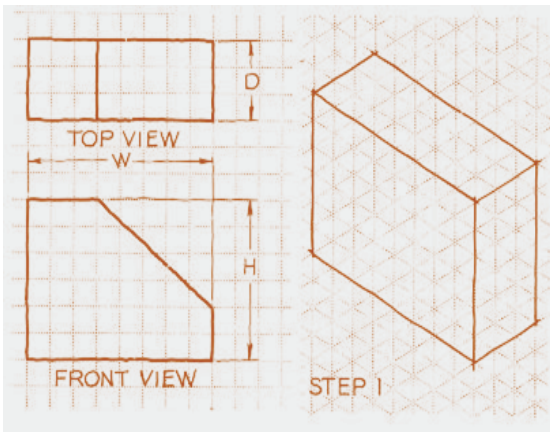
**Step 3:** The ends of the angles are connected. Dimensions can be measured only in directions parallel to the three axes.

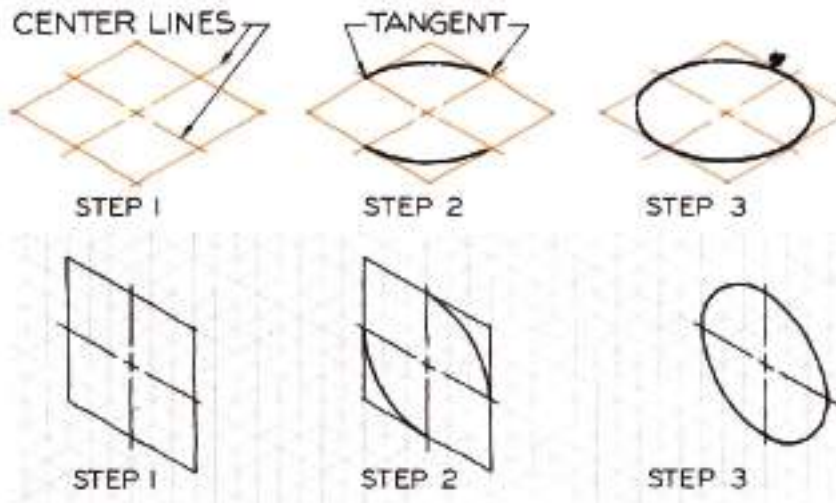


**Fig. 1.32 steps of isometric sketching**

Notice that isometric lines can be directly measured while non-isometric lines are established by their endpoints. Depending on the type of the object and the necessary detail that the sketcher would like to reveal, isometric axes can be sketched in different directions.

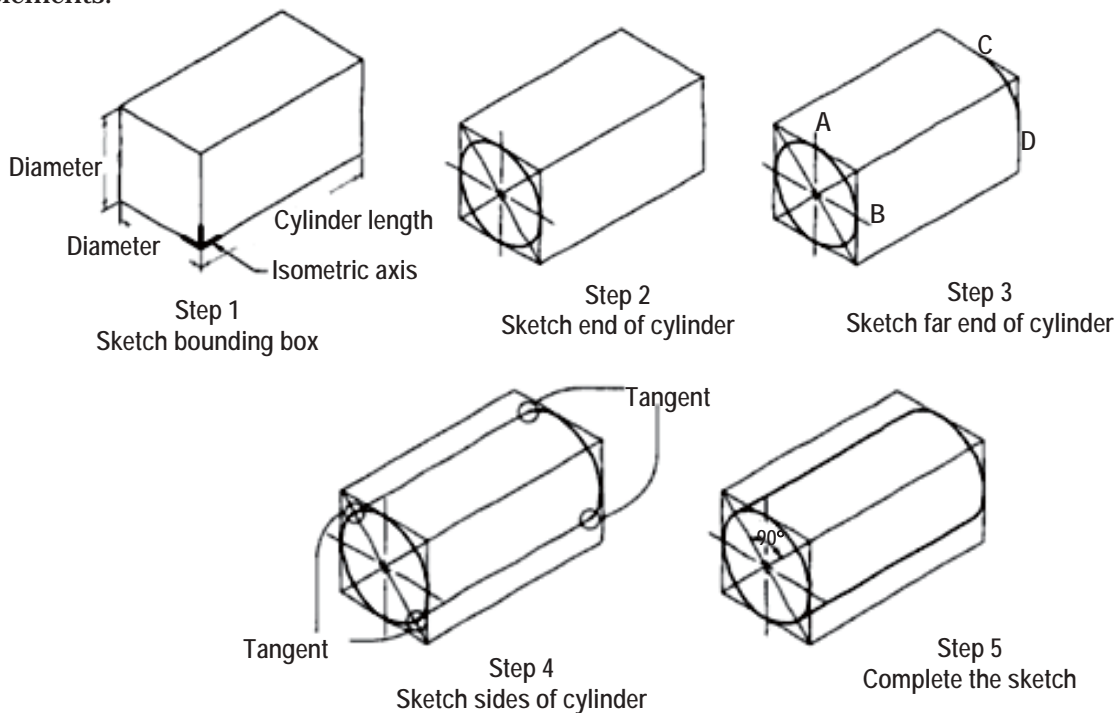
Alike isometric drawing, in isometric sketching, all faces are sketched distorted. Therefore, circles will become ellipses called isometric circles. Construction of isometric circles is illustrated in Fig. 1.33.





**Fig. 1.33 sketching isometric circles**

Sketching of cylindrical parts of objects is shown in Fig. 1.34. Once again observe carefully how the points of tangency are located before sketching the limiting line elements.

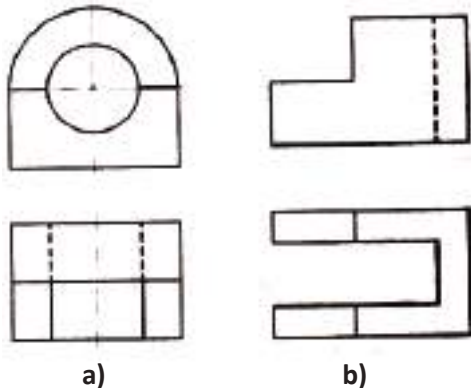


**Fig. 1.34 Isometric sketching of cylindrical parts**



**Check point 1.13****Making isometric sketches**

Prepare isometric sketches of the objects whose front and top view are given in figure.


**iii. Perspective sketching**

A sketch that has been prepared in accordance with the concepts of perspective will present a somewhat more pleasing and realistic effect than one in oblique or axonometric. A perspective sketch actually presents an object as it would appear when observed from a particular point.

In oblique and axonometric sketches, lines that are parallel on the actual object are sketched parallel. However, this is not the case in actual perception. For example, when we look at a long straight asphalt road of constant width, the road seems to be narrower and narrower as we look far away

from us until it becomes a point at the horizon. If we look at a large building, it seems that the height of the building near to us is greater than that of its height away from us.

Similarly, if we look at electric poles of the same heights erected in a straight line, their heights seem to be decreasing until they disappear at the horizon. It is based on this observation that perspective sketches are defined. Therefore lines that are parallel on the actual object may become nonparallel on their perspective sketch. Fig. 1.35 shows a sketch of rail and electric poles, the point where all lines appear to meet is called the vanishing point. This vanishing point is located on a line referred to as the horizon line.



**Fig. 1.35 In a perspective sketch, all lines seem to disappear at the horizon**

The two types of perspective sketches that are common in technical sketching are: *One-point perspective* and *two-point perspective*.

## 1 Free hand Sketching

### a) One-point Perspective

One-point perspective (parallel perspective) sketch is made with one vanishing point. In this sketch, one of the principal faces is parallel to the picture plane.

*The following steps may be followed during preparing a one-point perspective sketch as shown in Fig. 1.36.*

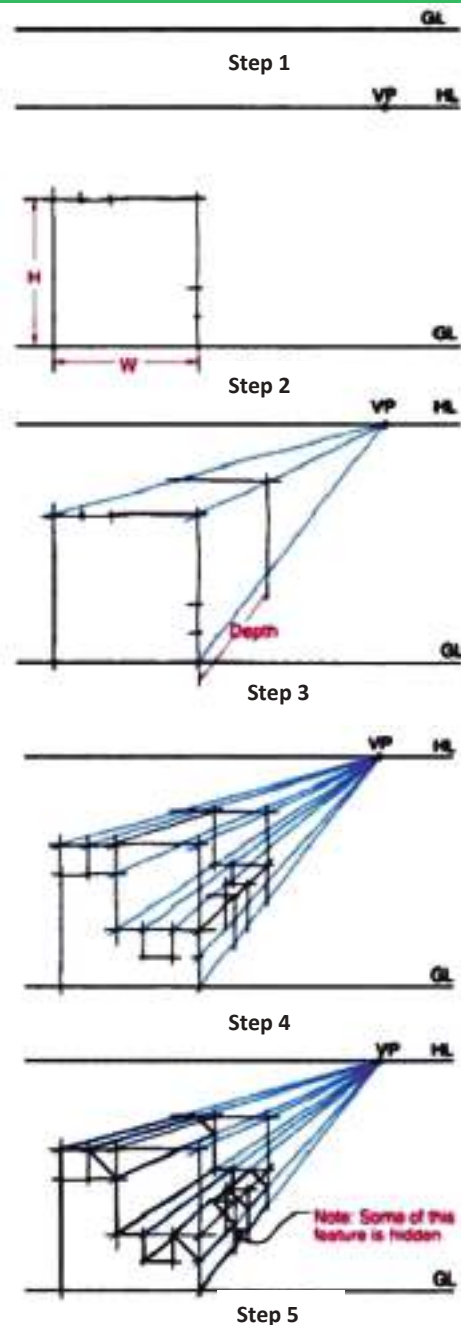
**Step 1:** Sketch the horizon line and locate the vanishing point (VP) on the horizon. The vanishing point may be located to the right, to the left, or at the midpoint of the horizon.

**Step 2:** Draw the front view of the object at any convenient distance below the horizon line.

**Step 3:** Sketch light construction lines from points on the front view to the vanishing point. Locate points along the depth and construct the enclosing box. Points along the depth may be located by projection method. However, this needs a more involved procedure and is thus used only when drawing with instruments. In sketching, points along the depth are simply assumed in such a way that the final sketch will be pleasing enough.

**Step 4:** Sketch the details on each face.

**Step 5:** Darken the object lines to complete the sketch.



**Fig. 1.36 making one-point perspective sketches**

### b) Two-point Perspective

Two-point perspective (Angular perspective) sketch is a most common perspective sketching made with two vanishing points.

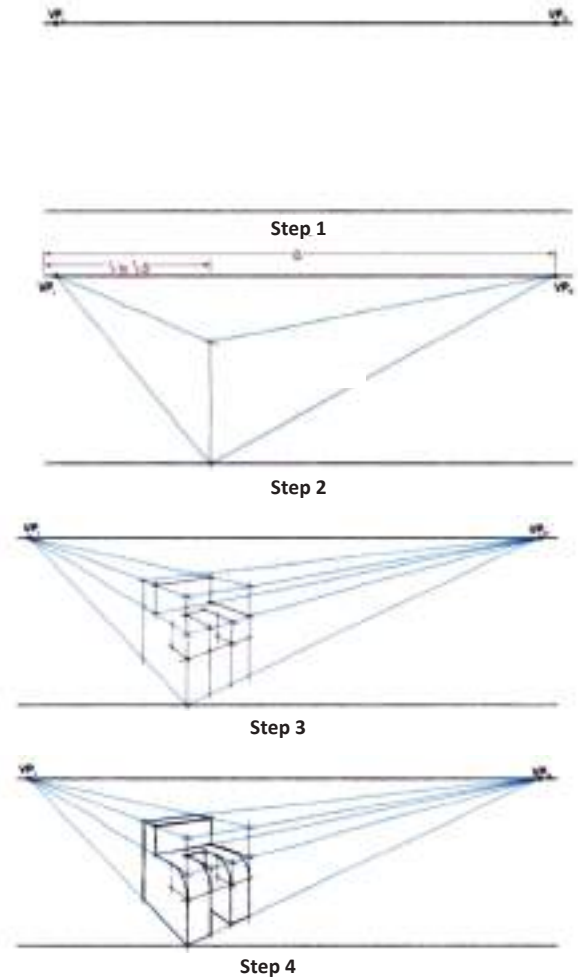
To make a two-point perspective sketch the following steps are recommended. See Fig. 1.37.

**Step 1:** Sketch the horizon line and locate the left side vanishing point (VPL) and the right side vanishing point (VPR).

**Step 2:** draw a single vertical line at a location between one-quarter and one-third the distance from the left vanishing point. This line will represent the closest edge of the point. Mark the height of the object on the vertical line, measuring upward from the ground line, and draw converging lines from the top and bottom of the vertical line to both vanishing points.

**Step 3:** continue by creating the bounding box and roughing in the features. Remember that only the vertical lines will not converge.

**Step 4:** Finish the sketch by darkening all of the final lines.

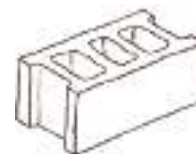


**Fig. 1.37 Making two-point (angular) perspective sketch**

**Check point 1.14**

**Making perspective sketches**

Sketch one and two-point perspective sketches of the objects shown in the figure.



## UNIT SUMMARY

Sketching is one of the primary modes of communication in the initial stages of the design process. Sketching also is a means to creative thinking. It has been shown that your mind works creatively when your hand is sketching as you are engaged in thinking about a problem.

Sketching is usually done at any location that has a flat surface. The materials used most often for sketching are paper (preferably grid paper), soft lead pencils, and an eraser. The grid on grid paper speeds the construction of any sketch.

Horizontal lines are drawn by locating their end points and connecting them with a line. Draw lines using construction lines first and, later, after the design is close to completion, go back and darken them. The pencil is moved from the left to the right.

Vertical lines are drawn with the same general technique. For vertical lines move the pencil from the top toward the bottom of the paper.

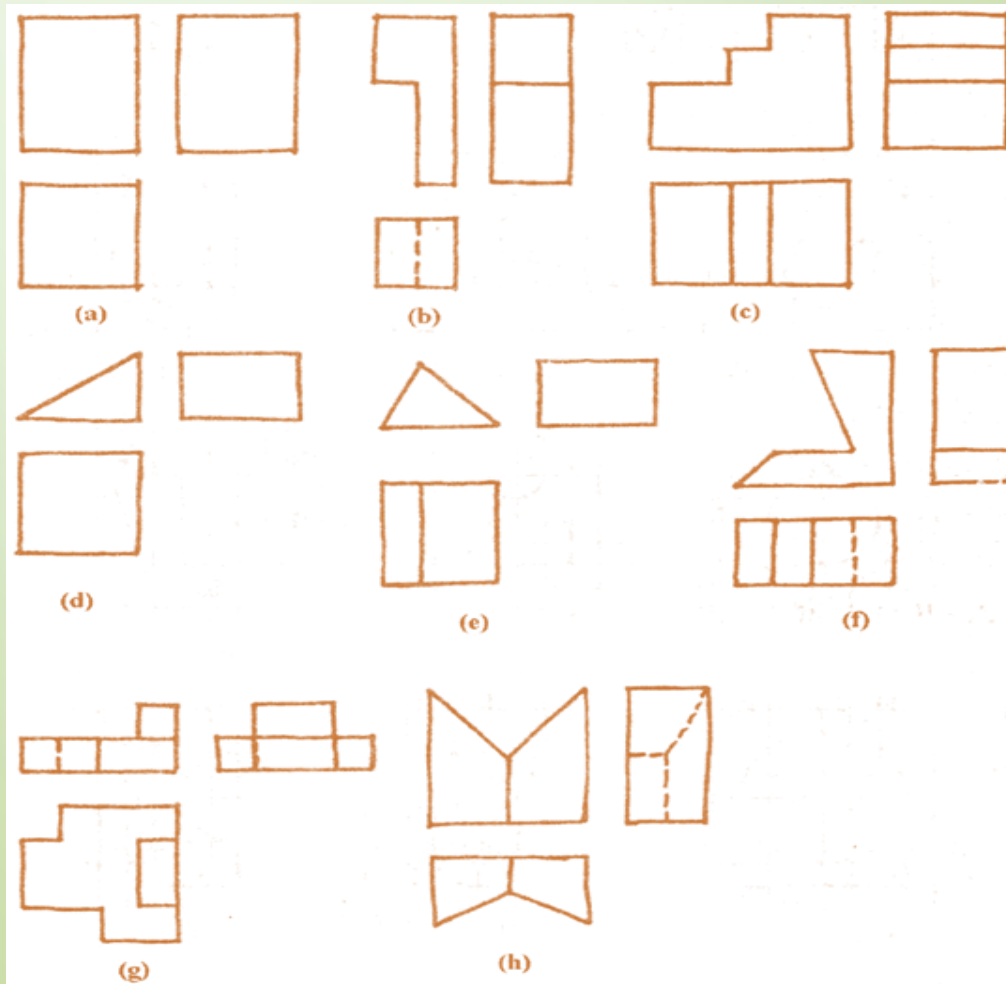
Always to sketch arcs and circles start by locating the centre point of the circle or arc, then draw the centre lines of the circle. Next, draw diagonals and lay out the diameter on the diagonals. If the circle is large, divide the circle into smaller segments and connect the points by sketching short arcs to complete the circle.


To become proficient at sketching one must learn to recognize proportions and be able to compare dimensions “by eye” until one is able to do so.

In this chapter, you learned about techniques for successfully sketching basic shapes such as lines, arc, circles, and ellipses and about some techniques how to make basic multi-view and pictorial sketches of objects and about some of the rules that govern the creation of these sketches. You also learned about creating ellipses in isometric to represent circular holes in objects.

### Exercise: Pictorial Sketching

1. Make oblique sketches from the given multi-view sketches in Fig. Ex. 1.1. Select a receding line direction and an angle that will reveal as much detail of the object as possible.
2. Make isometric sketches from the given multi-view sketches in Fig. Ex.1.1. Select a receding line direction and an angle that will reveal as much detail of the object as possible.



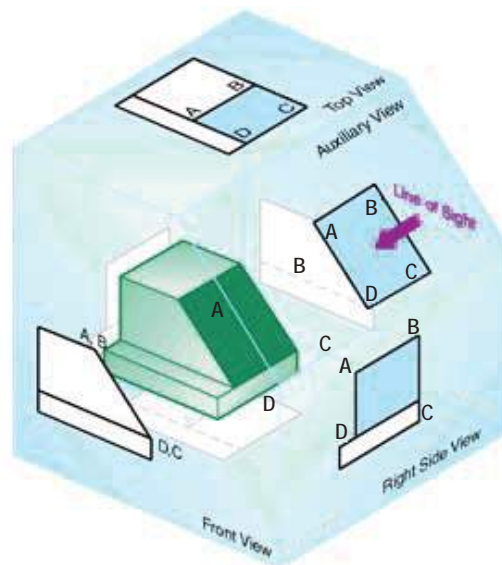




# UNIT

# 2

## AUXILIARY VIEWS



### Learning Competencies:

*At the end of this chapter you will have through understanding on the following topics.*

- The basic principle of orthographic projection;
- The type, use and application of auxiliary views ;
- Draw primary and secondary auxiliary views;
- Use reference lines properly as an aid in constructing auxiliary views;
- Construct partial and complete auxiliary views.



### 2.1 Introduction

1. Form a group and discuss on projection, principal planes of projection and types of planes from your past experience of grade 11.
2. How do you find the true shape of a surface which is not parallel to the principal planes?

In many objects there are external surfaces that are inclined to one or all of the three principal planes of projection. The projection of the object on any of the principal projection planes will not give the actual size and shape descriptions of these inclined faces. For practical reasons, it is essential to know the true size and shape description of the surfaces for accurate manufacturing of objects. When it is desired to show the true size and shape of a non principal surface, the object should be projected on a plane parallel to that surface. This additional imaginary projection plane is known as *auxiliary plane*, and the resulting view obtained is thus an *auxiliary view*.

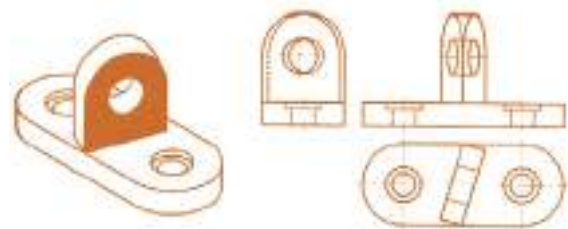
The underlying basic principles of projecting principal views of an object are also applied to auxiliary views. That is, auxiliary projection is a kind of orthographic projection as viewed by an observer stationed at infinite distance away from an object and looking towards the object perpendicular to its inclined surface.

In this chapter, the basic principles of auxiliary projection of an object will be discussed.

### Uses of Auxiliary Views

1. What do you think is the importance of auxiliary view?
2. How can you project the true shape of an inclined plane on orthographic projection?

Inclined features on an object that are not parallel to any of the principal planes of projection always appear foreshortened and distorted in the regular views of the object. The true shape of such a surface is shown only when the line of sight is in a direction perpendicular to the plane of projection. In Fig.2.1, the shaded surface of the object is an inclined feature that does not appear in true size and shape in either of the front or right side views.



a) Pictorial representation    b) Orthographic views

**Fig. 2.1 Principal views of an object with inclined features**

The true shape and relationship of such inclined features are shown by appropriate auxiliary views. Auxiliary views are aligned with the views from which they are projected, and this enables an observer to view objects orthographically from any desired position. The shaded surface in Fig.2.2 is shown in its true shape and size on the auxiliary plane; because in this view the line of sight is perpendicular to the inclined surface.



a) Pictorial representation    b) Orthographic views

**Fig.2.2 Uses of auxiliary view**

In general, auxiliary views are used for determining;

- the true length and inclinations of a line,
- the point view of a line and edge view of a plane,
- the true shape and size of a plane,
- the distance between two skew lines,
- the projections of solids,
- the true shapes of sections of solids,
- Curves of intersections, etc.

## 2.2 Overview of Orthographic Projection

The practical application of orthographic projection to the description of the geometry of three dimensional objects is very important. The geometry of relations between points, lines and planes is essential to the design of various products. On many occasions, different problems arise in technical drawing that may be solved easily by applying the basic principles of orthographic projection. Practical solid geometry or merely descriptive geometry deals with the

representations of physical objects such as points, lines, planes and solid objects on various picture planes based on the principles of orthographic projection.

Before passing to those principles, it is worth noting to understand the following concepts clearly.

- **Reference Line (Folding or Hinge Line):** It is the line of intersection between two mutually perpendicular projection planes. Such lines are used as base lines from which all measurements of distances of points along the projectors are taken in relation to other projections. It is represented by a phantom line (a line pattern formed by a series of one long dash followed by two short dashes). It is named after the notation of the two intersecting perpendicular planes.
- **Horizontal-Projection (Top View):** It is a view of an object formed by an orthographic projection onto a horizontal projection plane. It is also called a plan or top view of the object. The projectors in horizontal projection are assumed to be vertical.
- **Elevation Views:** a view created on a picture plane placed perpendicular to the horizontal plane of projection. The picture plane is termed as elevation plane. The common types of elevation planes are the frontal and profile projection planes. Front and side views of an object are the **principal elevation views**. It is possible to have an infinite number of elevation views

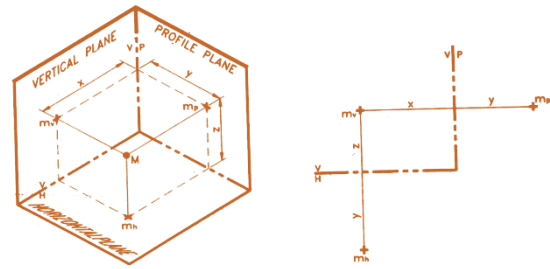
## 2 Auxiliary Views

other than the common ones. Such views are referred to as *auxiliary elevation views*. In all elevation views, the horizontal projection plane is always projected as a line.

### 2.2.1 Projection of a Point in Space

- Imagine a point in a space or in a room. Can you define the location of the point with respect to the wall, ceiling or floor in the case of a room?  
What is the relation b/n line and point?

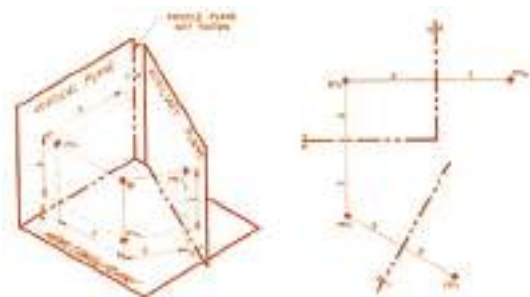
A point in space can be considered as physically real object and represented by a small dot or a small cross. Its location in space is usually identified by finding two or more projection of the point. Orthographic projections of a point on various planes are obtained by extending projectors perpendicular to the picture planes and transferring distance from one plane to another in reference to the folding lines. Figure 2.3 shows a pictorial and orthographic representation of a point M situated  $z$  units distance above the horizontal plane,  $x$  units distance to the left of the profile plane and  $y$  units distance in front of the vertical plane. The front view is labeled as  $m_v$ , the top view is labeled as  $m_h$  and the left side view is labeled as  $m_p$ . The subscripts  $v$ ,  $h$  and  $p$  signify the vertical plane, horizontal plane and profile plane respectively.



b) Pictorial representation b) Orthographic views

**Fig. 2.3 Principal projections of a point**

When the horizontal and profile projection planes in Fig.2.3(a) are rotated about the reference lines V/H and V/P respectively until both are in line with the vertical plane, the orthographic views shown in Fig. 2. 3 (b) will be obtained. Notice that distance  $z$  from this reference line to the vertical projection of the point ( $m_v$ ) is the height of the point in space above the horizontal projection plane. Likewise, the length  $y$  on the horizontal projection plane represents the distance of point M in space from the vertical plane and so on. Now, let us further project the same point M on an auxiliary elevation plane (1), which is  $s$ -units distance from the point. (See Fig 2.4)



a) Pictorial representation b) Orthographic views

**Fig.2.4 Auxiliary projection of a point**

## 2 Auxiliary Views

As illustrated in Fig.2.4 the auxiliary projection of the point ( $m_1$ ) is also located at  $z$  distance from reference line  $H/1$ . This is because both the auxiliary plane (1) and the vertical plane (V) are perpendicular to the horizontal plane. Thus, the elevation  $z$  of point  $M$  in space above the horizontal plane will be truly projected on all elevation planes, which are perpendicular to the horizontal plane. The distance  $z$  on the vertical plane can therefore be directly transferred with the help of a divider to the elevation plane (1) in order to locate the position of  $m_1$  accurately.

### Checkpoint 2.1

Three points R, S and T in space are located according to the distances specified in the following table.

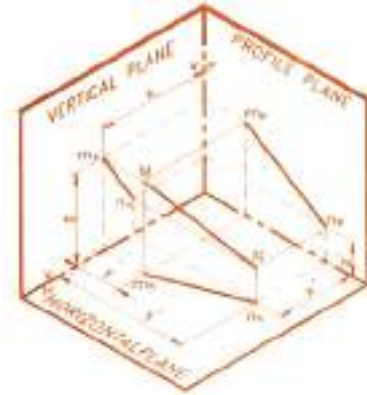
Point	R	S	T
In front of V.P.	32	13	18
Above the H.P.	26	34	15
To the Left of P.P.	41	14	12

Draw the principal projections of the three points on the same set of planes.

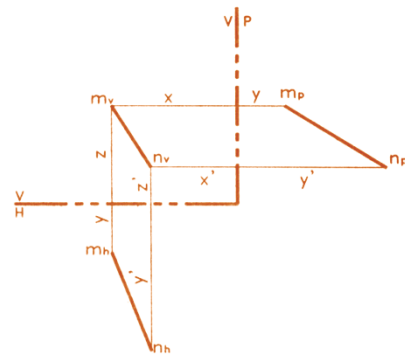
### 2.2.2 Projection of a Line

The projection of a straight line can be obtained finding the projections of the end points of the line and joining the respective projections by straight lines. Fig 2.5 shows the principal projections of line  $MN$  in space. As shown in the figure, the distance  $y$  of point  $M$  in front of the vertical plane is shown on both the horizontal and profile projection planes. This is because both

planes are common perpendicular to the vertical plane. The projections of point  $N$  are also located in a similar way, at a distance of  $y'$  from the reference lines.



(a) Pictorial representation



(b) Orthographic views

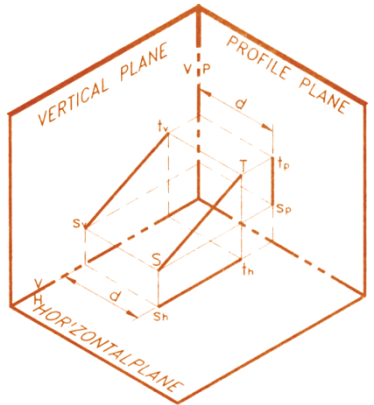
**Fig. 2.5 principal projections of a line**

### Activity 2.1

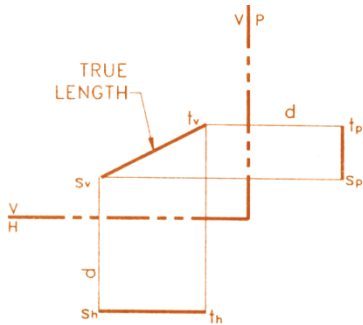
- Sketch a line when it is
  - parallel to the vertical plane
  - Parallel to the profile plane
  - Parallel to the horizontal plane and observe their appearances in different projection planes.
- Imagine a line inclined to the three principal planes and show its projection on the three projection planes with the help of sketch.
- How do you think you can find the true length of an inclined line to all the principal planes?

### A. True Length Projection (Normal View) of a Line

A straight line will appear in true length when it is projected on to a plane of projection placed parallel to the line. Depending up on the picture plane with respect to which the line is parallel, straight lines are classified as: *front line*, *horizontal line*, and *profile line*.



(a) Pictorial representation



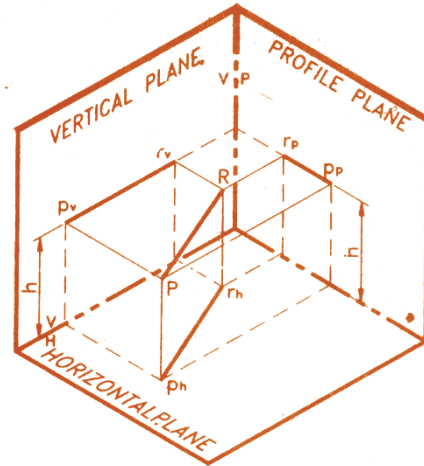
(b) Orthographic views

**Fig. 2.6 Projections of a vertical line**

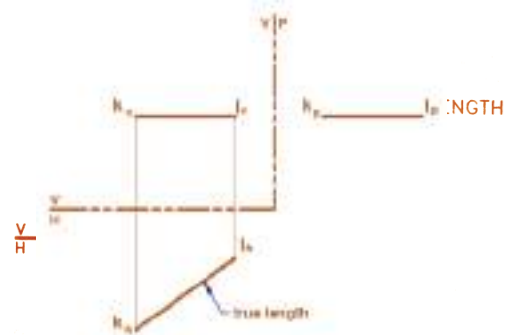
**(i) Frontal Line:** A line parallel to the vertical plane of projection is termed as a frontal line. It appears in true length in the vertical picture plane. Line *ST* in Fig.2.6 is a frontal line because points *S* and *T* are located at the same distance *d*

in front of the vertical plane. Note that the front view  $s_v t_v$  of line *ST* is a true length projection.

**(ii) Horizontal Line:** A line parallel to the horizontal projection plane is called a horizontal line. It appears in true length in the horizontal plane of projection. Line *PR* shown in Fig.2.7 is a horizontal line with its end points located *h* distance above the horizontal plane.



(a) Pictorial representation

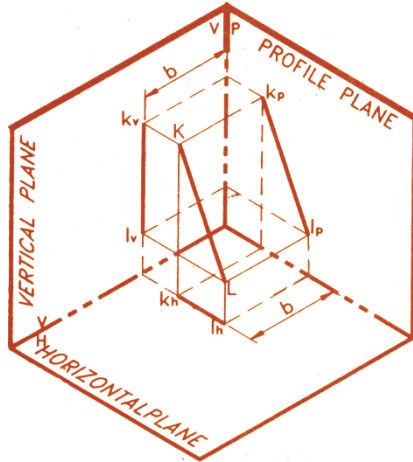


(a) Orthographic views

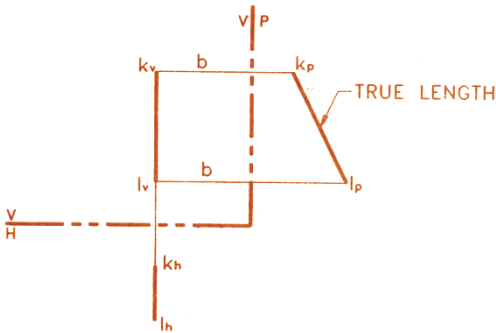
**Fig. 2.7 Projections of a horizontal line**

**(iii) Profile Line:** A line parallel to the profile plane of projection is known as a profile line. It appears in true length on the profile plane of projection. Fig.2.8 illustrates the principal

projection of a profile line KL, located at  $b$  distance from the profile plane.



(a) Pictorial representation

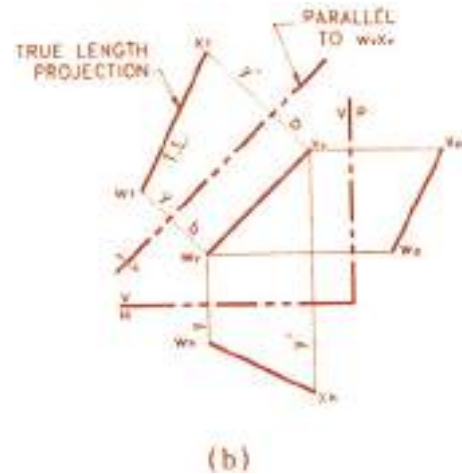
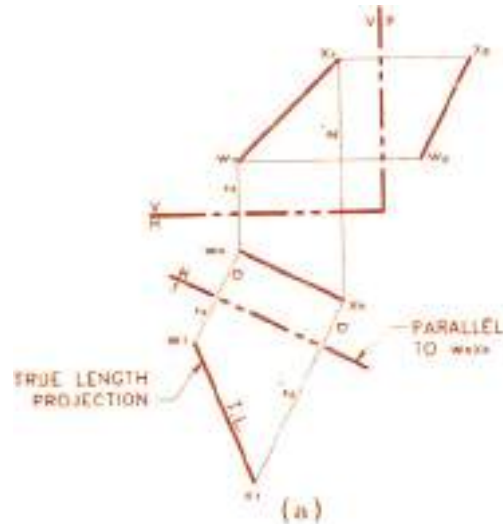


(b) Orthographic views

**Fig. 2.8 Projections of a profile line**

**(iv) Oblique Line:** A line inclined to all the three principal planes of projection is named as an oblique line. None of the three principal projections of this line appears in true length and non of the projections are parallel to anyone of the adjacent reference lines. Fig.2.9(a) shows the projection of an oblique line WX. To find the true length of this line, an auxiliary plane (1) parallel to the line and perpendicular to the, horizo-

ntal plane of projection is assumed. The position of this auxiliary plane on the horizontal plane of projection is shown by the reference line  $H/1$ , which is parallel to the top view  $w_h x_h$  of the line. Since both endpoints are at the same distance  $a$  from auxiliary plane (1), line WX is parallel to this plane in space and its projection onto the auxiliary plane is a true length projection.



**Fig. 2.9 True length projection of an Oblique line**



*In general, the following steps can be employed to determine the true length of an oblique.*

**Step 1:** Draw the vertical and horizontal projection of the oblique line.

**Step 2:** Parallel to the top view of the line and at any convenient distance from the top view, draw a reference line (example: line H/1), which is the auxiliary view of the horizontal plane of projection.

**Step 3:** Through end points of the horizontal projection, draw projectors perpendicular to the reference line.

**Step 4:** On the projectors constructed in step-3, set off the respective height locations of the end points to determine auxiliary projections of the end points. These distances can be obtained from vertical projection of the oblique line.

**Step 5:** Connect, by straight lines, auxiliary projections of the end points. This line represents the oblique line in true length.

Notice that it was not necessary to use an auxiliary plane perpendicular to the horizontal plane to find the true length of line WX in Fig.2.9. The auxiliary plane could also be either perpendicular to the vertical plane and parallel to the front view  $w_vx_v$  or perpendicular to the profile plane and parallel to the side view  $w_px_p$  of the line. Fig. 2.9(b) shows the use of an auxiliary plane (1) perpendicular to the vertical plane to find the

true length of the same line. Here, the locations of  $w_1$  and  $x_1$  on auxiliary plane 1 can be transferred from either the horizontal plane or the profile plane since both are adjacent perpendicular planes to the vertical plane.

### B. Bearing and Slope of a Line

1. Have you ever seen a traffic pole sign showing the degree of inclination on the road?
2. Can you define slope literally?
3. It is true that the sun rises in the east and sets in the north, but what is the direction flow of the sun? Is it towards the north or south that the sun travels to reach at the west?

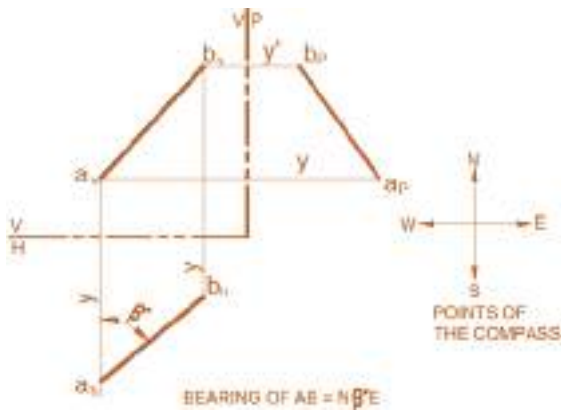
The *bearing* of a line is the angle the horizontal projection of a line makes with respect to the points of the compass. It is given in degrees ( $0$  to  $90^\circ$ ) measured from either north (N) or south (S) direction. The bearing reading indicates the quadrant in which the line is located on the horizontal projection. The north line is usually assumed to be vertical unless a different direction is specified. For line AB shown in Fig.2.10, the bearing is given to be  $N\beta^\circ E$ .

Notice that in bearing representation, the North or South direction should be indicated first, the angle between the N-S line and the horizontal projection of the line is then specified next and finally its direction from the reference endpoint toward east or west is mentioned.

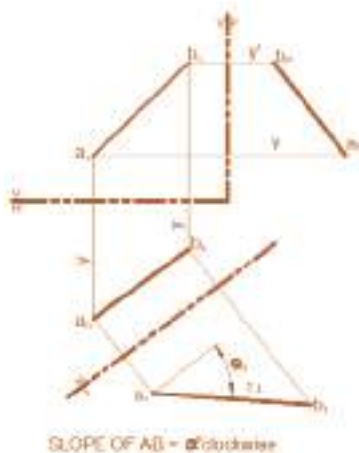
*Slope* of a line is the angle the line makes with the horizontal projection plane. It is

## 2 Auxiliary Views

seen in a view where the line appears in its true length and the horizontal plane at the same time appears as an edge view. Therefore, true slope of a line is measured from an elevation plane(1) that contains the true length projection of a line. It should be recalled that an elevation plane is any plane that is perpendicular to the horizontal projection plane. Slope of the oblique line AB in fig.2.11 is  $\alpha^\circ$  up from A or simply  $\alpha^\circ$  clockwise. This is because point A is more closer to the horizontal plane than point B.



**Fig. 2.10 Bearing of a line**

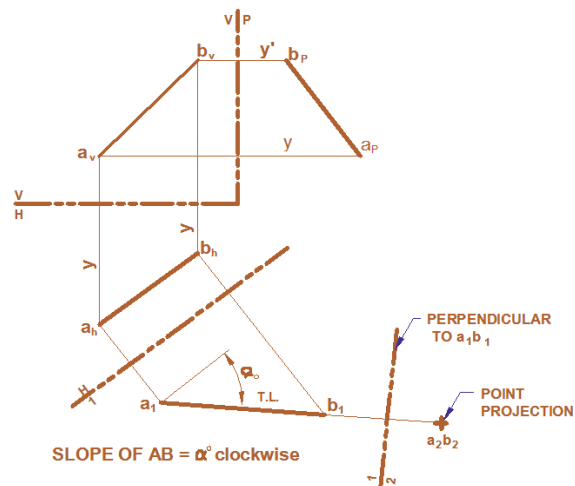


**Fig. 2.11 Slope of a line**

## C. Point Projection (End View) of a Line

1. Can you imagine a line appearing as a point?
2. Hold your pen or pencil and consider it as a line. Then try to coincide the starting and ending point of the line (pen or pencil) from your point of view. Try to see it as a point.

A line can be projected as a point on a projection plane that is perpendicular to the line. When the true length of a line appears on one of the principal planes of projection, only one auxiliary plane perpendicular to the true length of projection is needed to show the lines as a point. However, in the case of an oblique line a secondary auxiliary plane(2) which is perpendicular to the true length view is required. Therefore, a point view of a line always comes after a true length view. Fig. 2.12 shows the point projection of an oblique line AB.

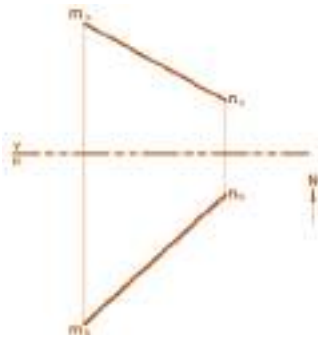


**Fig. 2.12 Point projection of a line**

**Checkpoint 2.2**

The vertical and horizontal projection of line MN in space are as shown in the Figure. Trace the given views onto your drawing paper and find:

- A. The bearing and true slope of line MN.
- B. True length projection of the line, and
- C. The point projection of the line.



**2.2.3. Projection of a plane**

- 1. List down the types of planes you know.
- 2. Can you define a plane in terms of line?

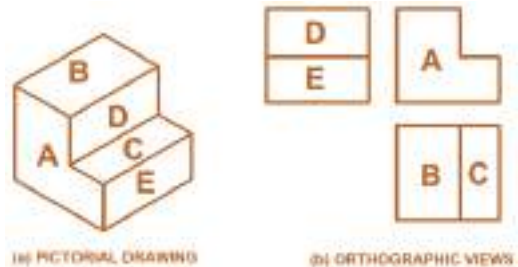
Theoretically, a plane is considered to be a flat surface with unlimited extent. However, for graphical purposes, planes are bounded with straight line segments. Basically, there are four ways by which planes can be formed or represented:

- i) By two intersecting lines in space,
- ii) By two parallel lines in space,
- iii) By any three non collinear points in space, and
- iv) By a line and a point not on the line.

**A. Types of plane surfaces:**

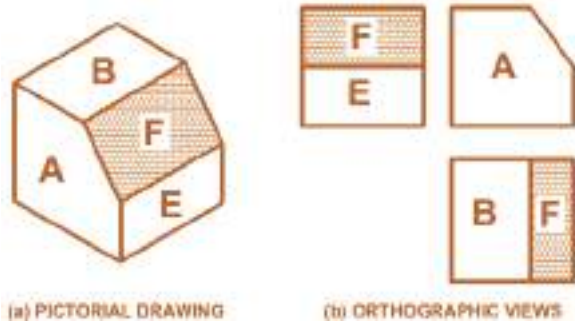
Plane surfaces may occur in any of the following three positions:

(i) **Principal Plane:** is a plane surface that is parallel to either of the principal planes of projection, and thus its projection on a plane to which it is parallel will be a normal view. A principal plane parallel to the vertical projection plane is referred as a *vertical plane*. Similarly, a principal plane parallel to the horizontal projection plane is a *horizontal plane* and a plane aligned with the profile projection plane is a *profile pane*. In Fig. 2.13, surface A is a vertical plane, B and C are horizontal planes and surfaces D and E are profile planes.



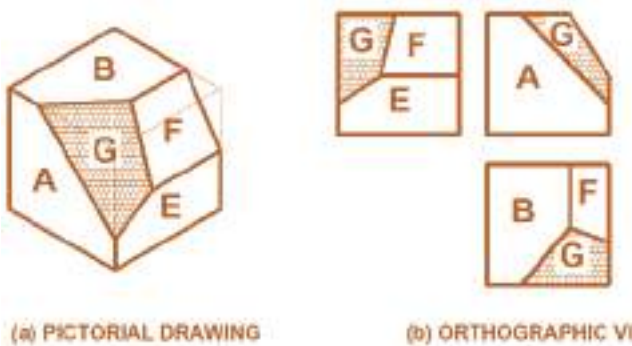
**Fig.2.13 Principle surface of an object**

(ii) **Inclined Plane:** It is a surface that is inclined to two of the principal planes but perpendicular to the third principal projection plane. For the object shown in Fig.2.14, the shaded surface F is an inclined plane while all other surfaces are principal planes.



**Fig. 2.14 Inclined surface of an object**

**(iii) Oblique or Skew Plane:** It is a plane surface that is inclined to all the three principal planes of projection. The shaded surface G in fig. 2.15 represents an oblique surface.



**Fig. 2.15 Oblique surface of an object**

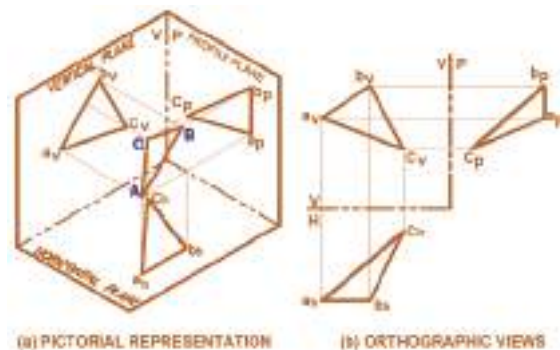
**Checkpoint 2.3**

The object shown in the Figure contains different types of plane surfaces. Identify the type for each labeled surface as vertical, horizontal, profile, inclined or oblique planes.



**B. Principal Projections of a Plane**

Views of a plane in space can be obtained by projecting the vertices of the plane on various projection planes. Fig. 2.16 shows the principal projections of an oblique plan ABC in space.

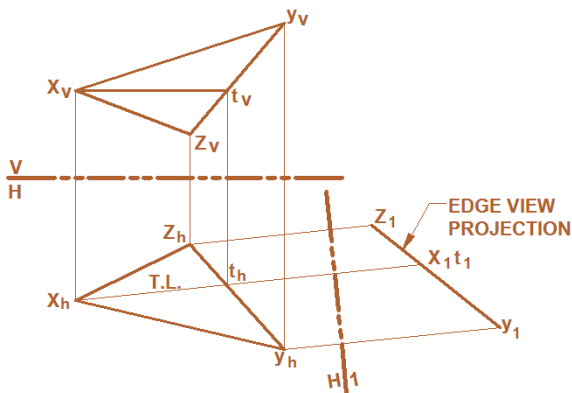


**Fig. 2.16 Principal projections of a plan**

### C. Edge View of a Plane

Can you imagine a plane appearing as an edge or a line?

Hold a paper or one of your set square and try to coincide the edges of the plane (paper or set square) on a single line from your point of view. Did you visualize it as an edge? Any plane in space can be projected at most as a true shape or at least as edge view. When a plane is vertical, its edge view will be seen from above on the top view. If it is a horizontal plane, it will appear as an edge on all elevation views including the vertical and profile planes. However, if the plane is inclined or oblique to the principal planes, it should be projected on an auxiliary plane that is perpendicular to any one line on the plane.



**Fig. 2.17 Edge view of an oblique plane**

To simplify the steps required to find the edge view, the arbitrary line that falls on the plane can deliberately be selected as a horizontal line. Thus, the projection of this line on the vertical plane (front view) is parallel to reference line V/H and its top view will be a true length projection. For the

oblique plane XYZ shown in Fig. 2.17, line XT is a horizontal line. The auxiliary elevation plane (1) perpendicular to  $x_h t_h$  is thus a projection plane perpendicular to plane XYZ and gives its edge view. In general, the steps to be followed to obtain the edge view of an oblique plane XYZ in space from two given principal views are as follows:

- Construct the projection of a horizontal line XT that falls on the given plane, the front view of this  $x_v t_v$  should be parallel to reference line V/H.
- Project line XT on the horizontal plane. Its top view  $x_h t_h$  is a true length projection.
- Setup an auxiliary plane (1) perpendicular to  $x_h t_h$
- Project points X, Y and Z onto auxiliary plane (1). The projection  $x_1 y_1 z_1$  will be a straight line, representing the edge view of plane XYZ.

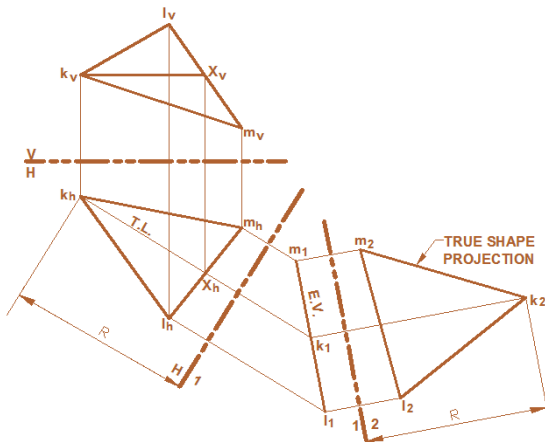
### D) Normal (True Shape) View of Plane

Normal view of a given plane in space is the view that gives the actual size and shape of the plane. To find the true size and shape projection of an oblique plane, it is necessary to setup an auxiliary plane parallel to the given plane. General procedures used to find the true shape projection of plane are the following: (Ref. Fig. 2.18)

## 2 Auxiliary Views

- (i) First, find the edge view of the given plane.
- (ii) Setup an auxiliary projection plane (2) parallel to the edge view of the given plane.
- (iii) Project the edge view of the plane onto the parallel projection plane (2). Since all edges of the plane are at equal distance from plane (2), every side of the plane will be projected in true length and in effect the plane is shown in its true size and shape.

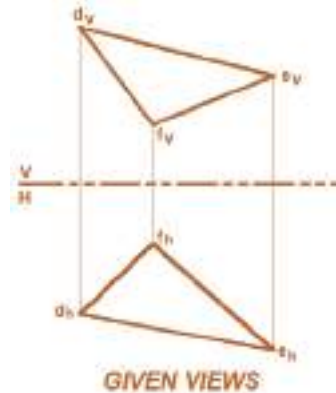
In Fig. 2.18, the vertical and horizontal projections of an oblique plane KLM are given. The true shape projection of the plane is then shown on auxiliary plane (2).



**Fig. 2.18 Normal view of an oblique plane**

### Checkpoint 2.4

Vertical and horizontal projections of planes DEF in space are shown in the figure below. Trace these views on to your drawing paper to full scale and find the true shape projection of the plane.



## 2.3 Auxiliary Projection of Objects

### 2.3.1 Auxiliary Plane

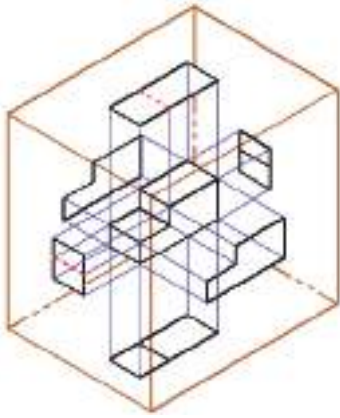
How do you think is possible to project the true shape of an inclined plane found on an object?

Relate the principal planes and auxiliary plane, specially their orientation with respect to the basic principal planes. Look at the Fig.2.19 that shows an object projected onto all six of the major orthographic planes. As you can see, every side of the object in the diagram is parallel to one of the six planes. Because of this, the shape that is projected



## 2 Auxiliary Views

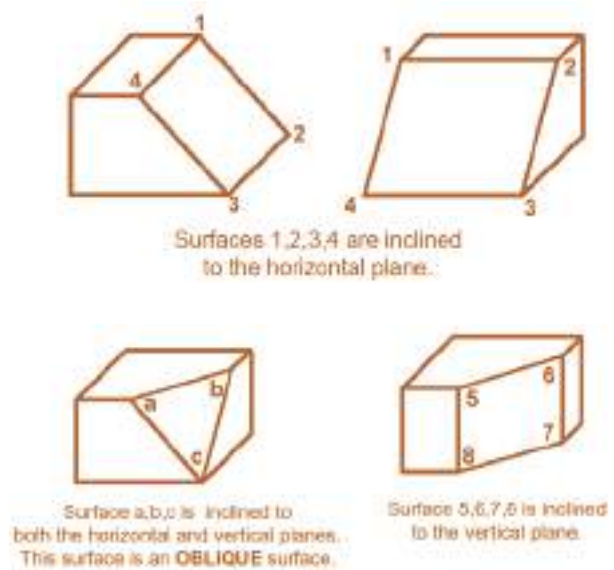
onto each plane is the same as the actual shape of the side of the object. For example, the L-shape projected onto the vertical plane (VP) mirrors exactly the shape of that side of the object. Whenever this is the case, we say that the orthographic drawing shows the *true shape* of the object.



**Fig. 2.19** The six principal projection of an object

Similarly, going back to the same diagram, you can see that the lengths of the lines projected to the orthographic planes are the same lengths that are found on the original object. When this is the case, we say that the orthographic drawing shows *true lengths*. Again, we get true lengths when the sides of the object are parallel to the orthographic planes.

However, there are many objects containing sides that are not parallel to the orthographic planes. Here are some examples as shown in Fig.2.20:



**Fig. 2.20** An Object With Inclined And Oblique Surface

When we draw orthographic projections of these and similar objects, we can end up with shapes and lengths that are not the true ones (typically they are shorter). In the remainder of this unit, we'll focus on the technique for getting around this problem. This technique involves drawing what are known as auxiliary views to get at true shapes and lengths onto auxiliary projection plane parallel to the inclined or oblique surfaces.

The method of projecting the image of an object to an auxiliary plane is identical to the method used for projecting an image to one of the principal planes; that is, the projectors are parallel and the observer is positioned at an infinite distance away from the object.

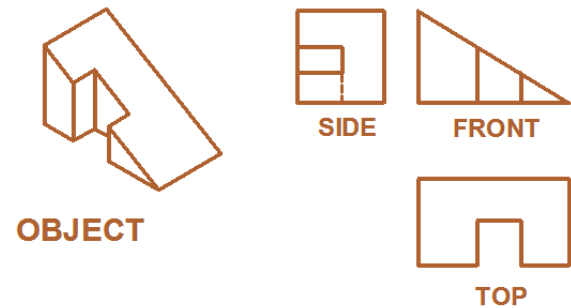
### 2.3.2 Construction of Auxiliary Views

As we have just learned, there are times when we cannot completely describe an object using the six major planes. This is especially true when the object or part of it is inclined or at an oblique angle to the major planes. In this case, we create a special orthographic view called an auxiliary view.

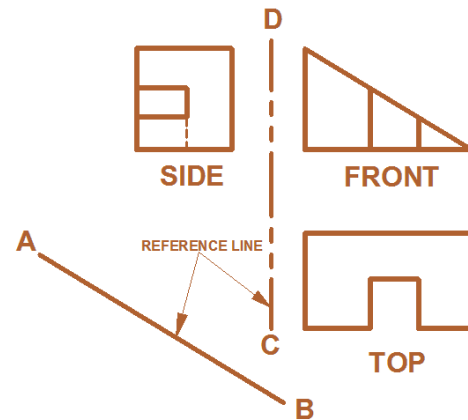
In this section, you'll learn how to create auxiliary views. Auxiliary views are very useful when you want to make certain details clearer or you want to show the true shape of surfaces which are not perpendicular or parallel to the major planes.

However, it is possible to add an auxiliary view to a drawing of even a simple object. Let's follow the steps mentioned in table below, just to learn how to draw auxiliary views.

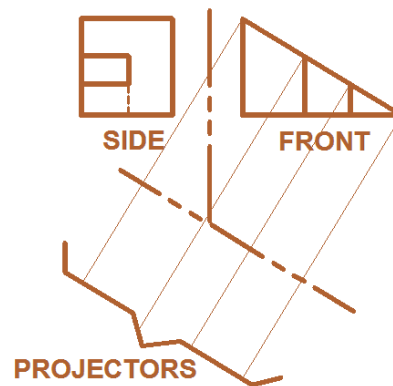
Step	Action
1	Draw two adjacent principal views, one of which must show the inclined surface as an edge.
2	Light draw a reference line (AB) parallel to the edge of the inclined plane.
3	Light draw a reference line (CD) between the two principal views. Use AB and CD to locate points in the auxiliary view.
4	Draw projectors from the inclined edge rotating reference line AB parallel with the inclined surface. These projectors are perpendicular to the inclined edge and the reference line as shown in Fig2.21.
5	Using a compass or dividers, transfer distances from reference line CD to the various points in the side view.
6	Darken all object outlines of the primary view and erase all projectors and reference lines. The completed primary auxiliary view shows the true shape of the inclined surface.



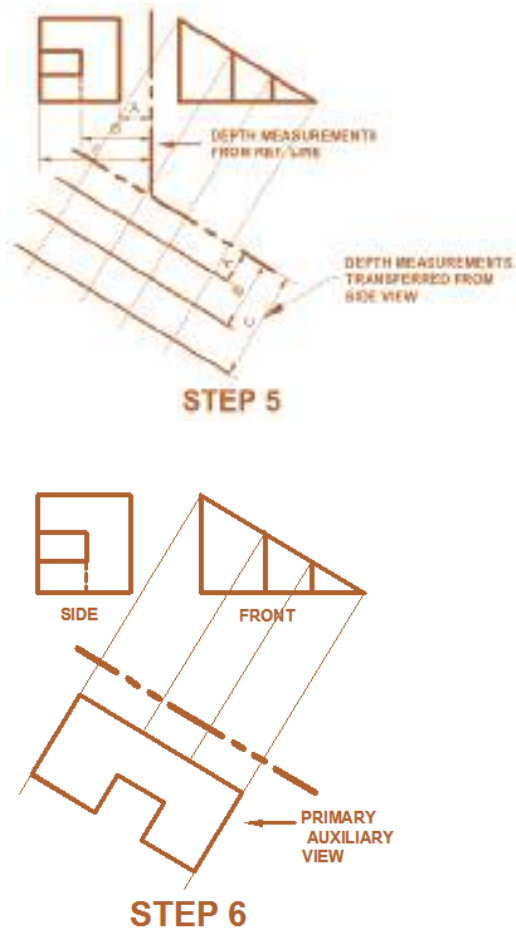
STEP 1



STEP 2 & 3



STEP 4



**Fig 2.21 Drawing an auxiliary view.**

**Activity 2.2**

1. How many auxiliary planes did you use to find the point view of a line or edge view of a plane?
2. Name them in your own convention of naming.

**2.4 Types of Auxiliary Views**

Auxiliary views are classified according to the position of planes in relation to the principal planes.

**2.4.1 Primary Auxiliary Views**

When an auxiliary plane is inclined to four of the six major planes of projection and is square with the other two, the view we obtain is called a primary auxiliary view. So far in this unit, all of the auxiliary views we've seen are primary auxiliary views.

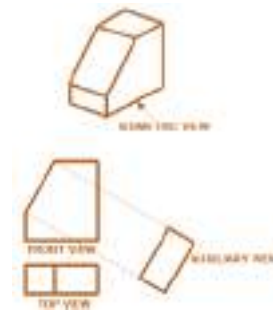
Naturally an auxiliary plane will be making angles with two principal planes which will be different from 90° but it will still make 90° with the third. The auxiliary view is named after the view on the third plane; so there are three types of primary auxiliary views:

- i. front,
- ii. top and
- iii. side auxiliary view.

The drawings below show examples of these three primary auxiliary views, given an object with an inclined face.

**i. Front Auxiliary**

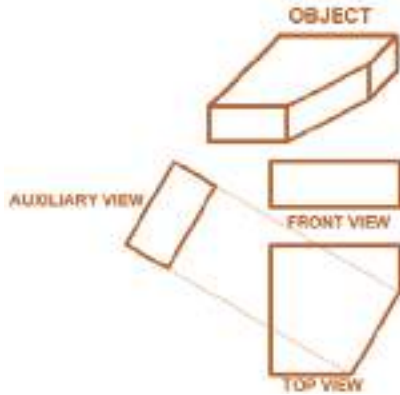
Fig 2.22 shows that when we start our projection from the front, we get an auxiliary elevation. We started our projection from the front because the front contains the edge view of the inclined face. An edge view shows true length.



**Fig. 2.22 Front Auxiliary View**

**ii. Top Auxiliary**

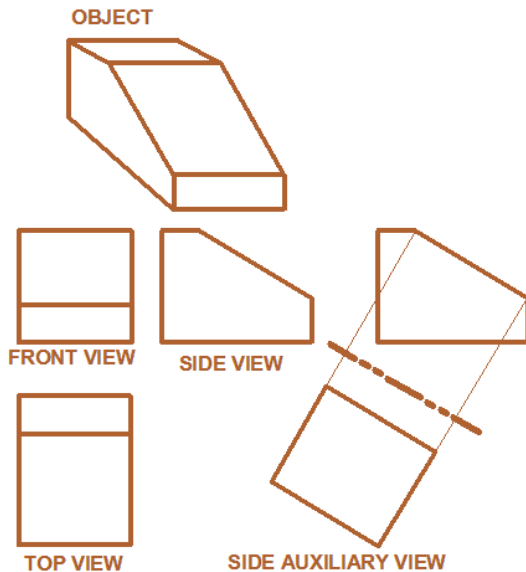
In fig. 2.23 the edge view of the inclined face is shown on the top view. So we start our projection from the top and get top auxiliary view.



**Fig. 2.23 Top Auxiliary View**

**iii. Side Auxiliary**

In the fig 2.24, the edge view of the inclined face is shown on the right side view. So we start our projections from this view.

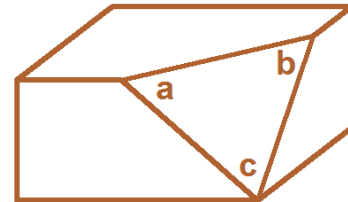


**Fig. 2.24 The Side Auxiliary View**

**2.4.2 Secondary Auxiliary View**

Sometimes an object has a face inclined to all six major orthographic planes. When this is so, we must first draw a primary auxiliary view to obtain an edge view of the inclined face, and then a secondary auxiliary view to show its true shape. In such a drawing, the primary auxiliary view, or edge view, also provides the surface's true angle of inclination to the horizontal or vertical plane. (That is, from an edge view you can measure these angles). Following are an example that utilise edge and secondary auxiliary views.

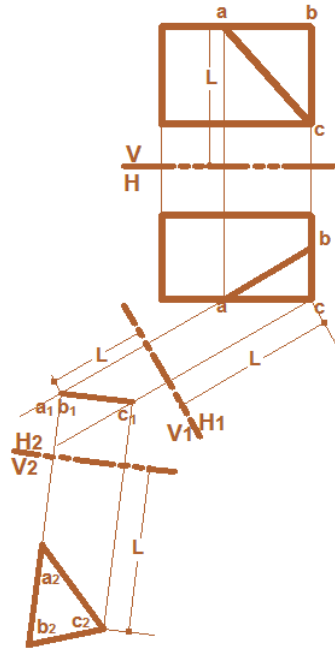
**Example:** Given the object below, draw an orthographic projection that shows the true shape of surface abc.



1. Draw the top and front view of the object
2. Begin drawing the edge view of the oblique surface: project construction lines from the top view and draw a V1/H1 reference line.
3. Complete the edge view: with a compass, transfer points a, b and c from the top view to the auxiliary view. The straight line that results is the edge view of surface abc.

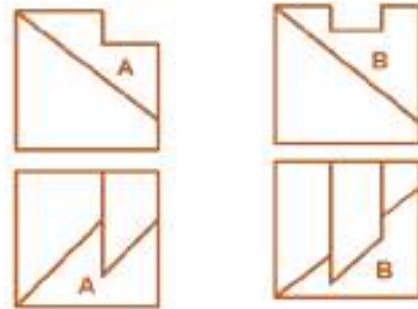
## 2 Auxiliary Views

4. Draw the secondary auxiliary view: project perpendicular construction lines from the edge view and draw a reference line  $V2/H2$  at a convenient position. Then transfer points from the plan to the new plan by taking measurements from the  $V1/H1$  line and marking the equivalent distance from the  $V2/H2$  line. The new plan is a partial secondary auxiliary view that shows the true shape of surface  $abc$ .



### Checkpoint 2.5

The leveled planes shown in the views given by the figure below represents oblique surfaces on the respective objects. Find the secondary auxiliary views of these surfaces



### 2.4.3 Other Features in Auxiliary Partial and Complete Auxiliary Views

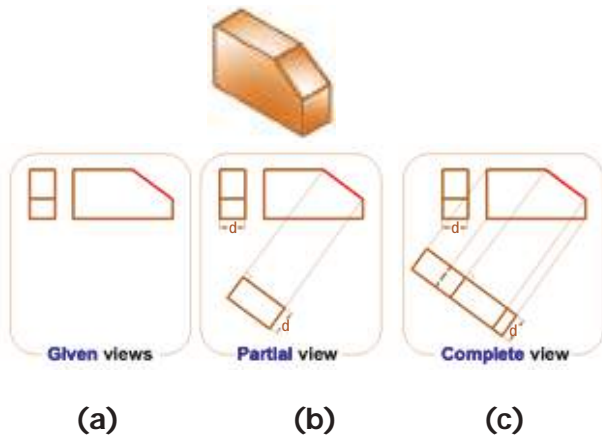
As mentioned previously, one of the major purposes of an auxiliary view is to show the true shape of a surface that is not parallel or perpendicular to the major planes. However, in some cases a complete auxiliary view is a distorted view of an object, making it of little value. In such cases, we use what is called a partial auxiliary view.

A partial auxiliary view is just what it sounds like: an auxiliary view of part of an object. For example, we often use a partial auxiliary view to show an irregular inclined face of a component. If we used a complete auxiliary view of such a component, the part of the view other than the inclined face would be

## 2 Auxiliary Views

distorted. In general, we use partial auxiliary views to show true shapes of inclined and oblique surfaces.

For example, in Fig.2.25 (a) is a drawing of an object showing two of the major orthographic planes.



**Fig. 2.25 Partial and complete view of an object**

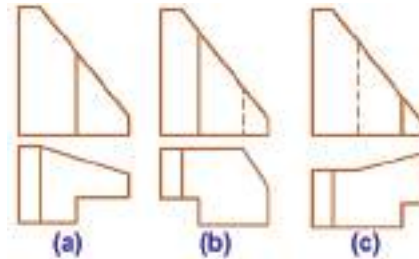
However, none of the two views shows the true shape of surface ABCD. (This is true of the other three orthographic views as well). The problem is that surface ABCD is inclined to a major orthographic plane.

Instead, to see the true shape of surface ABCD, we must draw an auxiliary view. We'll draw this view by positioning ourselves in such a way that we look at the surface directly from its front (this is our line of site). This auxiliary view is shown Fig.2.25 (b).

Notice that the above auxiliary view only shows the surface ABCD and not the whole view. This makes it a partial auxiliary view. If we drew the whole object, the rest would be distorted as shown in Fig.2.25 (c).

### Checkpoint 2.6

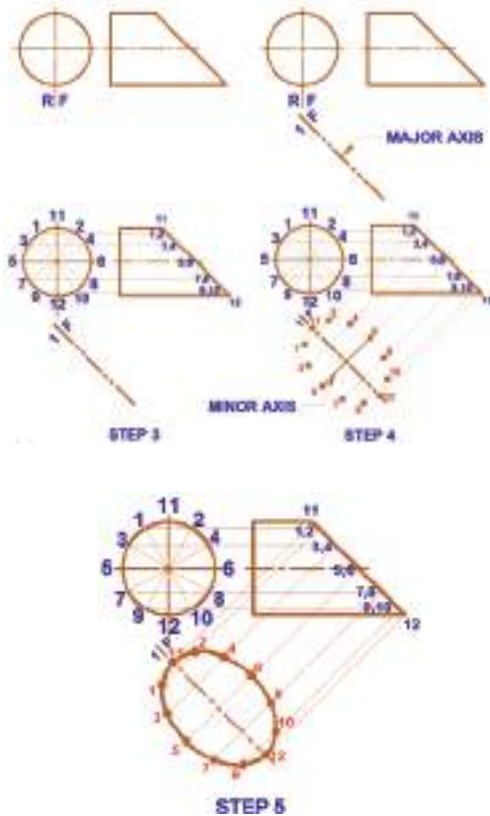
For the objects shown in figure below, make the partial and complete auxiliary view of the inclined surface.



### Circular Features in Auxiliary Views

Circular features in auxiliary projection appear elliptical, not circular. The most commonly used method to draw the true shape of the curved surface is the plotting of a series of points on the line. The more points are plotted on the line, the accuracy of the curve or circular feature is better. The easiest way to explain this method of auxiliary projection is the projection of a truncated cylinder. This shape seen in the auxiliary projection is an ellipse, as shown in Fig.2.26.





**Fig. 2. 26 Projection of circular features in auxiliary view**

The approach to projection of a circular shape is explained below.

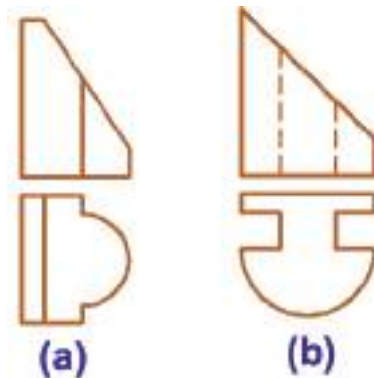
1. Draw the front and side view of the truncated cylinder.
2. Center line (F/1) of the auxiliary view is drawn parallel to the edge line.
3. The parameter of the circle in the side view needs to be divided into equal slices or equally spaced points. Our example is divided in 12 equally spaced points, 30° apart. The circumference of the circle (360°) is divided in 12 equal spaces,

$360^\circ/12=30^\circ$ . These points are then projected to the edge line on the front view.

4. Then these points are projected at right angles toward and past the center line of the auxiliary view. And the widths between the center line and individual points taken from the side view are transferred to the auxiliary view.
5. When all the widths have been transferred from the front view to the auxiliary view, the resulting points of intersection are connected to give the preferred elliptical shape.

**Checkpoint 2.7**

The object represented in figure below, have circular features on their inclined surfaces. Find the partial auxiliary views of the objects on projection plane parallel to the inclined surface.

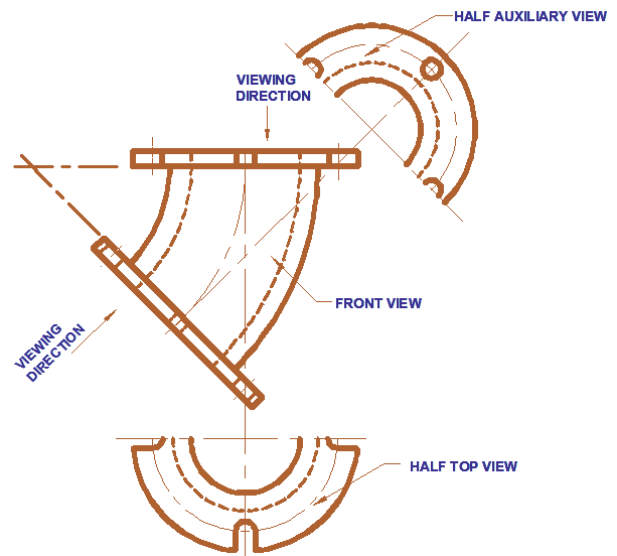


### Half Auxiliary View

Complete view representations of symmetrical objects are not usually recommended in practical drawings. That, if a principal or auxiliary view of an object is symmetrical about a given line, only a half view representation may be drawn to save both space requirement and essential drafting time. In Fig. 2.27, half view representations of the top and partial auxiliary views of a bended pipe flange are used to accurately describe its shape and size.

### Key terms

- **Principal planes:** surfaces those are horizontal and vertical.
- **Reference line:** a line from which angular or linear measurements are reckoned. Also known as datum line.
- **True length:** The actual length of any given line or surface. Sometimes the true shapes of surfaces on a 3D object are not obvious on a 2D drawing.



**Fig. 2.27** Half view representation of a symmetrical object

## UNIT SUMMARY

When a surface of an object is not parallel to one of the three principal views, an auxiliary view may be used to obtain the true size of the surface. An auxiliary view is usually only a partial view showing the desired features.

An auxiliary view should be positioned close to the principal view so that both views can be read together. A centre line represents the axis of symmetry. Projectors are usually drawn at 90 degrees to the inclined surface. Measurements from one view are projected across to the auxiliary view. Auxiliary views may be projected from any of the three principle views.

A primary auxiliary view is projected onto a plane that is perpendicular to one of the principal planes of projection and is inclined to the other two. A secondary auxiliary view is projected from a primary auxiliary view into a plane that is inclined to all three principal projection planes.

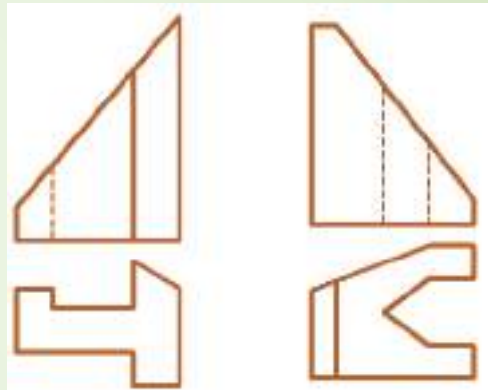
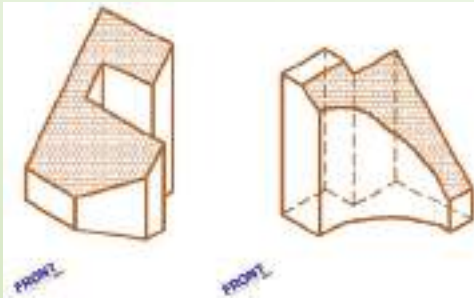
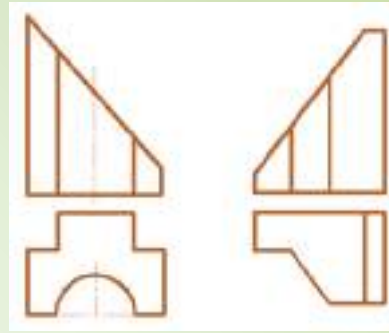
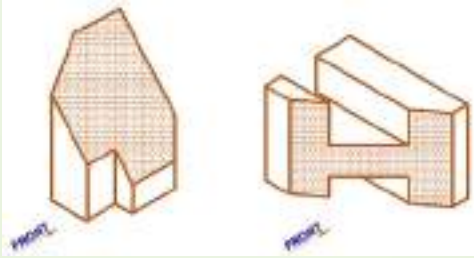
Generally, auxiliary views are used to show the true shape or true angle of features that appear distorted in the regular views. Basically, auxiliary views have the following four uses:

- True length of line
- Point view of line
- Edge view of plane
- True size of plane

To draw an auxiliary view of a curved surface a number of random points on the curve in one of the principle views must be taken. These data points can then be projected into the auxiliary view. Sometimes it is required to draw an auxiliary view first from one principal view before being able to obtain another complete principle view. Auxiliary views are also used to find the lines of intersection of surfaces.

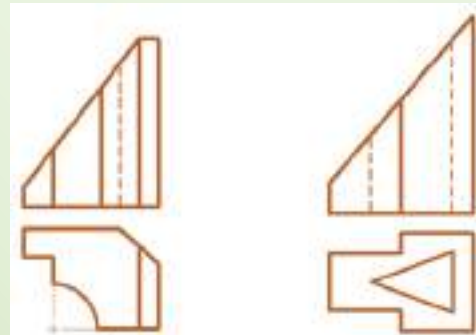
# Exercise

## EXERCISE I. Draw the principal and partial auxiliary views



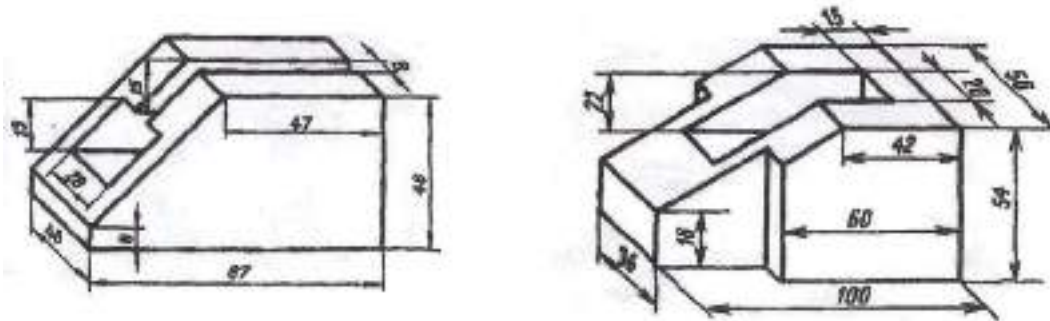
## EXERCISE II: Draw partial auxiliary

## EXERCISE III: Draw complete auxiliary

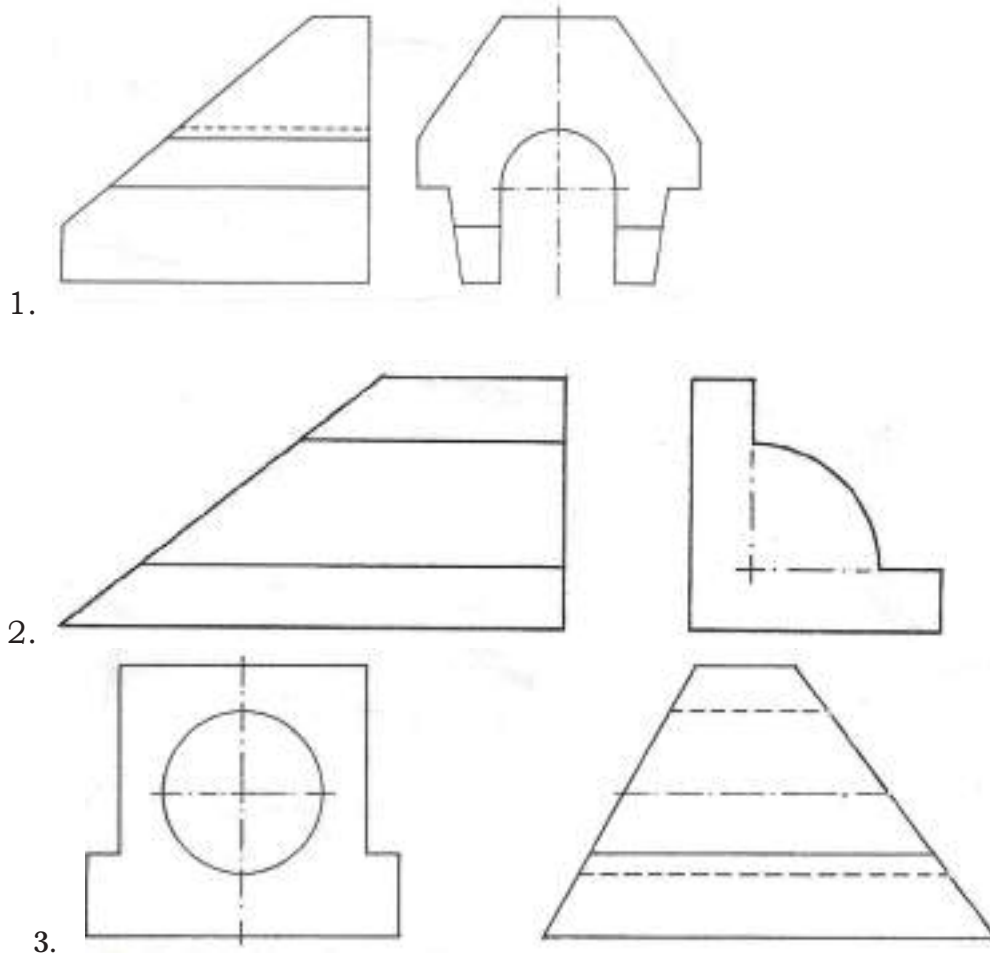


Project:

*I. Draw the principal views and the partial auxiliary view of the inclined surface of the given objects.*



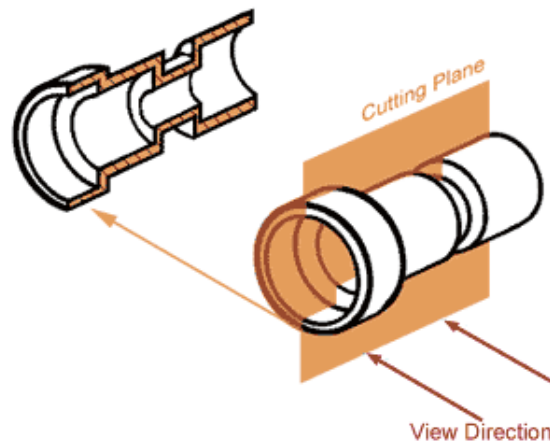
*II. Draw partial and complete primary auxiliary views of the object shown below. Transfer the dimension from the given views.*



UNIT

3

## SECTIONAL VIEW



### Learning Competencies:

*Up on completion of this chapter you should be able to:*

- Define the concept and the use of sectional views;
- Describe and select the location of cutting plane to create sectional view;
- Identify and make different types of section lining;
- Visualize the sectional view of an object;
- Identify the types of sectional views;
- Compare and contrast the advantage of all types of sectional views;
- Select the appropriate type of section to the given object;
- Perform the sectional view of an object with preferable type of section.



### 3.1 Introduction

- Have you ever cut an orange with a knife? Did you observe the internal part of it? What are the reasons we need to see the interior part of an object?

The basic method of representing parts for designs by views, or projections, has been explained in grade 11 (chapter 6) . However, we are frequently confronted with the necessity of showing more or less complicated interiors of parts that cannot be shown clearly by means of hidden lines. We accomplish this by slicing through the part as one would cut through an apple or a melon. In such cases, imaginary cutting planes are made to pass through objects exposing their interior features. The revealed view of the object is then drawn with the conventions of orthographic projection and it is called **sectional view**.

When a cutting plane reveals the object lengthwise, the section obtained is known as longitudinal section; and when it is done crosswise it is called cross-section. The surfaces of the object which the imaginary cutting plane touches will be represented by hatches. The hatches may vary according to the material made of.

The figure below shows how a sectional view is made and the difference between the orthographic and the sectional view.

If you observe in Fig.3.2 c it is hard to visualize the interior details of the object due to the hidden lines. Whereas on the other hand which is the sectional view (Fig.3.2 a) provides a visual clarity to the object.

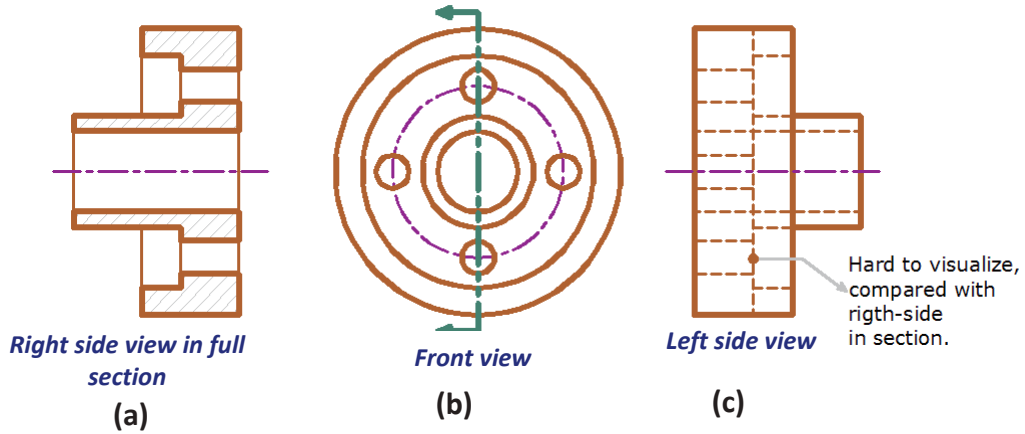


(Before revealing)



(After revealing)

**Fig. 3.1 Section in a 3d view**

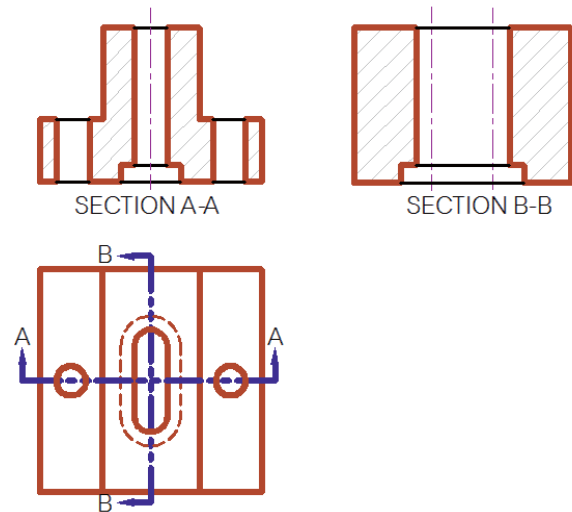
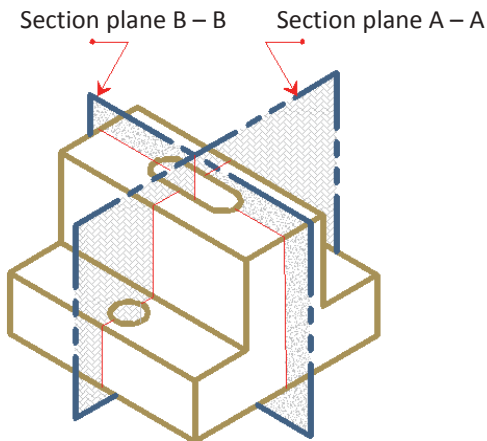


**Fig .3.2 Sectional view and its relation with orthographic projection**

### 3.2 Cutting Plane and Section Lining

#### Activity 3.1

1. Can you imagine a cube having a hole in the center? Sketch it.
2. Imagine the cube cut at the middle like that of an orange. Try to sketch the revealed cube by ignoring one of its part.



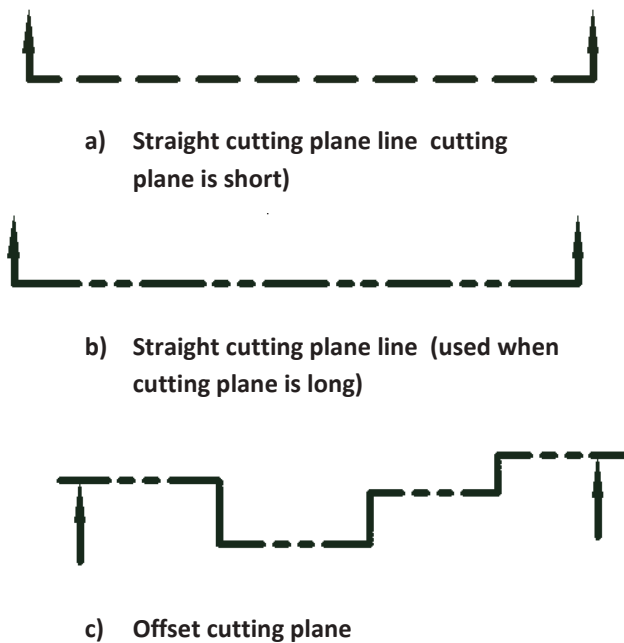
**Fig. 3.3 Cutting planes and sections**

**Cutting Plane:** The cutting plane is indicated in a view adjacent to the sectional view, Fig 3.3. In this view, the cutting plane appears edgewise or as a line, called the cutting plane line. A cutting plane line is represented either by a line pattern composed of alternate long dashes and a pair of short dashes or equal short dashes. And such lines should be made with a well sharpened medium thick pencil like an H or

### 3 Sectional View

a 2H. Cutting plane lines are drawn having a heavy weight with arrow heads which indicates the viewing direction. At the end of the arrows upper case letters may be attached in order to give reference to the section made. This is especially necessary when we use more than one cutting planes.


Fig. 3.4 shows symbolic line types that can be used to represent a cutting plane line.



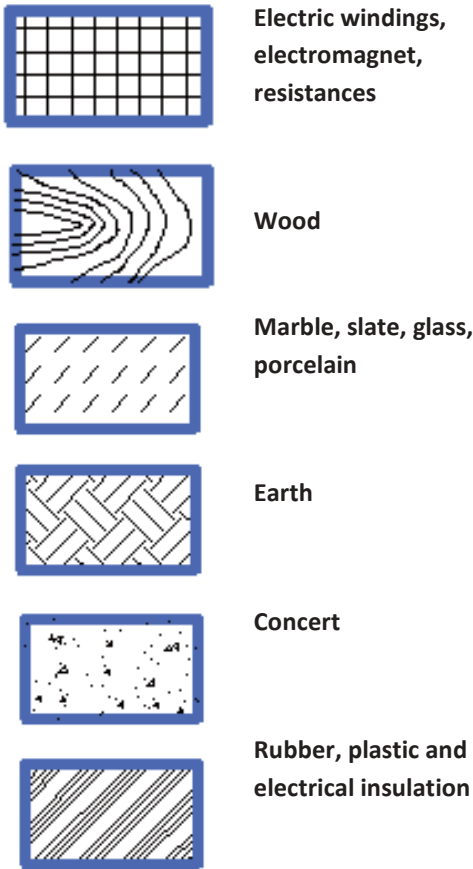
**Fig. 3.4 Cutting plane lines**

**Section Lining:** section lines are light thin lines, usually drawn as a 45 degree inclined line in case of general purpose. These lines are represented on the surface of the object which the cutting plane have direct contact. The crosshatched surfaces of the object were represented as a hidden line but now as a

visible surface. Symbolic section lining may be used in assembly drawings in cases where it is desirable to distinguish the different materials used. Section lining symbols for representation of some commonly used engineering materials are shown in the figure below.

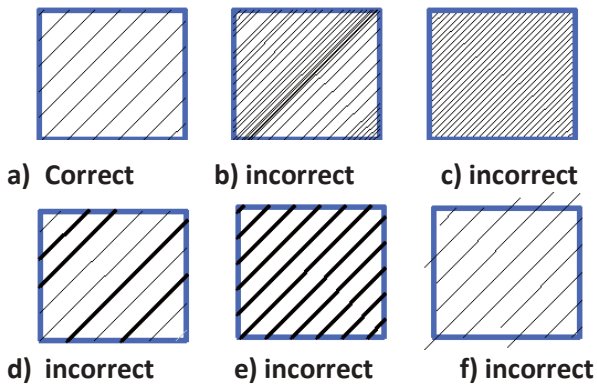


### 3 Sectional View



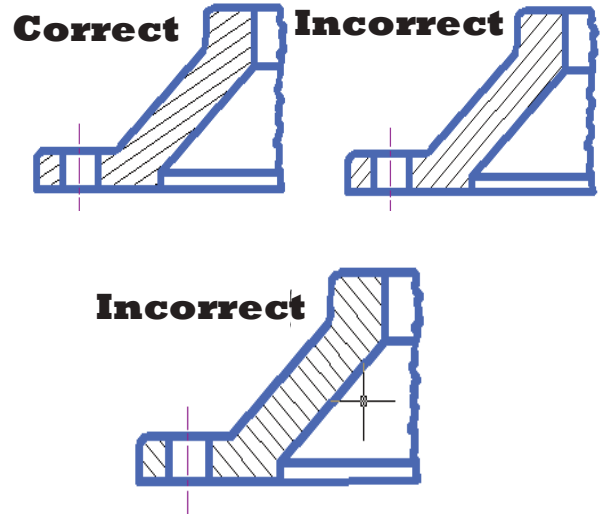
**Fig. 3.5 Symbols of materials in section**

The correct and incorrect practices of section linings are represented in the figure below.



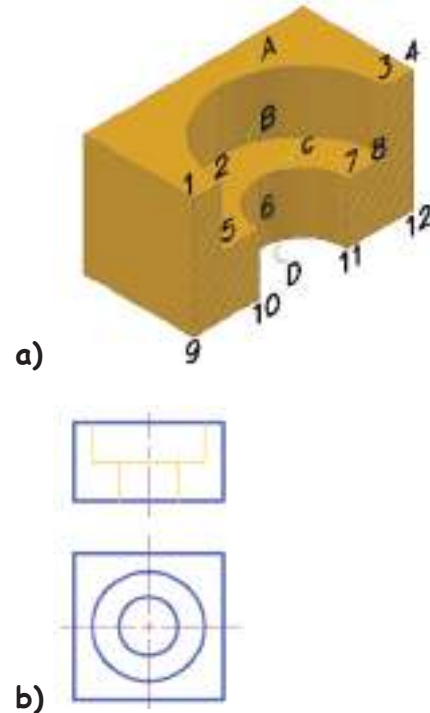
**Fig. 3.6 Correct and incorrect practices of section linings**

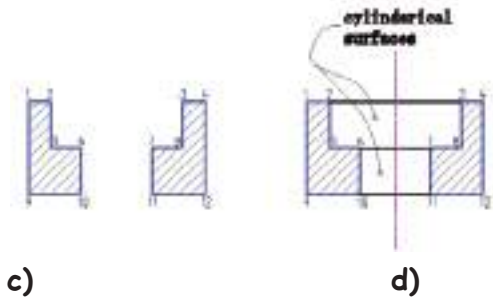
The direction of section lines are illustrated in the figure below.



**Fig. 3.7 Direction of section lines**

### 3.3 Visualizing a Sectional View





**Fig 3.8 Visualizing a sectional view**

Two views of an object to be sectioned, having a drilled and counter bored hole, are shown in Fig.3.8. The cutting plane is assumed along the horizontal center line in the top view, and the front half of the object (lower half of the top view) is imagined removed. A pictorial drawing of the remaining back half is shown at (a). The two cut surfaces produced by the cutting plane are 1-2-5-6-10-9 and 3-4-12-11-7-8. However, the corresponding section at (C) is incomplete because certain visible lines are missing.

If the section is viewed in the direction of sight, as shown at (b), arcs A,B,C, and D will be visible. As shown at (d), these arcs will appear as straight lines 2-3, 6-7, 5-8, and 10-11. These lines may also be accounted for in other ways. The top and bottom surfaces of the object appear in the section as lines 1-4 and 9-12. The bottom surface of the counter bore appears in the section as line 5-8. Also, the semi cylindrical surfaces for the back half of the counter bore and of the drilled hole will appear as rectangles in the section at 2-3-8-5 and 6-7-11-10.

### 3.4 Types of Sectional View

Depending on the way and the required details to be shown, sectional views can be classified as follows.

- (a) Full sections
- (b) Half sections
- (c) Offset sections
- (d) Broken-out or partial sections
- (e) Revolved sections, and
- (f) Removed section

#### 3.4.1 Full Sections

The sectional view obtained by passing the cutting plane fully through the object is called a *full section*. The cutting plane appears as a straight line and will never bend. This type of sectional view is mostly used when the expected details to be shown appear:

1. non-symmetrically
2. aligned with a certain axis
3. centrally without other details

In general, the following points should be noted when making full sectional view of an object:

- In making the sectioned view, one half of the object is imagined to be removed
- Invisible lines behind the revealed surfaces are usually omitted
- Visible lines behind the section should be drawn.
- Only the surfaces actually cut by the section plane are crosshatched.

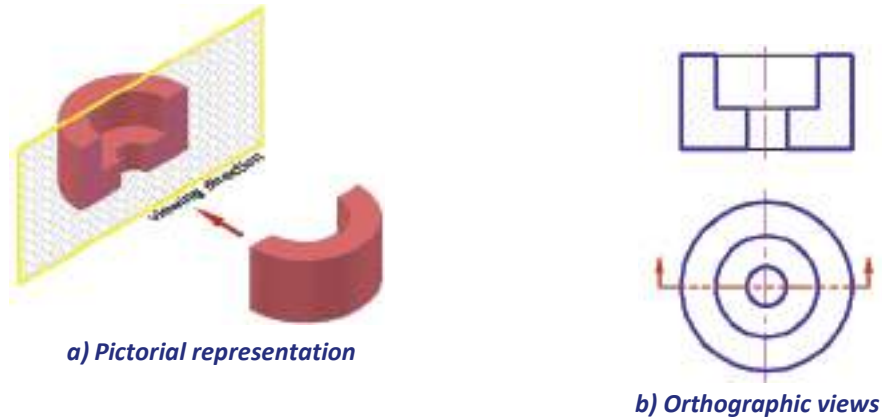
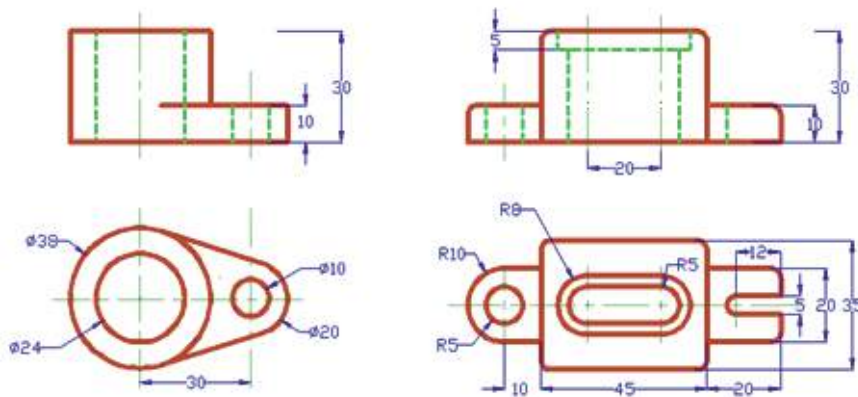


Fig .3.9 Full section

**Checkpoint 3.1**

The front and top views of the objects are given, redraw them with the same scale and show the front views in full section.



**3.4.2 Half Sections**

Imagine when one fourth of an orange is revealed and sketch its appearance and show to neighbor friend.

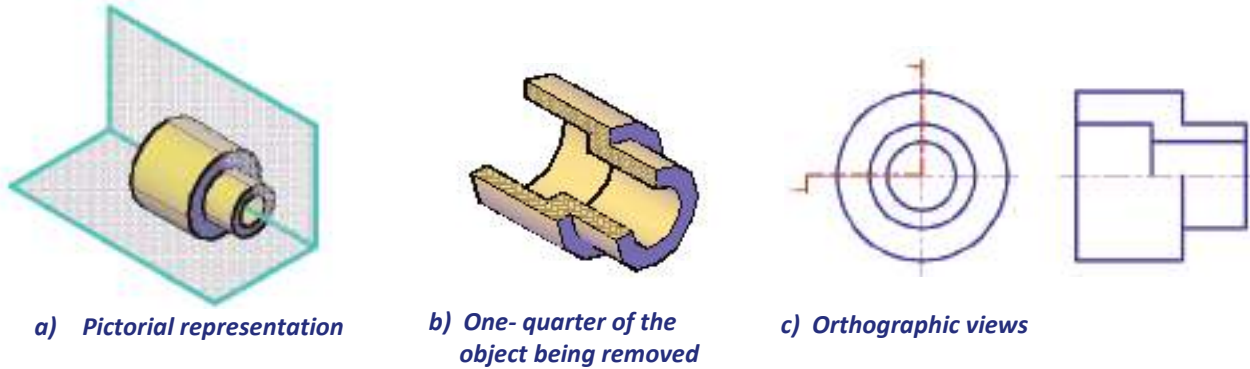
If the cutting plane passes halfway through the object, the result is a *half section*. A half section has the advantage of exposing the interior of one half of the object and retaining the exterior of the other half. Its

usefulness is, therefore, largely limited to symmetrical objects. It is not widely used in detail drawings (single parts) because of this limitation of symmetry and also because of difficulties in dimensioning internal shapes that are shown in part in the sectioned half. In general, the following rules should be noted in making a half-sectioned object:



### 3 Sectional View

- One half of the sectioned view should be in section, while the other half remains as an external view.
- Hidden lines will normally be omitted from both sides of the view unless necessary for clearness of interpretation of surfaces.
- Hidden lines may be shown on the unsectioned half, if required for dimensioning purpose.
- The line separating the sectioned half from the external half should be a center line.

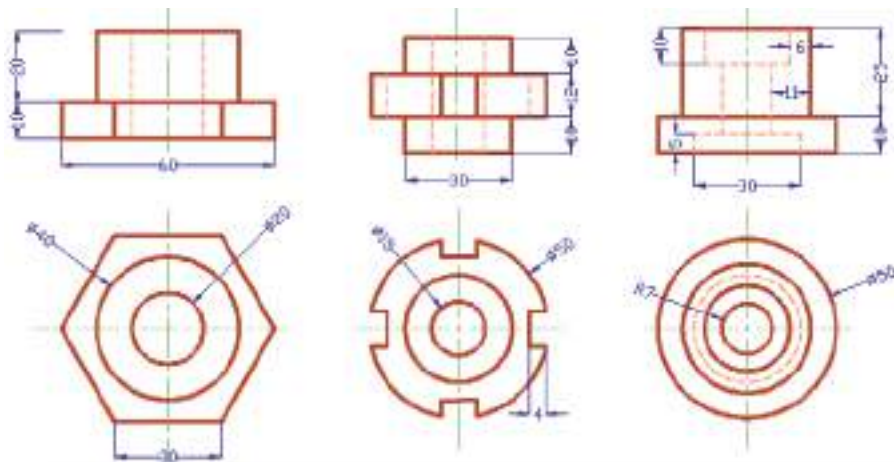


**Fig. 3.10 Half section**

#### Checkpoint 3.2

Front and Top Views of three different objects are given

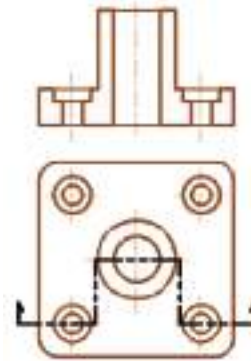
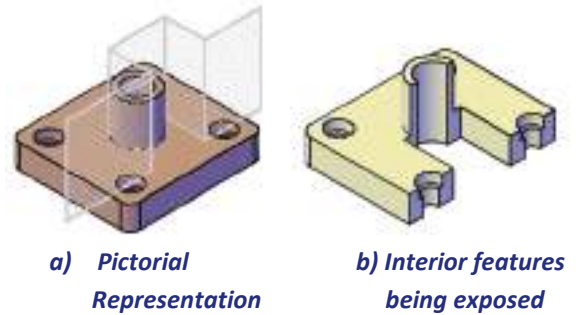
- Redraw them to full scale
- Project the half section on the front view



### 3.4.3 Offset Sections

1. Try to imagine a cube revealed in a path bending more than two parts.
2. Sketch the appearance and show to your teacher.

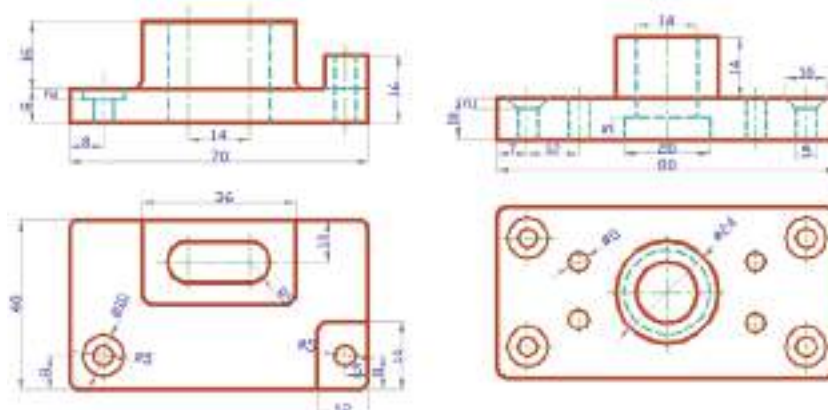
In sectioning through irregular objects, it is often desirable to show several features that do not lie in a straight line, by “*offsetting*” or “*bending*” the cutting plane. Such section is called an *offset section*. The cutting plane bends orthogonally or uses 90° to bend. The sectional view is drawn as if the interior details are kept aligned in a straight line position. This means we do not show the edges made by the bending of the cutting plane. The figure below illustrates the above mentioned concepts.



**Fig. 3.11 Offset section**

#### Checkpoint 3.3

Redraw the given front and top views on your drawing paper to full scale and choose an appropriate offset cutting plane line on the top view in order to reveal all important interior details in section on the front views.



### 3 Sectional View

In general, the following points should be carefully observed in offset sections:

- The location of the cutting plane must be shown by the proper symbolic line in the adjacent view.
- Arrows should be placed at the ends of the cutting plane line showing the direction in which the view is made.
- The edges made by the bends of the cutting plane are ignored.

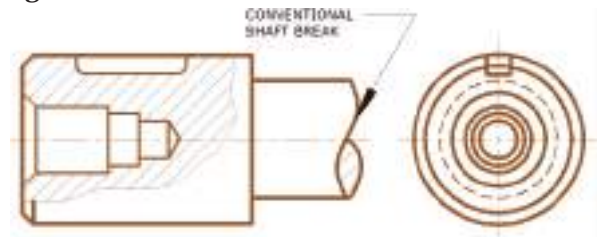
#### 3.4.4 Broken-out (Partial) Sections

##### Activity 3.2

1. What do you understand from the word broken-out?
2. How do you expect it to be applied in sectional view?

When it is necessary to show only a partial section of a view to expose interior details limited by a break line, is known as *broken-out section*.

Such sections may be used to show only a portion of the interior of an object without losing important exterior features. The object is assumed to be cut by an irregular cutting plane around the portion of the object to be displayed and the front part is removed by breaking it away. The breaking away is represented by an irregular freehand line known as short break line as shown in the figure below.

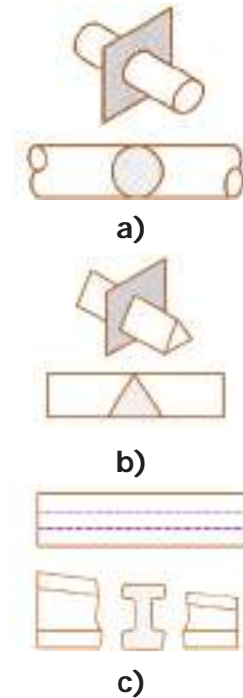


**Fig. 3.12 Broken out section**

#### 3.4.5 Revolved Sections

1. What is the literal meaning of revolve?
2. How do you expect a revolved section to appear?

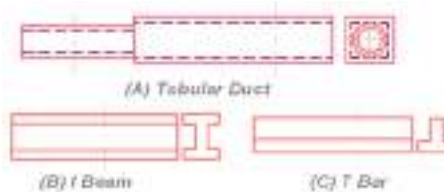
The shape of a bar, arm, spoke, or other elongated symmetrical features may be shown in the longitudinal view by means of a *revolved section* (Fig.3.13). The cutting plane in a revolved section is passed perpendicular to the axis of the elongated symmetrical feature and then revolved 90° into the plane of the drawing. It is sometimes important to provide an open space for the section by making a break in the normal view of the object as shown in (Fig 3.13 a). (Fig. 3.13 b) and (Fig. 3.13 c) illustrates some examples of revolved sections.



**Fig 3.13 Revolved sections showing (a) Solid cylinder, (b) solid triangular prism, and (c) conventional break to show section**

**Checkpoint 3.4**

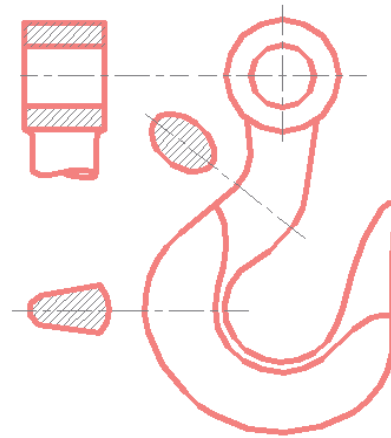
Front and side views of different elongated objects are as shown in the figure below. Trace the views on your drawing paper to full scale and show the cross-section of each object at the indicated positions of the cutting plane lines using appropriate revolved section.

**3.4.6 Removed Section**

Can you relate removing and sectioning with an example?

Removed sections are similar to revolved sections but are not drawn within the view containing the cutting plane. It is drawn outside the normal view representation. Usually, it is represented by extending the cutting plane line adjacent to the cutting plane. In this case, a center line drawn across the object is used as an axis of rotation to denote where the section is taken. The corresponding removed section is then projected along the axis extending from the desired cut position. In here, it is unnecessary to show a cutting plane or to label the sectioned view.

Fig.3.14 shows removed cross-section of a lifting hook.

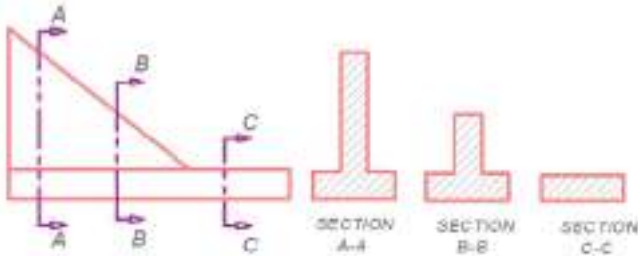


**Fig. 3.14 Removed sections of a hook**

Generally, removed or detail sections are more useful than revolved sections because of two basic reasons:

- To prevent a principal view of an object of varying cross-section from being cluttered with numerous revolved sections, and
- To enable a removed cross-section to be drawn with an enlarged scale so that additional details can be emphasized and allow adequate space for dimensioning.

In practical drawings, a number of detail sections may be drawn outside the regular view of a complex object. In this case, there should be some means of identifying the position of the cross-section represented. This is usually accomplished by showing the cutting plane on the principal view and labeling both the plane and the resulting view as shown in fig 3.15.



**Fig. 3.15 Removed cross section of a shaft**

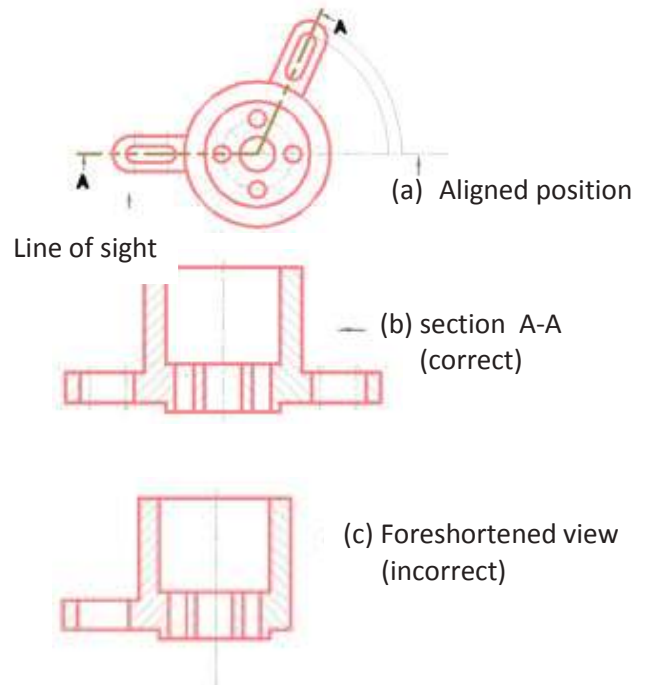
### 3.5 Other Sectional View Representation

As sectional view is very essential to full describe a design, other sectional view representation also has a part to solve a problem.

#### 3.5.1 Aligned Section

In order to include in a section certain angled elements, the cutting plane may be bent so as to pass through those features. The plane and feature are then imagined to be revolved into the original plane. Fig. 3,16 (b) and (c), shows how the section view appears when the cutting plane and features of the object are rotated into a plane perpendicular to the line of sight.

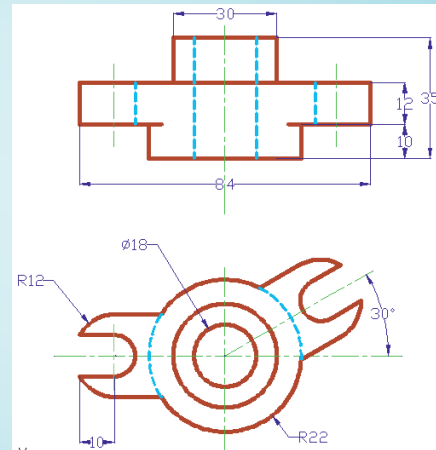
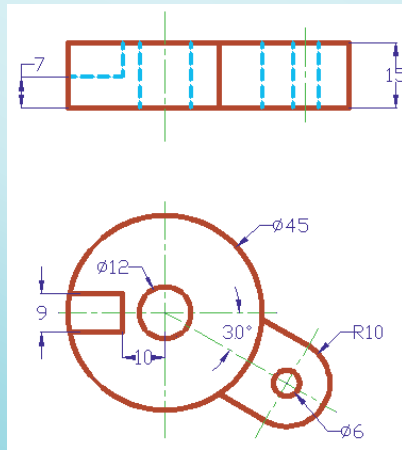
The angle of revolution or angle through which the cutting plane is bent is always less than 90°. To avoid misunderstanding, an aligned section view should never appear foreshortened as in Fig.3.16(a). The location of the cutting plane in aligned section should be shown on the adjacent normal view of the object (Fig. 3.16 (c)).



**Fig. 3.16 Aligned Section**

## Checkpoint 3.5

Front and top views of two objects are as shown in the figure. Redraw the views on your drawing paper to full scale and make an appropriate aligned section of the front views.



## Key terms

- **Cross hatching:** is a series of thin lines drawn 45° to horizontal. It is used to show the features cut by the cutting plane. Cross hatching makes features stand out on the drawing.
- **Cutting plane:** is the surface that is created when a cut is made through a component to reveal the internal features. It can also be called a section plane.
- **Off-cut:** is the term used to describe the unused portion of material from which an object has been cut.
- **Part section:** a method of showing internal detail for one small section of a drawing only.

## 3.5.2 Auxiliary Section

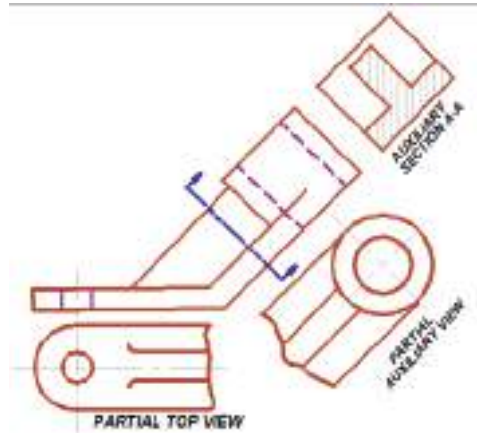
1. How do you think auxiliary and section relate?
2. Form a group and discuss with your friends then present it to the class by representing a group leader.

A sectional view that appears on a plane inclined to any of the principal projection planes is called an *auxiliary section*. The auxiliary section is projected into a position on the drawing so that the line of sight for the view is perpendicular to the cutting plane line. It is used to show the shape of a surface cut by a cutting plane or cross-sectional shape of an arm or a rib inclined to the regular planes. An auxiliary view in section is drawn by the usual methods of auxiliary projections discussed in chapter two. When a



### 3 Sectional View

cutting plane cuts an object, as shown in Fig. 3.17, arrows at the ends of the cutting plane line indicates the direction in which the cut surface is viewed.



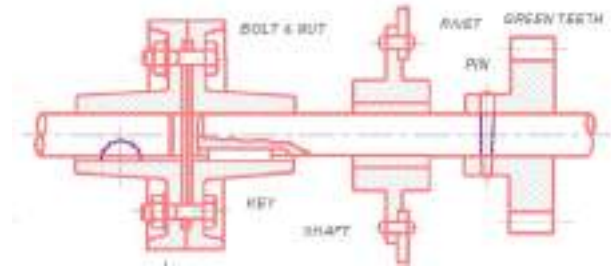
**Fig. 3.17 Auxiliary section**

## 3.6 Conventional Representations in Sectioning

Have you ever seen a machine drawing?  
Have you seen a machine assembled and functioning?  
List the type of machines you ever saw. Imagine the sectional view as it is assembled.

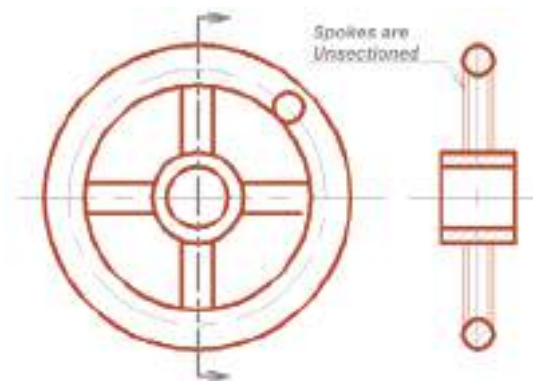
Sometimes, the level of confusion in some sectional view representation can be reduced by violating certain rules of orthographic projection. For example, nothing could be gained by showing the solid interior of some parts like shaft, bars, bolts, nuts and screws. It is therefore a customary practice to assume that such parts are not cut by a cutting plane that may pass through the parts. In this practice, not only the considerable time and effort required to

crosshatch these areas is saved but also the representation of an object or assembly will be more clear and easy to understand. Fig.3.18 illustrates conventional representation of these parts in section.

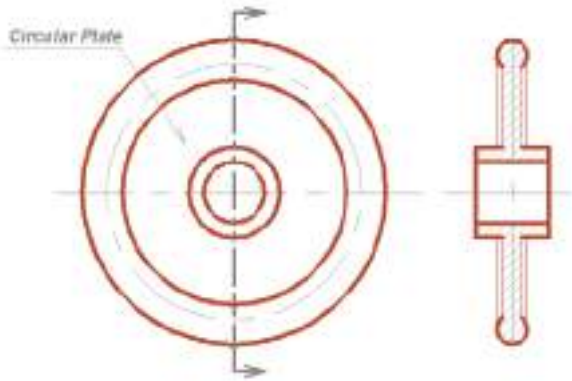


**Fig. 3.18 Solid shafts, bolts, screws, nuts, etc in section**

Some solid features of certain parts like spokes of a wheel are not sectioned, even though the cutting plane passes through them. Such representation is used to distinguish a wheel with spokes from a wheel with thin plate or web. Fig. 3.19 illustrates the general practice in sectional representation of a wheel with spokes and with plate.



**(a) Wheel with spokes**



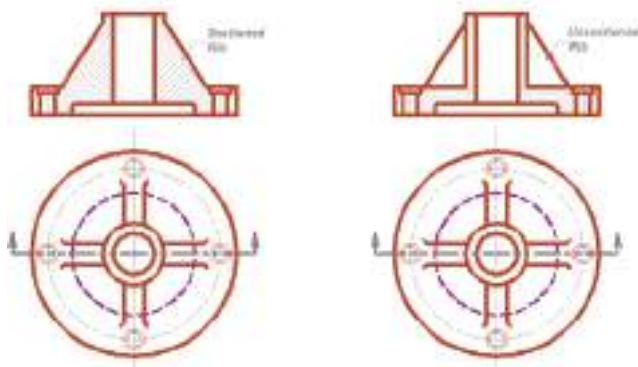
(b) Wheel with spokes

**Fig. 3.19 Wheel with spokes and wheel with plate**

When the cutting plane passes through the center of a rib length, web, spoke, or other relatively thin element, the section lining is omitted to avoid a false impression of thickness and solidarity (Fig.3.20). However, if the cutting plane passes crosswise through those thin elements, the features are crosshatched as usual.

When there are an odd number of holes, ribs or spokes, which are symmetrically arranged around a cylindrical object, conventional revolutions are used to make section views clear and avoid confusion in interpretation.

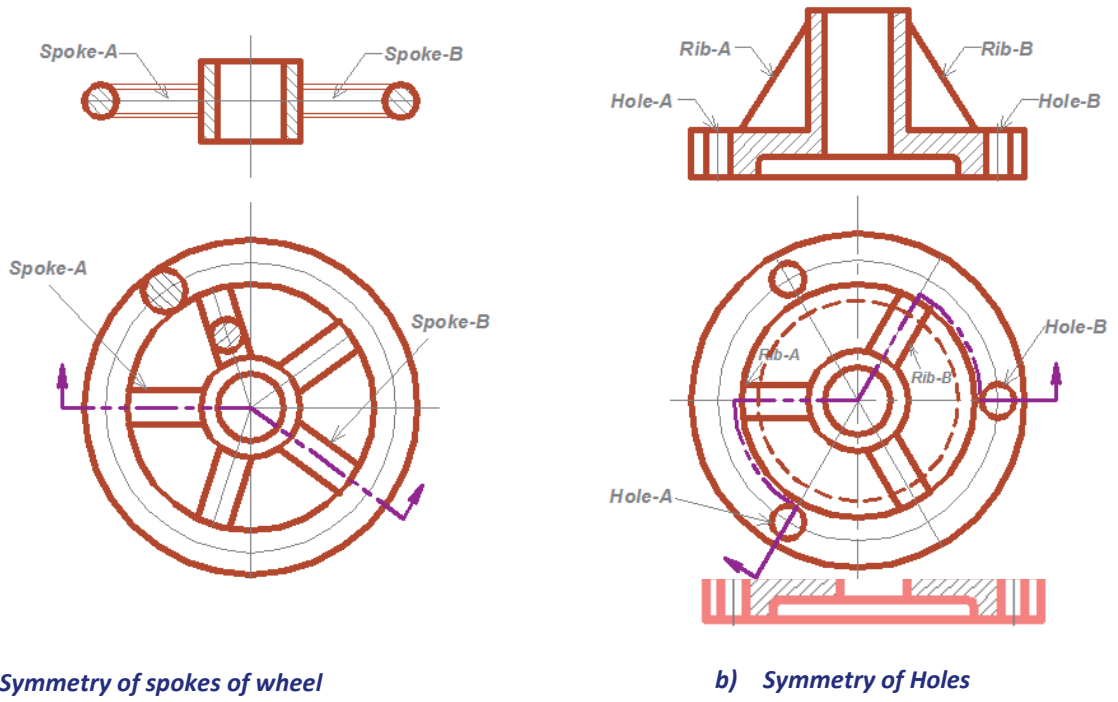
These features may not project orthographically to the section view, but the convention allows for this practice and it is accepted as standard. Therefore, these parts are assumed to be rotated until aligned with the section plane axis as illustrated in Fig. 3.21. It is usually used for both sectioned and unsectioned view representation of objects with odd numbered features.



(a) Incorrect Practice

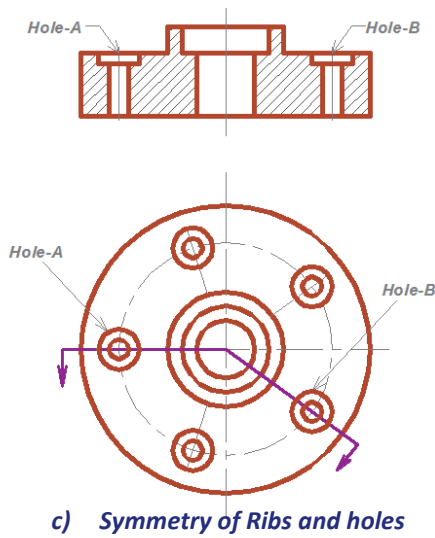
(B) Correct Practice

**Fig. 3.20 Ribs in section**



a) Symmetry of spokes of wheel

b) Symmetry of Holes



c) Symmetry of Ribs and holes

**Fig .3.21 Symmetry of spokes of wheel, ribs and holes**

## UNIT SUMMARY

Interior features of an object can be described with the use of hidden lines. This can become confusing however. The use of sectional views simplifies the representation of internal features. In a sectional view we imagine the object is cut by a plane to reveal the interior features.

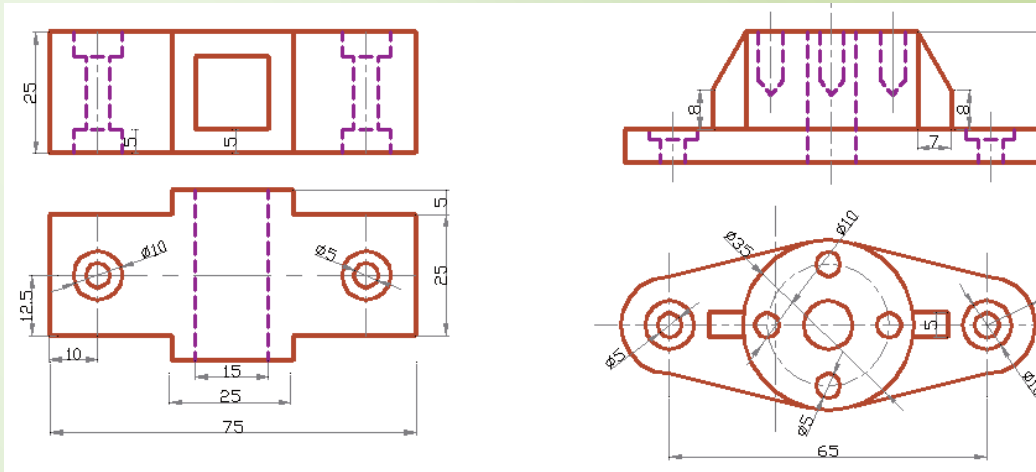
Longitudinal sections cut the object lengthwise. Cross section cuts the object crosswise. A full section cuts the object in half. Section lines represent where the surface was cut. The cutting plane must also be described in another view. A half section cuts the object in a quarter. A half sectional view shows the interior and exterior of the object.

The cutting plane can be offset to show desired features. A broken section (Partial section) can also be used to give greater description of an object.

Revolved and removed sections are used to eliminate the need of a separate view. Line technique is important: contrast, spacing, inclination.

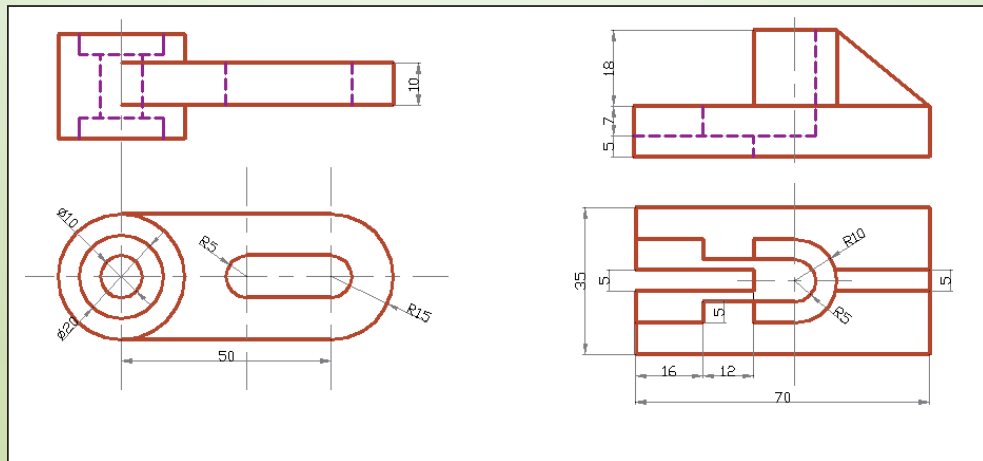
**Exercise**

1. For the principal views shown in figure exercise 3.1 draw an appropriate full section of the front views.



a)

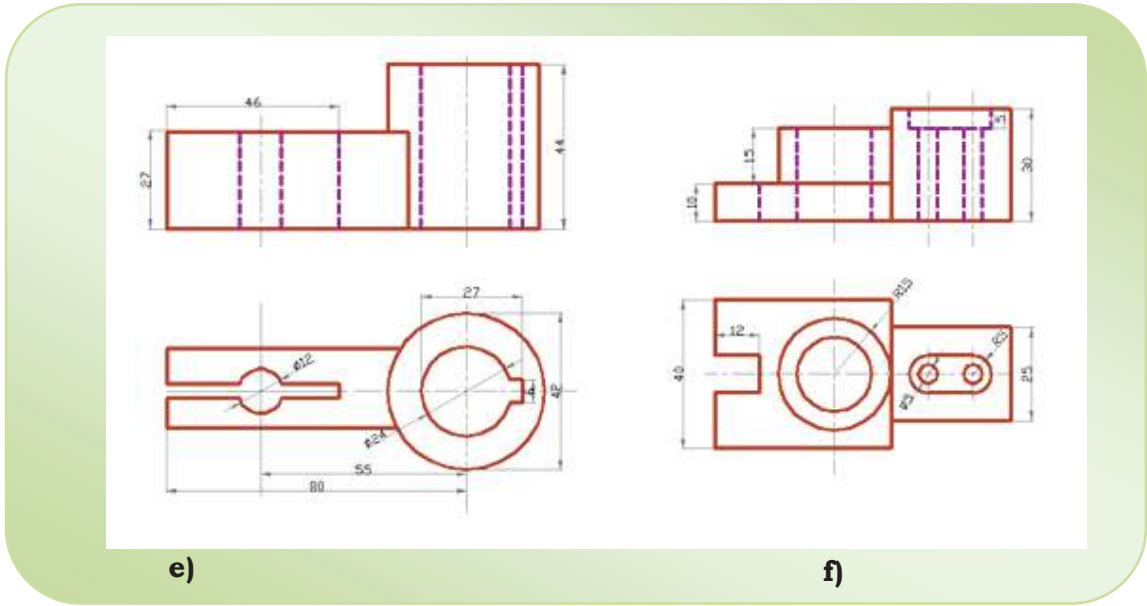
b)



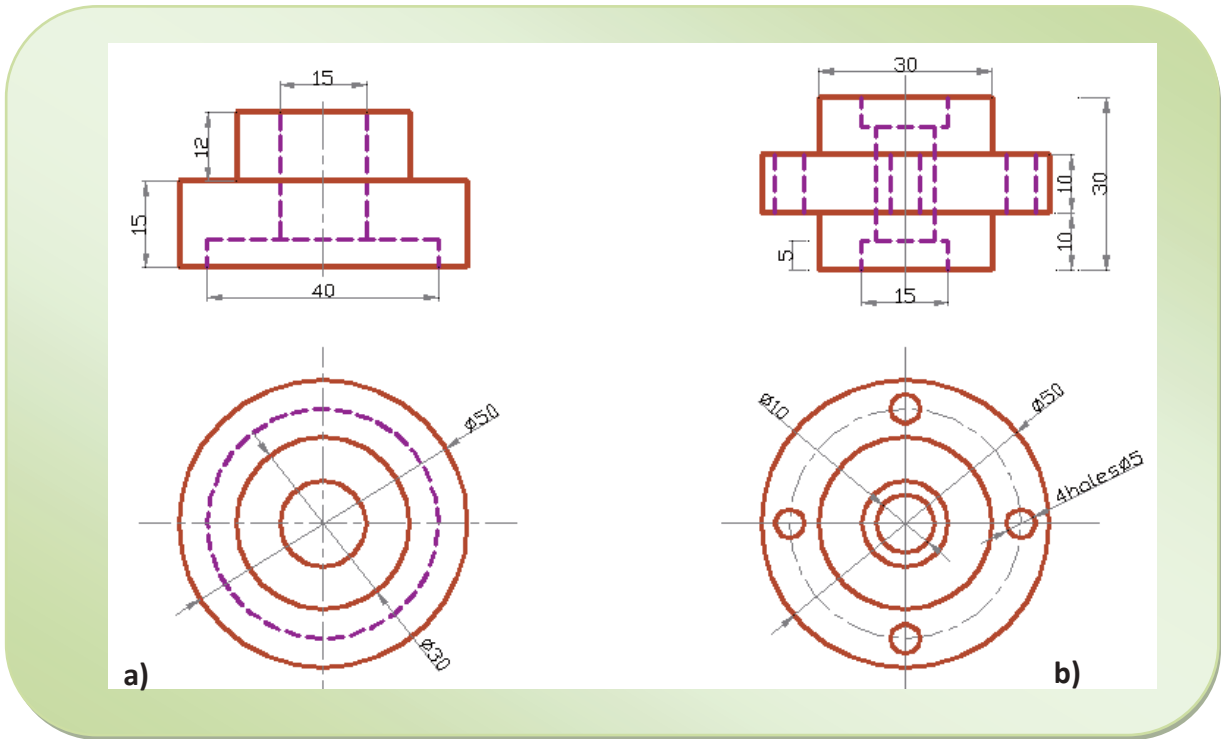
c)

d)

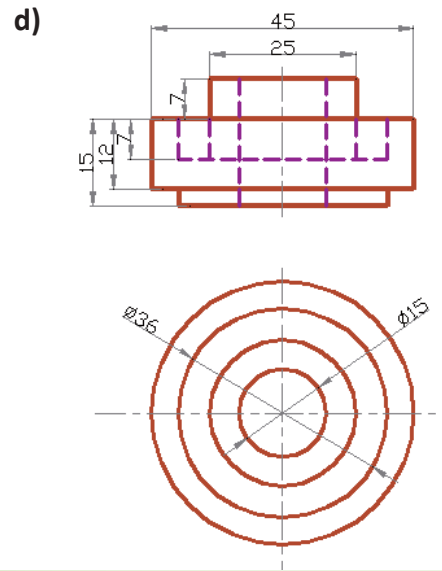
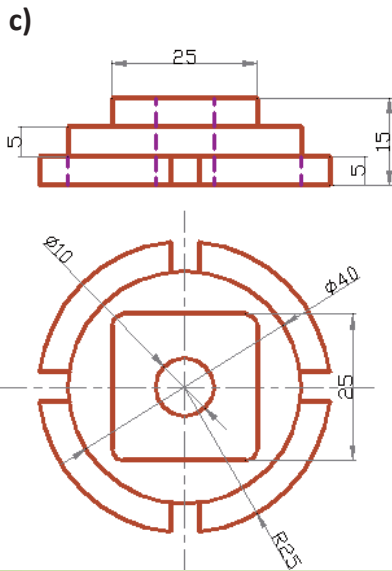
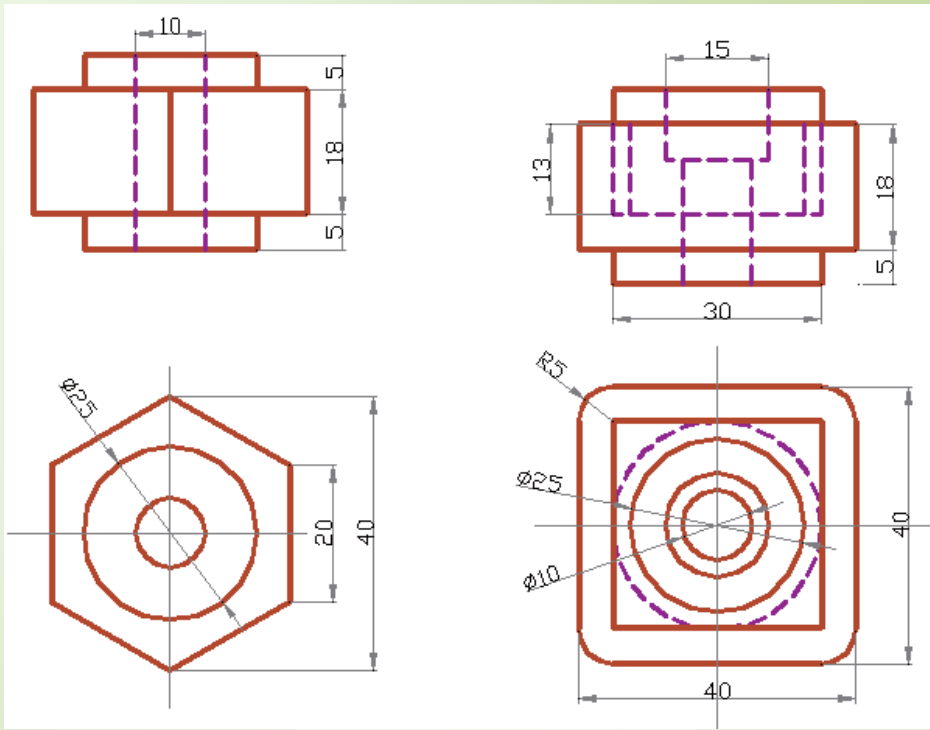
3 Sectional View



2. For the principal views shown in figure exercise 3.2, draw an appropriate half-section.





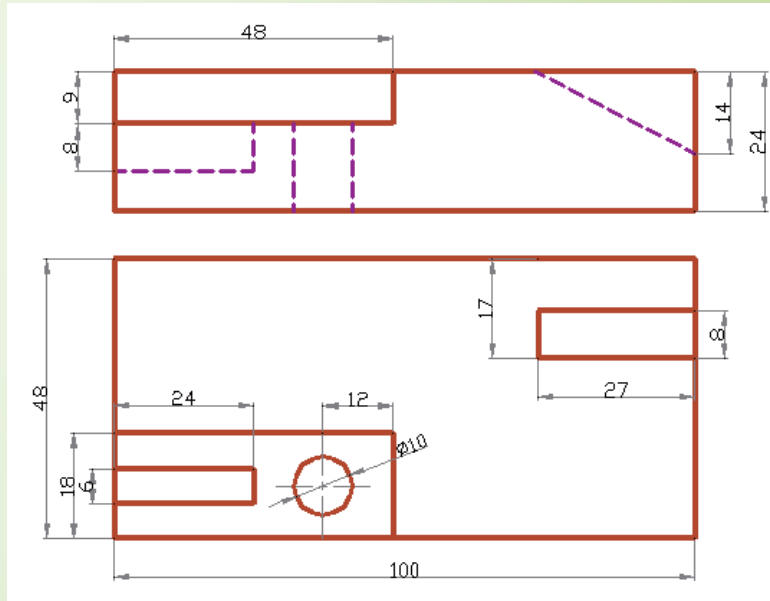


**e)**

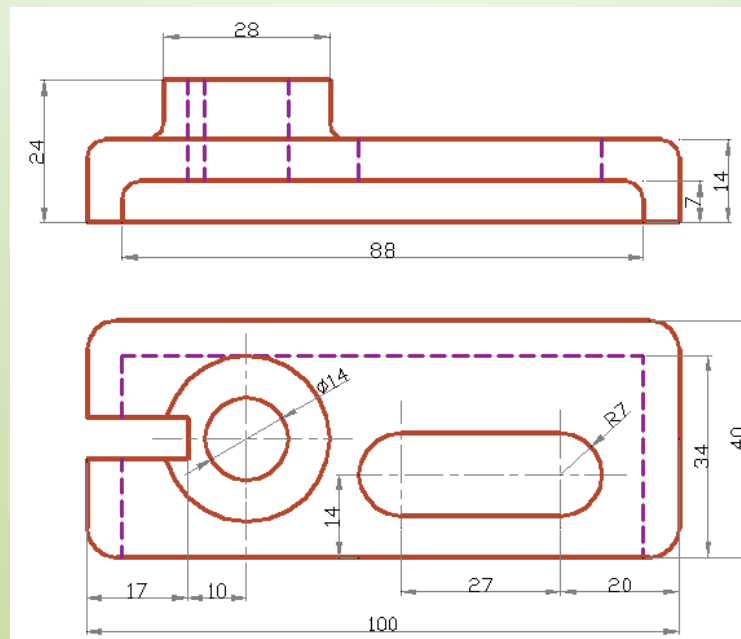
**f)**

3 Sectional View

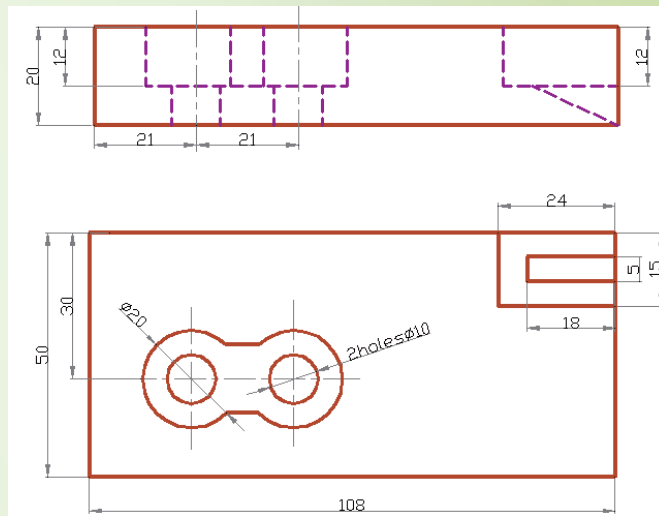
3. For the principal views shown in the figure of exercise 3.3 choose an appropriate offset cutting plane line to show the front views in section



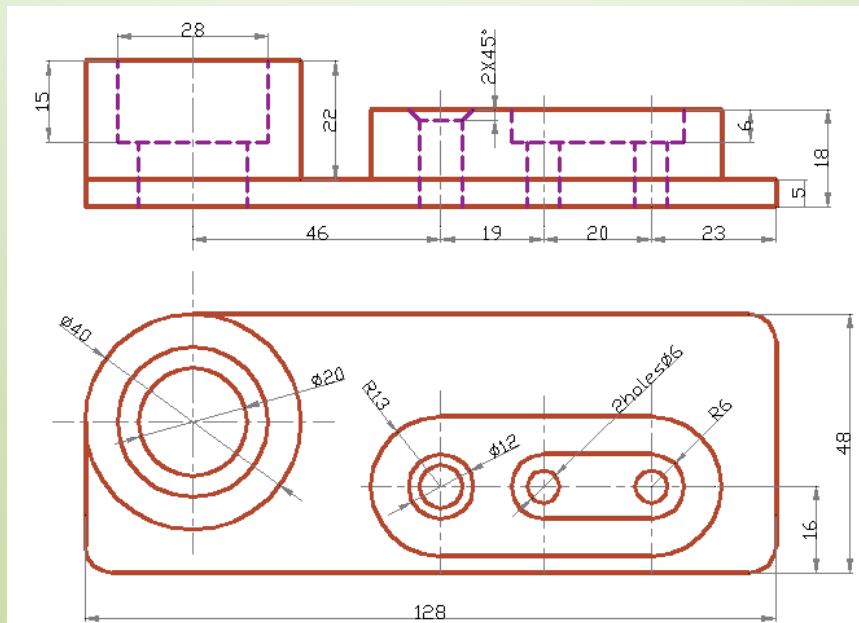
a)



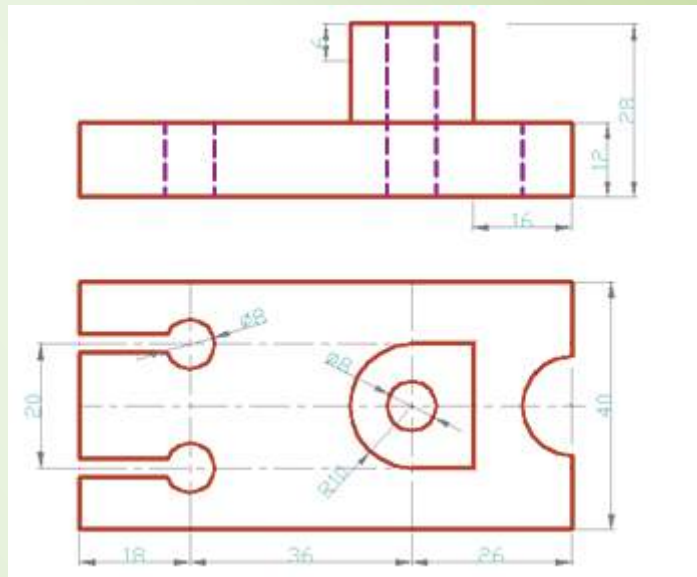
b)



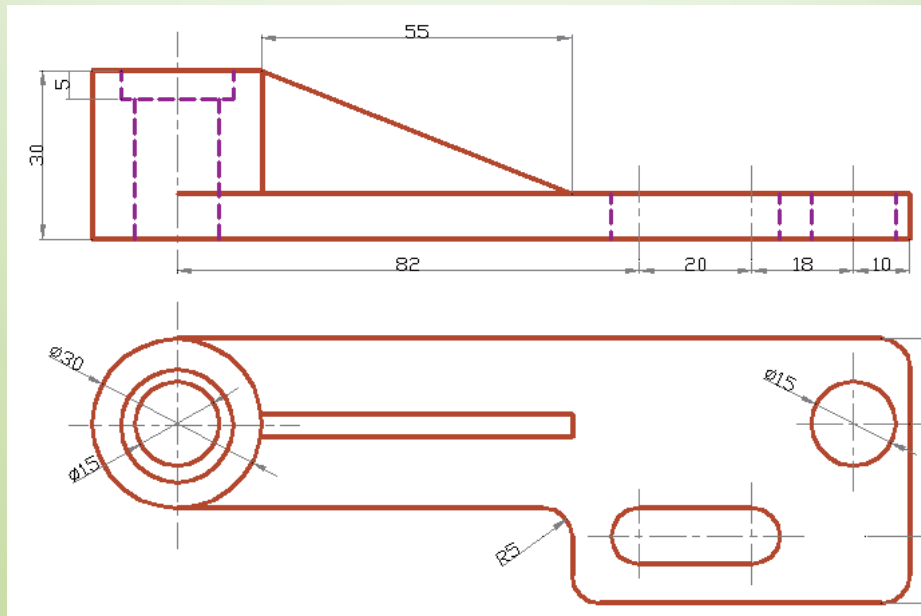
c)



d)



e)

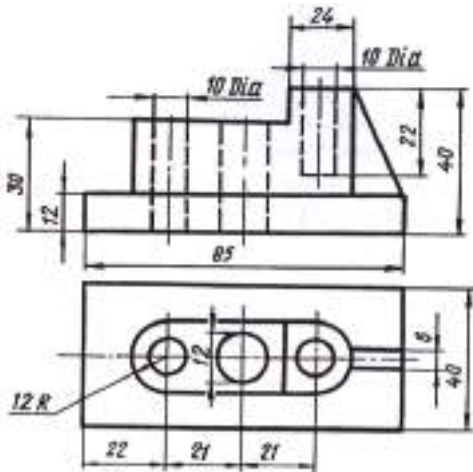


f)

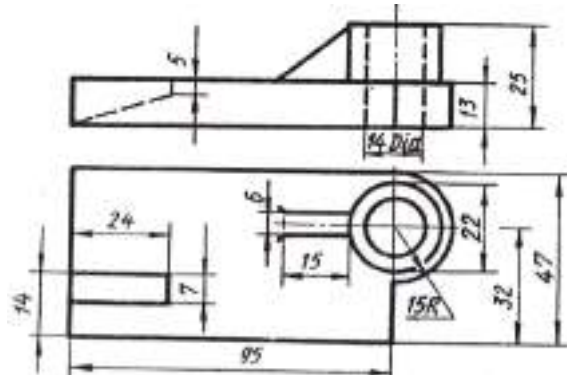
### 3 Sectional View

#### Project I

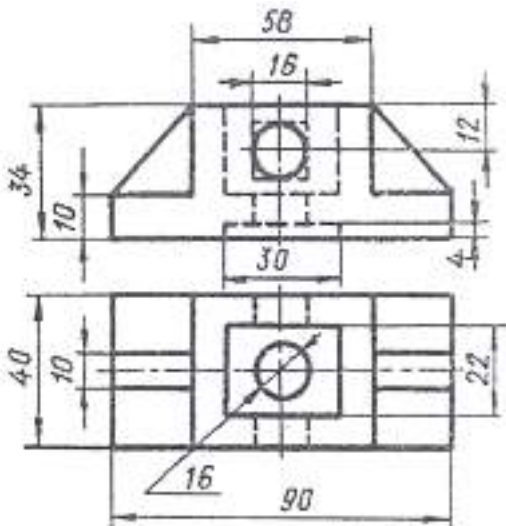
Two views of a model are given in each of the following cases. Replace one of the views using either **Full, Half or Off-set sectional view** and show your **cutting plan line**.



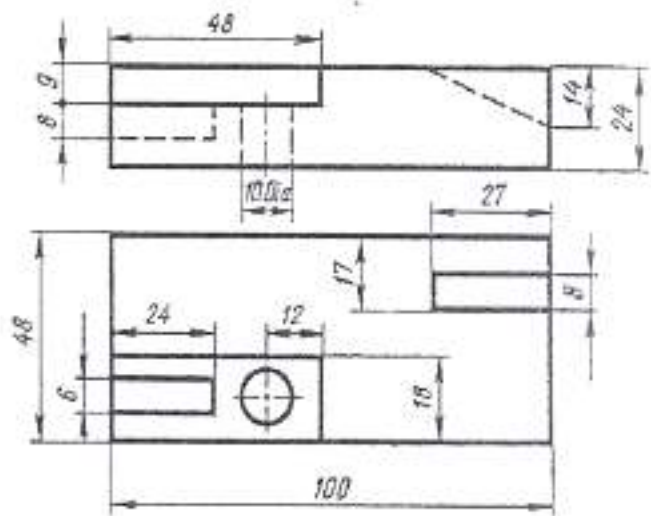
1.



2.



3.

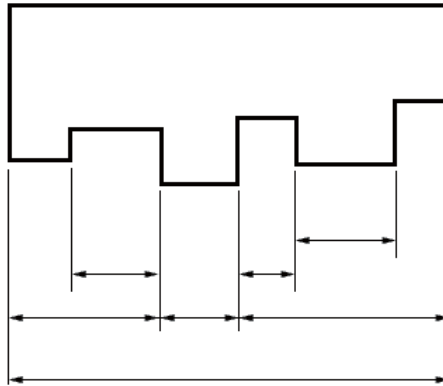


4.

UNIT

4

## DIMENSIONING



**Combined Dimensioning**

### Learning Competencies:

*Up on completion of this chapter you should be able to:*

- ✓ Know the importance of dimensioning;
- ✓ Identify the basic elements of dimensioning, such as dimension line; arrowheads extension line, leaders, notes, etc;
- ✓ Distinguish between the aligned system of dimensioning and the unidirectional system of dimensioning;
- ✓ Explain the theory of dimensioning;
- ✓ Differentiate between size dimensioning and location dimensioning;
- ✓ Understand the difference between datum dimensioning and chain dimensioning;
- ✓ Understand the rules of placement of dimensions on views.



## 4.1 Introduction

What do you understand from the word Dimensioning?

How do you describe the size of your class room on drawing?

A Drawing of an object is prepared to define its shape and to specify its size. A complete drawing of an object gives its shape description and also a complete size description.

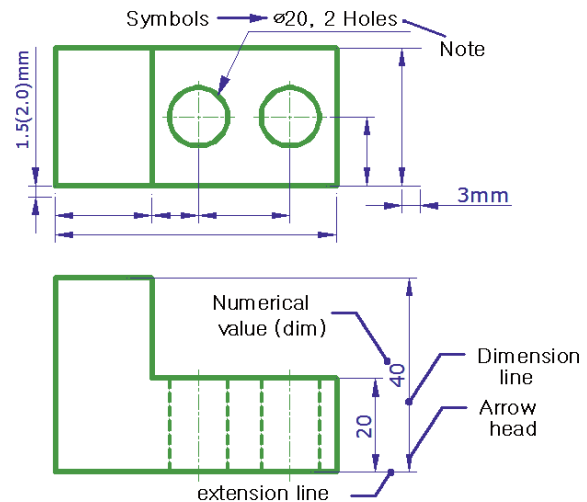
The shape description is based upon the theory of projection. The size description is based upon the theory of dimensioning. A dimension is the art by which the dimensions of an object are written on its drawing. The correct dimensioning requires a systematic way in which the dimensions are written on the drawing.

All the discussions throughout this text is supported by an illustration to explain the basic principle of dimensioning however those detail drawings not helpful for this explanation have been omitted.

## 4.2 Lines and Symbols

For a proper size description of an object, one must have basic knowledge and skill how to use the various symbols, forms and elements of dimensioning on its drawing. The basic symbols, forms and elements used in dimensioning are *dimension lines*, *extension lines*, *leaders*, *arrowheads*, *dimension (numerical values)*, *symbols* explaining a feature's size and *notes*.

All these concepts are explained graphical on Fig 4.1.



**Fig.4.1 Notation of dimensioning**

### Forms of dimensioning

The two basic dimension forms while giving a size of a feature are a *dimension* and a *note* as shown on the above figure.

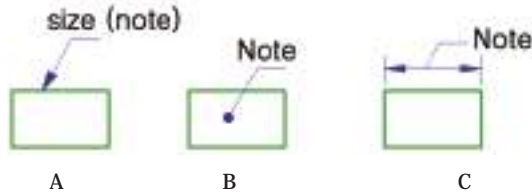
**Dimension:** refers to the numerical value used to give distance information between two specified points or size of a particular feature. It is placed centrally above or by breaking dimension line.

**Note:** Refers to the written word or Phrase used along with a dimension as explanatory information.

**Leader:** is a thin continuous line leading from a dimension value or an explanatory note to the feature on the drawing to which it applies. Leader lines start from a size or a note ends:

- A) with an arrow head when it stops touching outline of view of a part and
- B) with a dot when rests on a surface with in the outline of a part crossing its outline or

C) without any arrow and dot mark when rests on a dimension line as shown on figure below.



- A) When touching outline of a part
- B) When rests crossing nothing on a surface
- C) When rest on a dimension line

**Fig 4.2 Style of leader lines**

Avoid the use of long leader line even if it means repeating features. Leaders should not cross each other rather one drawn parallel to the other.

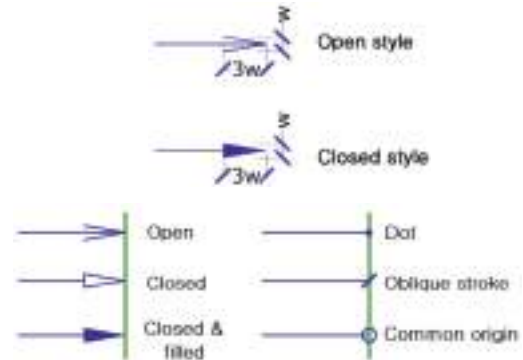
**Dimension line:** is a thin continues line terminating commonly with an arrow head in a machine drawing and oblique stroke/ dot in architectural and structural drawing to indicate direction and extension of dimension.

**Extension line/projection line:** is a thin continuous line that extends from a point on a drawing to which a dimension refers to and providing a boundary for the dimension line.

It is usually drawn perpendicular to the outline and dimension line and there should be a gap of about 1.5 (2.0) mm from the outline of the object and 2mm extension beyond the dimension line.

**Arrowheads:** are terminators of dimension lines where they stop touching extension lines or features lines. They should be uniform in size and style throughout the drawing. The length of arrow head should be three times its width.

There are basically two styles of arrow heads namely *open* and *closed*; as shown in Fig 4.3. In fact there are very different styles of arrow head terminators.



**Fig.4.3 Style of arrow heads**

Most often the closed filled in type is used for general purpose and oblique stroke for architectural and structural drawings.

### 4.3 Reading Direction of Figures

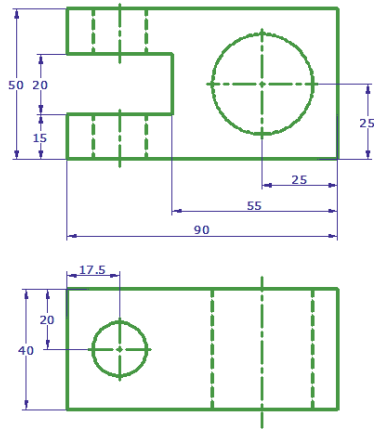
There are two systems of placing dimension based on the reading direction of figures.

#### Unidirectional dimension

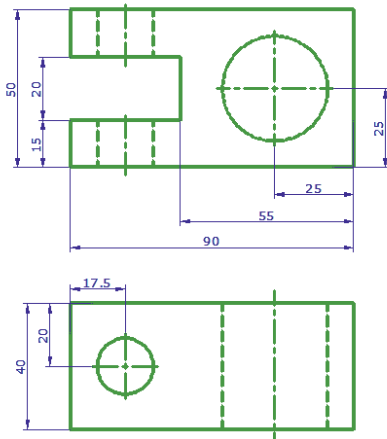
Here dimension and notes should be placed to be read from the bottom of the drawing. This system in majority cases used for engineering drawing as show in Fig 4.4 (a) below.

#### Aligned dimension

In this system, all the dimensions are so placed that they may be read from the bottom or right hand edge of the drawing. All the dimension should stand normal to the dimension line as shown below on Fig.4.4 (b). Mostly this system of dimension is used for architectural and structural drawings.



A) Unidirectional dimensioning



b) Aligned dimensioning

**Fig 4.4 Unidirectional and Aligned dimensioning**

**Checkpoint 4.1**

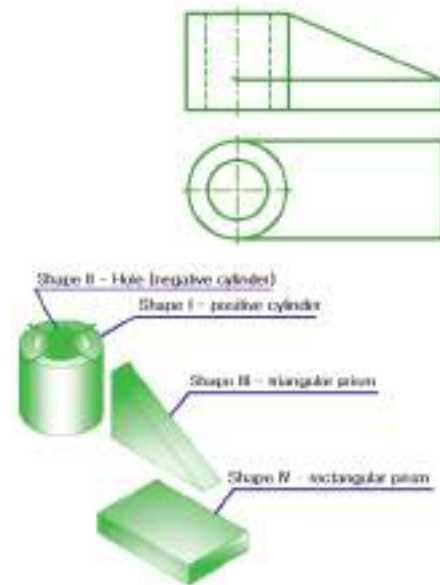
Redraw the given views of an object twice and then dimension them using aligned and unidirectional system of dimensioning.



### 4.4 Theory of Dimensioning

All objects are composed of one or more of the following different basic geometric shapes such as prism, cylinder, cone, pyramid and sphere.

So dimensioning an object becomes relatively easy if you first break it down into its component geometric shapes as shown on Fig.4.5.



**Fig. 4.5 An object broken down into its component parts**

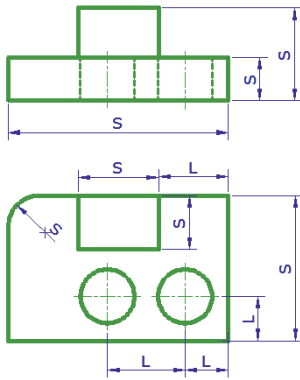
The object is said to be fully dimension when the two types of dimensions i.e. size dimension and location dimension are included.

#### 4.4.1 Size Dimensioning

It is used to describe size of an object such as height, width, depth, thickness, length, radius, diameter etc, with regard to its form and other features like holes and slots.

### 4.4.2 Location Dimensioning

It is a type of dimension used to locate the various features like hole, slot etc, of an object relative to each other from center of one feature to centerline of another similar/different feature or to a reference edge. It can be given in all width, height and depth direction.



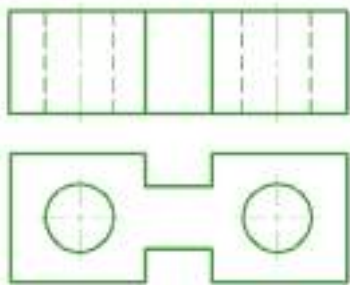
**Fig.4.6 Size and location dimensions**

#### Activity 4.1

- What is the difference between size and location?

#### Checkpoint 4.2

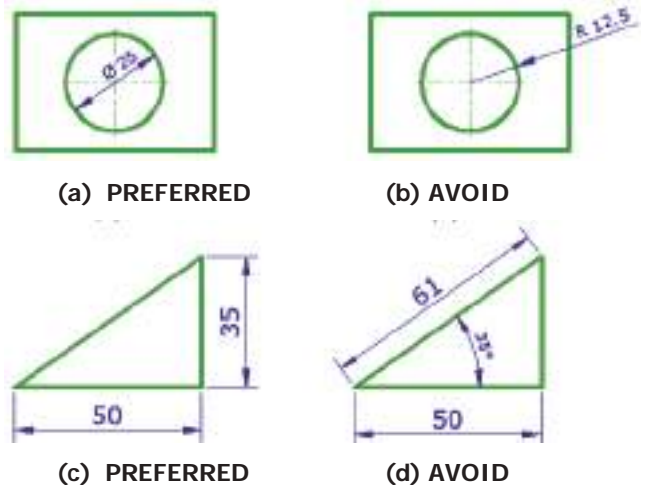
Show the size and location dimension of the object whose views are given below.



### 4.4.3 Selection of Dimension

When dimensioning an object, the dimensions to be given should be selected in such a way that they are convenient for the workmen to use during manufacturing. The following points should be noted during selection of dimensions:

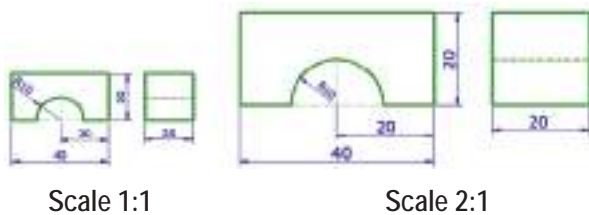
- Dimensions of mating parts should be selected so as to ensure proper functioning.
- Dimension should not be duplicated or minimum number of dimensions should be used (Fig.4.7 (c) and (d)).
- Dimensions should be selected so that it will not be necessary to calculate, scale, or assume a dimension during manufacturing.
- Selection of location dimension require more attention than size dimensioning.
- A hole dimension is given using diameter than radius on its circular view (Fig.4.7 (a) and (b)).



**Fig. 4.7 Selection of dimension**

### Scale of a drawing

Scale is a means by which we determine the graphical size of an actual object on paper with equal, reduced and enlarged size. Regardless of the scale used, the dimension figures shown on the drawing always represent the actual size of the object.



**Fig.4.8 Relationship between scale of the drawing and dimensioning**

The term also refers to the ratio between the size of a drawing and the actual object. A scale drawing can be larger, smaller or the same size as the object. Object should be drawn full size whenever possible. For example, a scale of 1:2 implies that one unit on a drawing represents two units of corresponding actual size of an object.

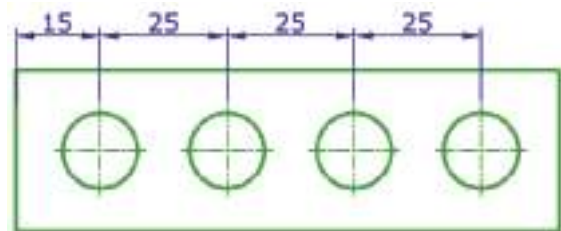
### 4.5 Methods of Dimensioning

There are different methods of dimensions to be used depending on the characteristic feature of an object dimensioned. However, at this level of technical drawing course only two of the commonly used methods are discussed and these are namely:

- A) Chain or point to point dimensioning and
- B) Datum or base line dimensioning

#### 4.5.1 Chain Dimensioning

It is a method of dimensioning used when a series of dimensions is given on a point to point basis. The disadvantage of this method is it may result in an undesirable accumulation of tolerance error between individual features (the term tolerance will be discussed and understood at a higher level of education). So this method is not preferred for a product or part requiring high accuracy. This method may be adequate for describing simple parts, as shown on Fig.4.9.



**Fig 4.9 Chain dimensioning**

#### 4.5.2 Datum or Base Line Dimensioning

Points, lines or edges and surfaces of an object from which the locations of other features of the object are established is known as *datums*. For example the left side and bottom surfaces of the object, as shown in Fig.4.10 (A) are the datum surfaces and similarly the centerlines of the largest holes are used as datum lines for the other object as shown in Fig.4.10 (B). This dimension may be necessary if a part with more than one critical dimension must mate with another part as shown in fig 4.10 (A) and (B).

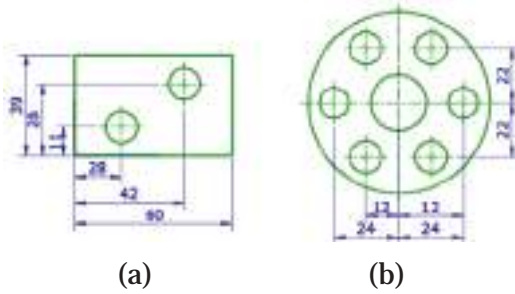


Fig. 4.10 (A) and (B) datum dimensioning

### 4.5.3 Combined Dimension

These are the result of simultaneous use of chain and parallel dimension as shown in Fig.4.11.

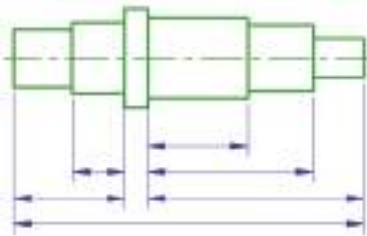


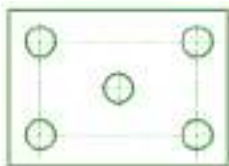
Fig. 4.11 Combined dimensioning.

#### Activity 4.2

1. From the basic terms of dimensioning listed earlier suggest a good positioning of dimension line, dimension text, extension line with example.
2. What do you understand with the difference b/n the words chain, datum and combined?

#### Checkpoint 4.3

Redraw the given views of an object and then dimension them using chain and parallel method of dimensioning.



### 4.5.3 Standard features Dimensioning

#### Circular Feature

**Diameter:** should be dimensioned on the most appropriate view to ensure clarity. Circle is dimensioned by diameter. The dimension (numerical value) is preceded by  $\phi$  symbol.

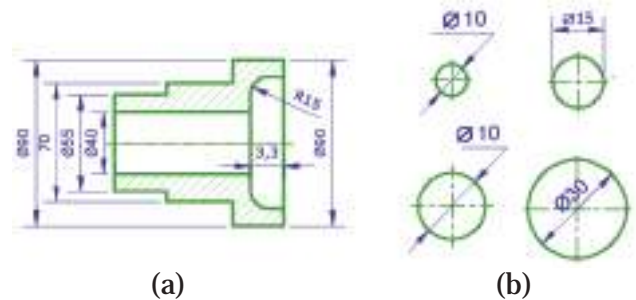


Fig. 4.12 Dimensioning of diameters

**Arcs:** are dimensioned by giving the radius on the view that shows the true shape of the arc. The dimension line for the radius of arc should always be drawn at 30°, 45°, 60° but not vertical and horizontal. The dimension of chords, arcs and angles are shown in Fig.4.13

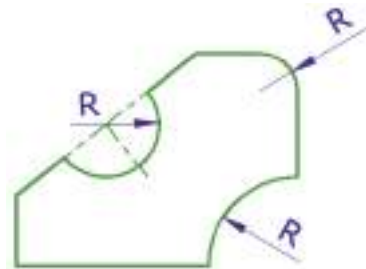


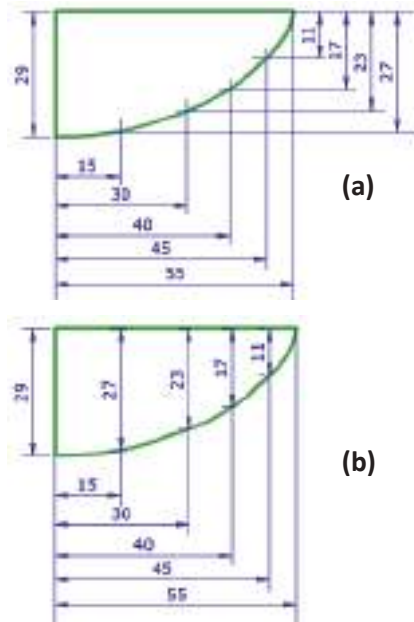
Fig.4.13. Dimensioning of arcs, cords and angles.

**Curves:** non-circular curves can be dimensioned by datum dimensioning method.



## 4 Dimensioning

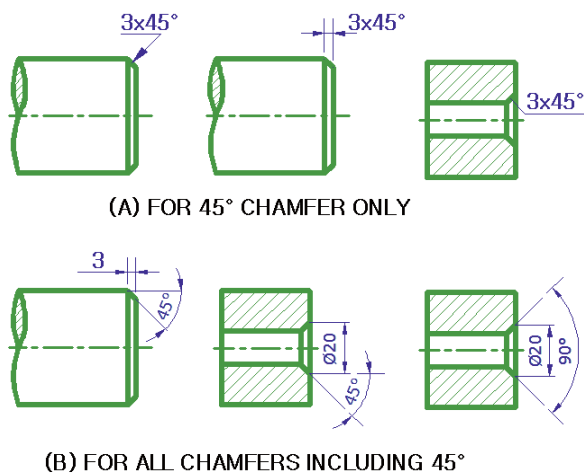
The more the number of points used on the curve, the better the curve is dimensioned.



**Fig. 4.14 Dimensioning of non circular curves.**

### Chamfers

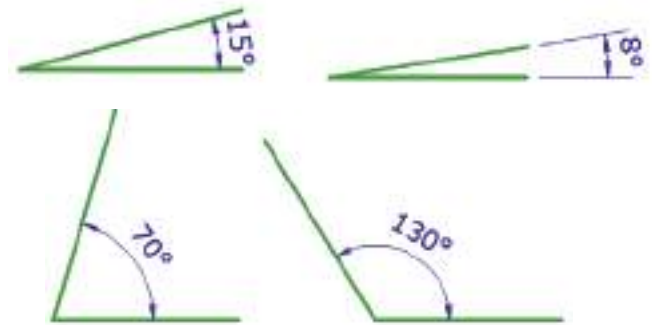
Chamfers are normally dimensioned by giving their angles and linear lengths. When the chamfer is  $45^\circ$ , it may be specified as a note.



**Fig. 4.15 dimensioning of chamfers.**

### Angles

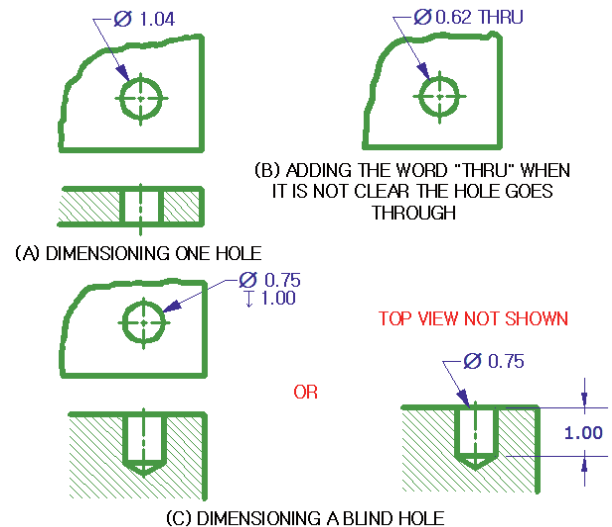
When dimensioning an angle the dimension line will be an arc centered at the vertex of the angle

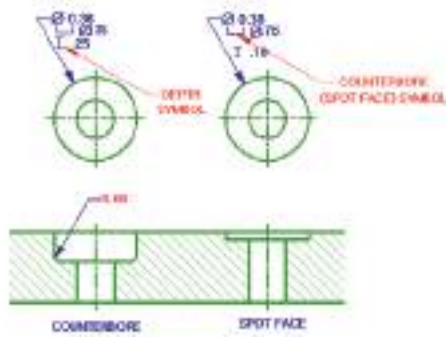


**Fig 4.16 Dimensioning of angles**

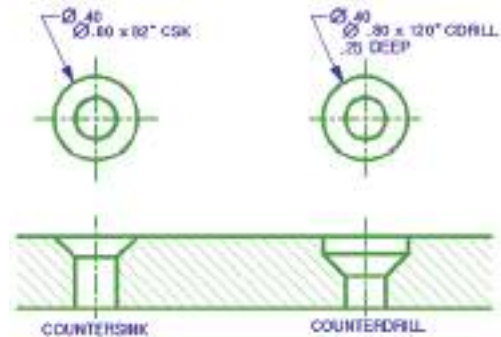
### Holes

Plain and round holes are dimensioned in various ways depending upon the design and manufacturing requirements. However the leader is the method most commonly used as shown on Fig.4.12.



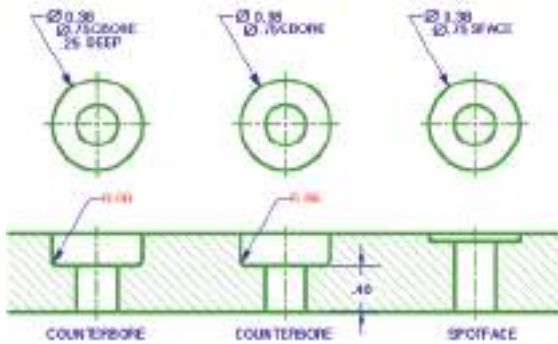


(a) Using symbols

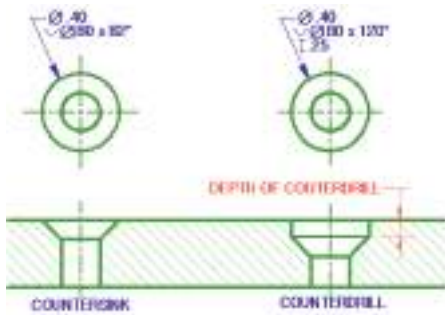


(b) Using words

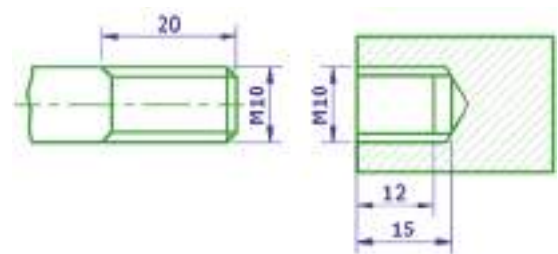
**Fig 4.17 Dimensioning of holes.**



(b) Using words



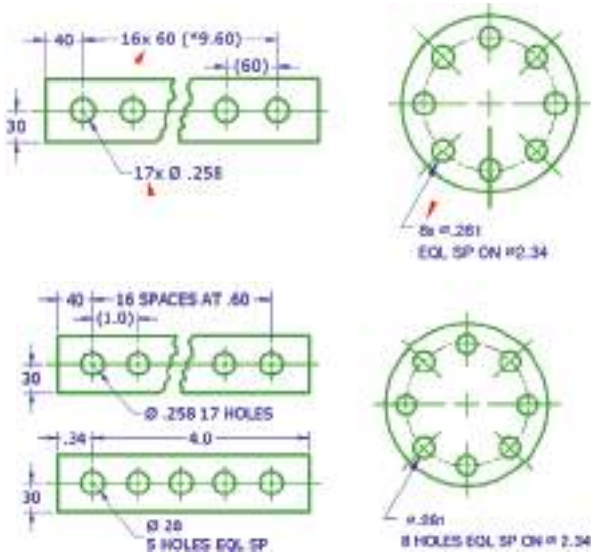
(a) Using symbols



**Fig. 4.18 Dimensioning of screw threads**

### Repetitive features

They are specified on a drawing by the use of an X mark in conjunction with the numeral to indicate the “Number of times” or “places” they are required.

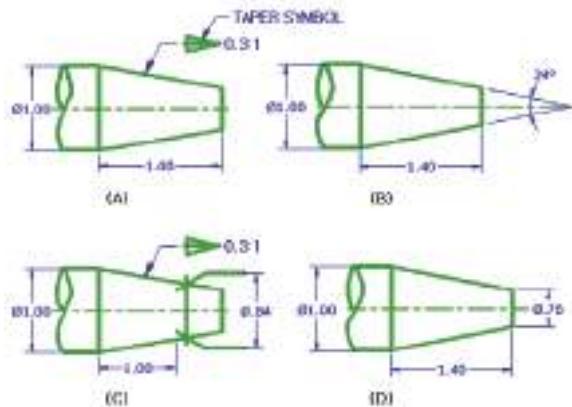


**Fig. 4.19 Dimensioning of repeated features**

**Note:** EQL SP is to mean equal space.

### Slopes and tapers

A slope is the slant of a line representing an inclined surface. It is expressed as a ratio of the difference in the heights at right angles to the base line at specified distance apart. A taper is the ratio of the difference in the diameter of two section perpendicular to the axis of a cone to the distance between these sections.



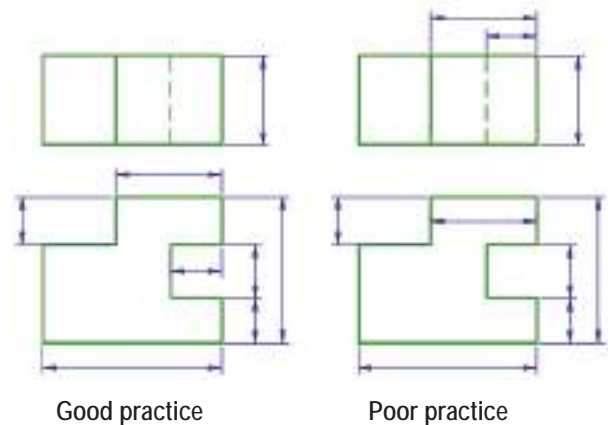
**Fig. 4.20 dimensioning of slopes and tapers**

## 4.6. Placement of Dimension

Dimension should be placed on the following elements so that reading of them will be easy and comfortable.

### 4.6.1 Dimensioning of Views

Dimensions should be selected carefully and placed on a view that shows the contour of the feature to which they apply.



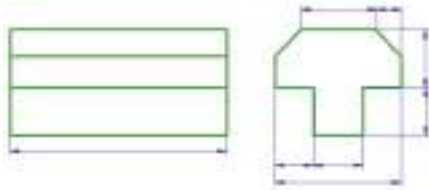
**Fig. 4.21 Dimensioning of views.**

### Placement rules of dimensions on view

1. Dimension should be placed between views whenever possible unless required elsewhere.
2. Dimension should be placed outside the views of an object unless and otherwise placing them inside is required for clarity and ease of reading especially for large views.
3. Dimension given on one view should not be repeated on another view. A redundant dimension may be given when required

for reference dimension by placing it in a bracket.

4. Dimension should be taken from visible outline than the invisible (hidden) line.
5. Use only one system of dimension either aligned or unidirectional on one or more views of an object.
6. Use the same unit of measurement and dimension line terminator (arrowhead) on a single view.
7. Dimension should be placed on a view that shows the true length edge of an inclined surface.
8. Dimension the view that best shows the characteristic contour or shape of the object.



**Fig. 4.22 Dimension a view showing characteristic shape of an object.**

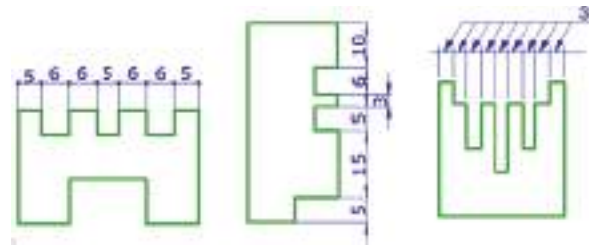
9. In a parallel method of dimensioning the shortest and longest dimension lines should be placed closest and farthest from the outline of the view respectively.
10. Dimension figures should be placed midway between arrowheads of a dimension line unless staggered as in the case of parallel dimension to improve clarity and reading of dimensions.
11. Avoid using centerline and outline of a view of an object as dimension line,

however centerline may be used as extension line.

12. Avoid crossing of two dimension lines and extension line.
13. When an overall dimension is given at outermost, one of the intermediate dimension should be omitted to avoid redundant dimensioning as in parallel dimensioning.
14. Avoid any dimension line which passes through a dimension figure.
15. The distance from the outline of a view to the first dimension line and between parallel dimension lines varies from 5-10 mm. Use a single uniform distance between dimension lines.

#### 4.6.2 Dimension on Limited Space

When the space between the extension lines is too small to permit placing of the dimension line and the dimension, an alternate method of placing them is shown on Fig.4.23.



**Fig. 4.23 Dimensioning in limited space.**

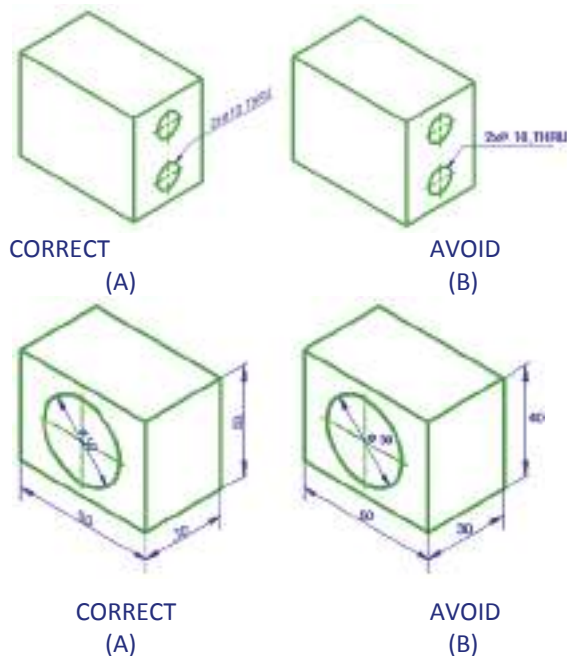
### 4.6.3 Pictorial Drawing Dimensioning

#### Activity 4.3

1. Do you remember any exercises given on orthographic projection?
2. How can you dimension those exercises?

Some time when the need arises to give dimensioning on the pictorial representation of an object the following few basic principle of pictorial drawing dimensioning should be noticed.

Dimension line and extension lines should be drawn parallel to the isometric axes. It is better to use aligned system of dimensioning to dimension arcs and curves in pictorial drawing. Leaders and associated notes should be placed in a plane parallel to the face on which the dimension applies as shown in Fig.4.24.



**Fig. 4.24. Pictorial dimensioning**

#### Key terms

- **Datum:** is a point, line, or surface from which all measurements are taken.
- **Leader lines:** are thin continuous lines that point to features on an engineering drawing with an arrowhead. They are accompanied by a dimension or local note that specifically describes circular feature.
- **Tolerance:** is the allowed deviation for a specified dimension. How much deviation is acceptable is different for each type of job. The deviation or error is displayed as  $\pm$  measurement.



## UNIT SUMMARY

A detailed drawing must indicate not just the shape, but the size of the object. Additional information such as surface finish, welding techniques, material lists and tolerances may also be included. Dimensioning includes both size and location dimensions.

Dimensions should be placed outside the object for clarity. Try not to repeat dimensions on drawings. Extension lines must be light and do not start in contact with the outline of the object. Arrow heads are also usually three times the length compared with the width.

The following are a few basic rules that summarize what might well be a list of hundreds of very specific rules that apply to dimensioning. Review the list carefully. Make each of these items a part of your dimensioning practices.

- Each dimension should be clearly shown and stated so that it can be interpreted in only one way.
- Dimensions should be placed in the view where the best shape and true form are shown.
- Place a dimension between views, especially if it applies to both views and will improve clarity.
- Do not assume that a part is symmetrical. Dimension both sides of a symmetrically shaped part or use the centre line symbol or note to avoid confusion.
- Spacing between dimensions should be consistent within a drawing.
- Line up dimensions horizontally or vertically where possible.
- Avoid crossing dimension lines or leaders where possible.
- Cylinders should be dimensioned in their rectangular view.
- When using chain dimensioning don't complete the chain. Instead dimension all but one part of the chain and do an overall dimension.
- Dimension circles by their diameter and arcs by their radius.
- Use dimensioning symbols where appropriate.



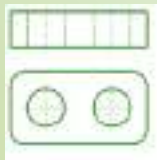
## Exercise

### EXERCISE I

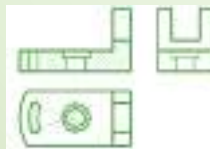
1. How are concentric circles best dimensioned?
2. Sketch the symbols for: diameter, radius, depth, counter bore, countersink, and square.
3. Where are the symbols listed in question 2 placed with respect to their numerical values?
4. When is a small cross required at the center of a radius?
5. When the depth of a blind hole is given, to what does the depth dimension refer?
6. When should extension lines be broken?
7. How is a reference dimension identified?
8. How can you tell if a dimension is out of scale (without measuring the drawing)?
9. Write a note that would show that a 10mm deep 20mm diameter hole is to be repeated six times.
10. How can you tell if an arc is to be dimensioned as a diameter or as a radius?
11. What is the proper proportion of width to length of arrowheads?
12. Compare the thickness of dimension lines to object lines.
13. Compare the thickness of dimension lines to extension lines.
14. If two dimensioning guidelines appear to conflict, which guideline should be followed?

### EXERCISE II

The orthographic views of some objects are given below, redraw the views and dimension them using aligned system and convenient method of dimensioning.



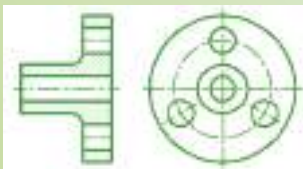
(a)



(b)



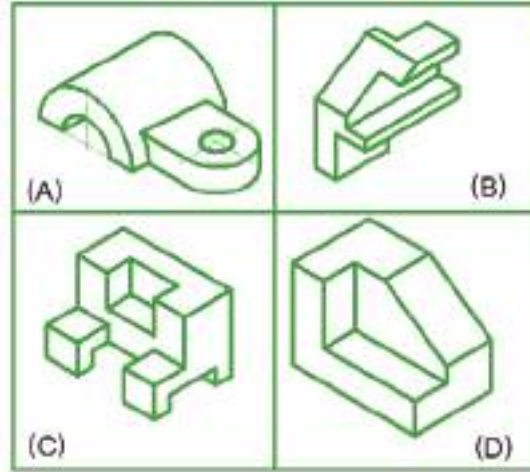
(c)



(d)

**Exercise II**

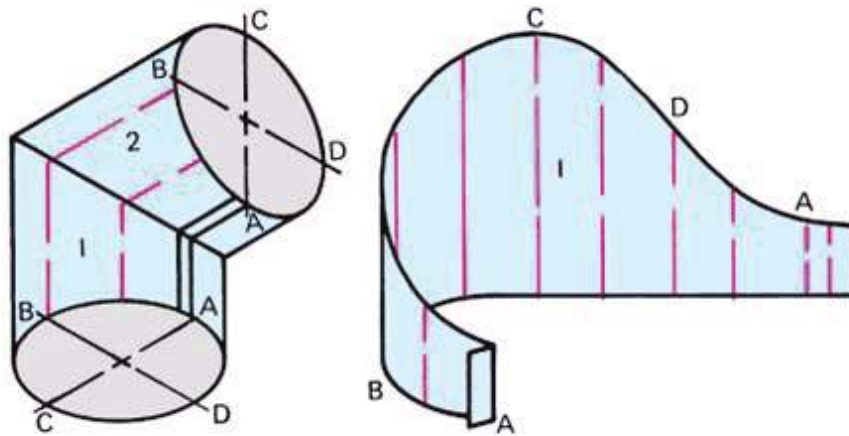
Make pictorial dimensioning and then draw the required number of view of each pictorial drawing and dimension them using unidirectional system and convent method of dimensioning.



# UNIT

# 5

## DEVELOPMENT AND INTERSECTION



### Learning Competencies:

*Upon the completion of this unit, you should be able to:-*

- ✓ identify the various types of surfaces and solids;
- ✓ identify the types of hems and joints used in sheet metal working;
- ✓ prepare the pattern development of common solids like prism, cylinder , pyramid and cone;
- ✓ determine the line or curve of intersection of two intersecting solids such as prisms and cylinders.

## 5.1. Introduction

What do you understand from development and intersection technically?

What do you think are the elements intersecting?

Can you give examples?

This unit deals with the two very important technical drawing concept, that is *developments* and *intersections*.

But before directly begin discussing the above two concepts. It is better to have a brief over view about the definition and description of basic geometrical elements such as point, line, surface and solid.

### Point

Point is a theoretical representation of location of an element /object in space. It has no dimension i.e. height, width and depth.

### Line

Line is one generated by a point moving according to a law which may be expressed by a geometric description or by an algebraic equation. It has one dimension i.e. only length.

### Surface

Surface is a two dimensional geometrical figure, which may be generated by a motion of either straight or curved line. It is called the *generatrix* of the surface. Any position of the generatrix is an element of the surface. There are two types of surface: Ruled surfaces and double-curved surfaces.

**I) A ruled surface:** It is a surface generated by the motion of a straight line in a certain desired path. This type of surface may include planes, single-curved surfaces and surfaces.

**A Plane** is a ruled surface generated by moving a straight line along a line (lying in the same plane) in such a way that its new position of moved line is parallel to the original line. A Plane surface may have three or more sides.

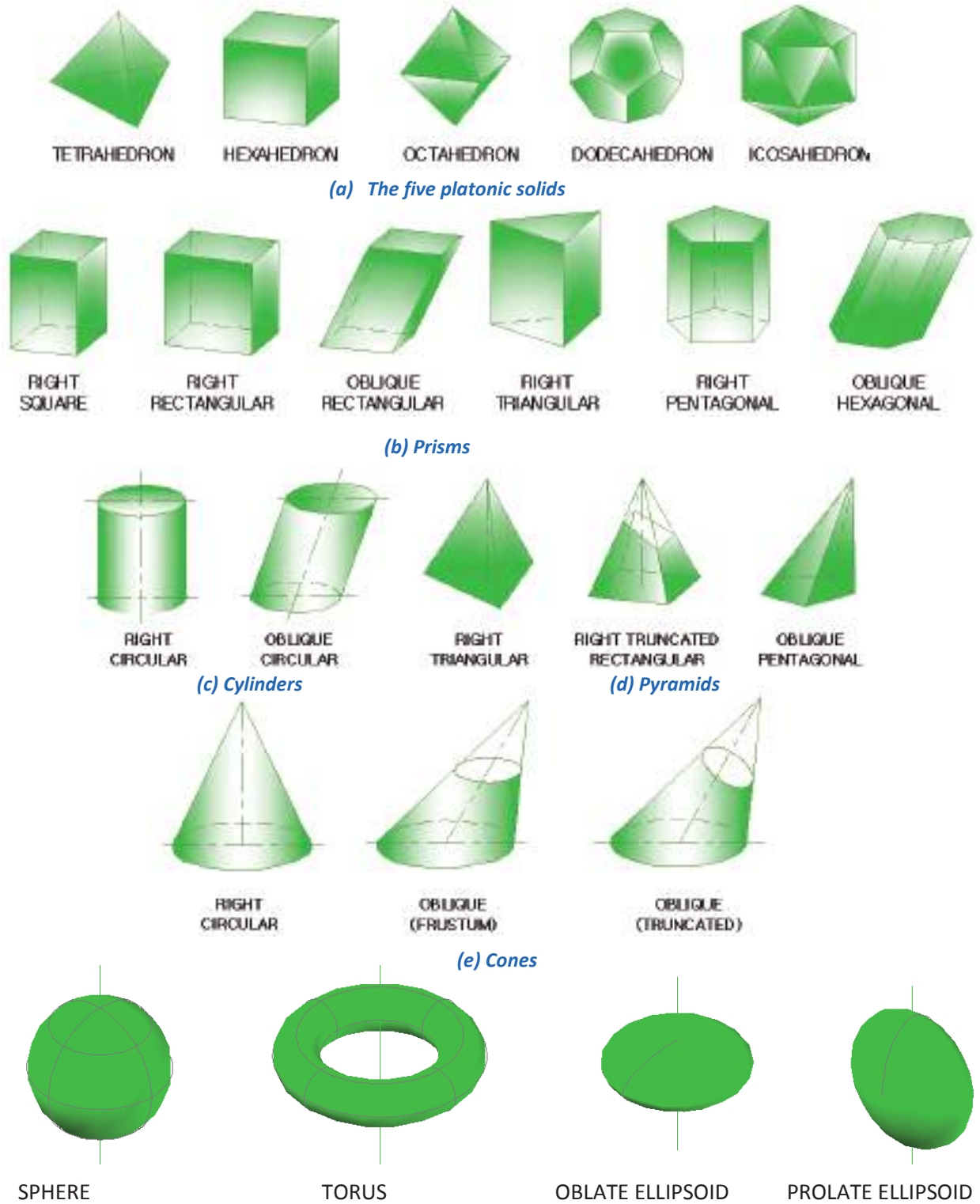
**A Single curved surface** is a curved ruled surface that can be developed or unrolled to coincide with a plane. Any two adjacent positions of the generatrix of a single-curved surface lie in the same plane, for example cylinder and cone (Fig.5.1 (c) and (e)).

**A warped surface** is a curved ruled surface that cannot be developed; here no two adjacent positions of the generatrix lie in the same plane. Examples are helicoid and hyperboloid as shown in Fig.5.2. So we conclude that it is a surface that is neither plane nor curved e.g. the hoods on most automobile are warped surfaces.

**II) Double-curved surface** is one that may be generated by a curved line and thus has no straight line element. Examples are sphere, torus and ellipsoid (Fig.5.1 (f)).

### Solid

Solid is a three dimensional representation of an object which may be generated by bounding plane surfaces or revolving of a plane figure about an axis. It shows height, width and depth dimensions of the object.



**Fig. 5.1 Solids and surfaces which define the geometry of three-dimensional objects**

There are three groups of solids. The first groups are solid that are bound by plane surfaces are called *polyhedra*. The common examples of polyhedra are the *prism* and *pyramid*. Those polyhedra whose faces are all equal regular polygons are called *regular polyhedra*. The five polyhedra are the *cube*, *tetrahedron*, *octahedron*, *dodecahedron*, and *icosahedrons*. They are collectively known as the *five platonic solids* as shown in fig 5.1(a). Plane surfaces that bound polyhedra are called *faces* of the solids. Lines of intersection of faces are called *edges* of the solids.

The second groups are solids that may be generated by revolving a plane figure about an axis in the plane of the figure. They are called *solids of revolution*. These include solids bound by single curved line example cylinder and cone, or include solids bound by a double curved line example sphere, and torus.

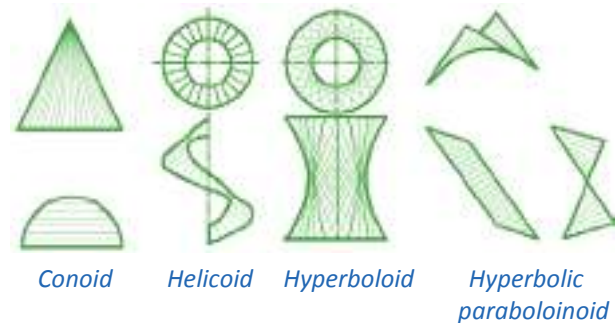
The third groups are solids that are bounded by surfaces. These solids do not have group name.

## 5.2 Development

Have you ever seen a model of a building?  
How do you think real objects with a shape cube or cone can be constructed with a model paper?


Development is a complete layout of all surfaces of a solid on a plane or flat object. A surface is said to be developable if it can be unfolded / unrolled to coincide with a plane. Surfaces of polyhedral and single-curved

surfaces are developable. But warped surfaces and double curved surfaces are not developable they may be developed by approximately dividing them into developable sections.



**Fig. 5.2 Warped surfaces**

In this unit, the development of the basic geometrical solids (Shapes) such as prism, cylinder, pyramid and cone is dealt by using the different methods of development to be discussed later on.



**Fig. 5.3 Development of surfaces of solids**

Practically the drawing operation consists of drawing the successive surface in their true size and shape with their common edges joined to each other.



Any professionally worker in a design and manufacturing industry is frequently required to have the knowledge of development of surfaces of an object. Practical application of development occurs for preparatory of packaging materials, cardboard and matchboxes, tin cans, funnels, cake pans, furnaces, pipes, elbows, ducts and roof gutters etc. made up of hard paper and sheet metal to be used as a container of various edible and nonedible item in a supermarket, to prepare many other house hold material and in many industries like automobile aircraft etc.

### Principle of development

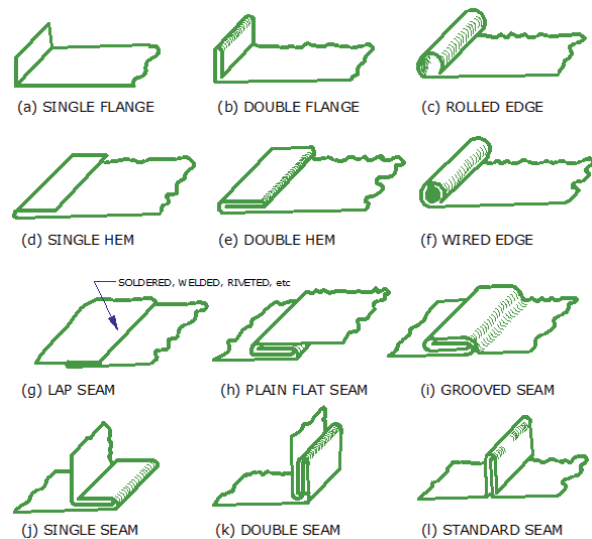
During making developments of surfaces, the following general rules should be observed.

1. Developments of solids are usually made with the inside surfaces up to facilitate bending or rolling during manufacturing.
2. It is possible to begin development of a solid from any edge desired, however it is a good practice to start and end with the shortest edge to provide strength of the final solid formed and ensure an economical usage of fixing material like UHU for paper models and soldering, welding and riveting for sheet metal model.
3. When making the development of a solid, elements should be labeled using numbers or alphabet of letters in the clock wise direction.
4. Bend or foldlines should be clearly shown in the development so that they will be used as guides for rolling or bending when making the final product.
5. Extra material to be used as lap or seam should be provided at the end element

lines of the development where fixing or fastening is required. The amount of material to be added varies depending on the thickness of the material, the type of connection and production equipment.

### Hem and joints for sheet metal works

Various types of hems and joints are used during manufacturing ducts, tanks, containers and other products from sheet metal. Hems are used to make the raw edge smooth and help to strengthen the material. Some of the more common types of hems and joints are shown below.



**Fig. 5.4 Hems and joints used in sheet metal work**

### 5.2.1 Methods of Development of Solids

- If you want to develop a cube and a cone, do you think that both of them can be developed with the same method?

There are three commonly known methods of developing solids based on their basic shapes like prism, cylinder, pyramid, cone and

transition piece. However, only two of these methods are discussed in this text book.

### 5.2.1.1. Parallel Line Development

This method of development is used to develop shapes that are based on prism and cylinder by making use of stretch-out-line principle.

**Note:** All example of pattern development discussed in this unit do not include the extra materials to be used as a seam.

If the pattern development of a solid excludes the top and bottom cover, it is known as lateral surface development. But if it includes the top and bottom cover, it will become complete surface development.

A solid is said to be right solid if its axis is made perpendicular ( $90^\circ$ ) to the base of the solid. Example are and Right prism, right cylinder. By default all solids are assumed to be right solid unless otherwise specified.

A solid is said to be oblique solid if its axis makes any acute angle with the base of the solid, Example are Oblique prism and oblique cylinder.

The term “*truncated*” is used in conjunction with some solids just to indicate that the solid has got an inclined or oblique surface formed after cutting it with a cutting plane at any assumed angle.

### Checkpoint 5.1

- a) Define three of the basic geometric element.
- b) Write types of surfaces that are developable and non developable.
- c) List three types of hems and joints.
- d) What is development?
- e) List the methods of pattern development you know.

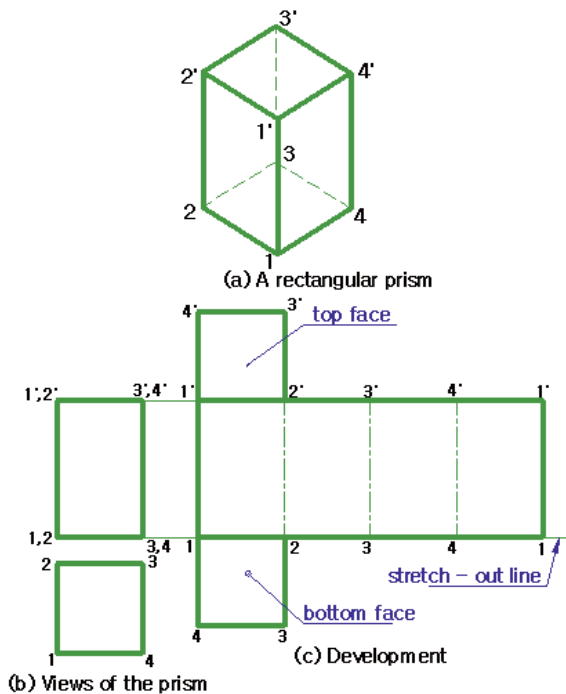
### Development of prism

Prism is a type of solid shape developed by parallel line method of development.

#### **(A) To develop a full right square prism.**

- 1) Draw the front and top views of the prism.
- 2) On the top view, number the edges in the clockwise direction so as to ensure the development will be made inside up. Also, number the edges on the front view in agreement with the numbering on the top view.
- 3) Construct the stretch-out line 1-1 through the base of the front view.
- 4) Transfer the true width dimensions of the lateral faces of the solid from the top view on to the stretch out line sequentially to locate points 1, 2, 3, etc.
- 5) Draw perpendicular lines from the stretch-out line through 1, 2, 3 etc.

- 6) Transfer the true lengths of the edges of the prism from the front view using horizontal projection lines to the corresponding line on the development, to locate 1',2',3', etc.
- 7) Complete the lateral surface development by joining the points so obtained at step 6. To prepare the complete surface development include the top and bottom faces (covers) as show in fig 5.5.



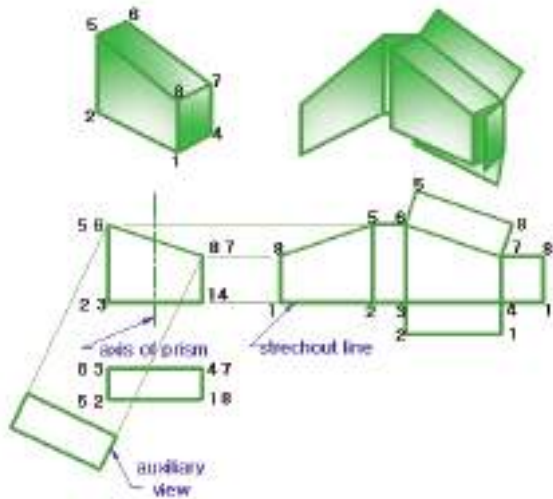
**Fig. 5.5 Development of rectangular prism**

### Checkpoint 5.2

Prepare the pattern development of pentagonal prism whose height and one side length (face width) is 60mm and 20mm respectively.

### **(B) To develop a truncated square prism**

- 1) Draw the front and top views of the prism.
- 2) Label (name) all the top corners in a clockwise direction, starting the development preferably from 1 the shortest edge. Also label all corresponding edges of front view with labeling made on top view.
- 3) Construct the stretch-out line 1-1 passing through the base of the front view.
- 4) Transfer the true width dimensions of the faces from the top view on to the stretch-out-line sequentially to locate points 1, 2, 3, etc.
- 5) Draw perpendicular lines to the stretch-out line through 1, 2, 3 etc.
- 6) Transfer the true heights of each vertical edges from the front view using horizontal projection lines onto the corresponding vertical lines of the development to locate 8',5',6', etc
- 7) To prepare the complete surface development include the true shape of the top cover which is obtained by an auxiliary view as discussed in unit 2 of this text book and the bottom cover of a right prism. See practical example on truncated right prism i.e. development of mail box.



**Fig. 5.6 Development of a truncated square prism**

**Checkpoint 5.3**

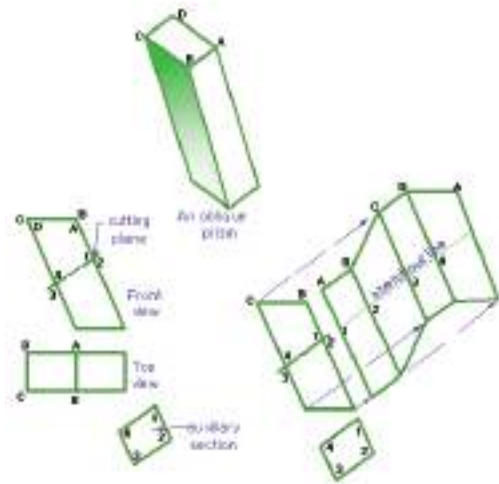
Prepare the pattern development of a truncated hexagonal prism whose one side length is 15 mm and the longest and shortest vertical edges are 45mm and 25mm respectively.

**To make the development of an oblique square prism**

Use the same method as that of right prism except a difference that is the oblique prism development doesn't unfold in a straight line, so the stretch-out line is placed through the center of the prism.

- 1) Draw the front and top views of the prism.
- 2) Draw an auxiliary section that is perpendicular to the sides of the prism. The auxiliary section gives the true width of the sides.

- 3) Project the stretch-out line from the location of the auxiliary section. The stretch-out-line is projected from the front view.
- 4) Measure the true width of the faces along the stretch-out line as shown by points 1, 2, 3, and 4.
- 5) Draw lines through these points perpendicular to the stretch-out line to form the corners of the prism.
- 6) Project the end point of the corners to the development. This locates top and bottom ends of the corners.
- 7) Connect the corners to finish the development of the oblique prism.



**Fig. 5.7 Development of an oblique prism**

**Checkpoint 5.4**

Prepare the development of full oblique octagonal prism whose axis is inclined at an angle of 45° and one side length is 20 mm.

## Development of cylinder

Development is another type of solid developed by parallel-line method of development. Cylinder can be thought of as being a many sided prism. In this case the length of the stretch-out line is equal to the circumference of the cylinder. i.e  $C=2\pi r$  or  $3D+1/7D$  where,  $C$ =circumference,  $2$ =constant,  $\pi = 3.14$ ,  $r$ = radius of the circle. The lateral surface development of a full right cylinder is a rectangle with length equal to the circumference of the base circular outline and width equal to the height of the cylinder.

## Development of full Cylinder

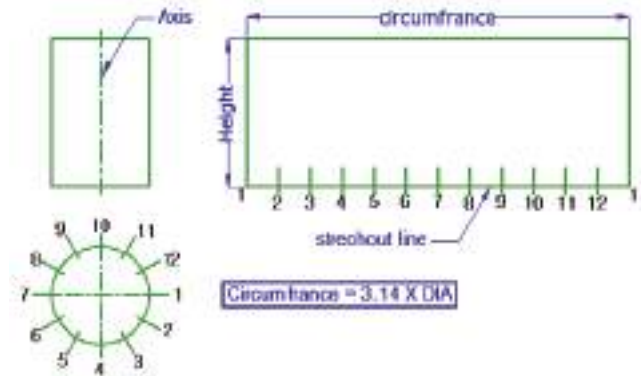
### To prepare the development of a right Cylinder

- 1) Draw the front and top view of the cylinder.
- 2) Divide the top circular view into any number of equal parts (Say 12).
- 3) Label each of the division points on the top circular view (1-12).
- 4) Draw the stretch-out line. On the left end, draw a perpendicular line. Make it the same length as the height of the cylinder.
- 5) Measure the straight line distance between two division points on the circular view (i.e. chordal length to approximate arc length).
- 6) Step off these distance on the stretch out line as many division as you have on top view to give circumference length or divide the circumference length ( $C=2\pi r$ )

into same number of divisions you have on top view for more accurate surface development.

- 7) On the last division, draw a line perpendicular to the stretch-out line. Draw the top edges of the cylinder parallel to the stretch-out line.

This method of obtaining circumference is approximate. The distance used is chordal distances. A chord is shorter than its arc length. A more accurate method of obtaining circumference is using mathematics i.e.  $C = 2\pi r$ .



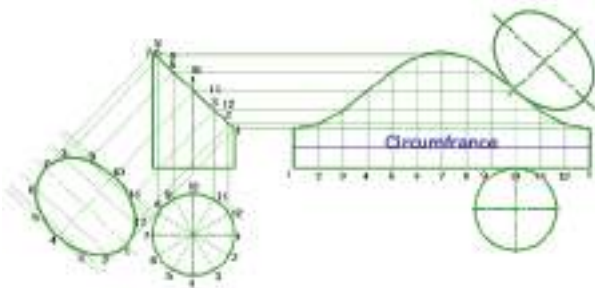
**Fig. 5.8 Development of cylinder.**

## Development of truncated Cylinder

### To prepare the pattern development of truncated cylinder

- 1) Draw the front and top views of the truncated Cylinder.
- 2) Divide the circular top view into any number of equal parts (say 12).
- 3) Project these points into the front view.
- 4) Draw the stretch-out line perpendicular to the axis of the Cylinder.

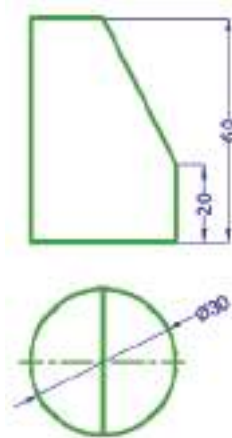
- 5) Measure the straight line distance between two division points on the circular view (i.e. the chordal length approximating the arc length.)
- 6) Step off these distance on the stretch out line (for approximate development) or divide the circumference length into the same number of divisions or sectors you have on top view (for relatively accurate development.)
- 7) Draw perpendicular lines through each point on the stretch-out line starting with shortest edge.
- 8) Project points from the top outline to edge view of the inclined surface on front view and then to the pattern development vertical edges so as to get the points to be joined with irregular curve.
- 9) For the complete surface development include the top and bottom surfaces. Here the tangent line is used to get the exact tangent point between the top cover and the lateral surface, the true shape of the top cover is obtain in auxiliary view.



**Figure 5.9 Development of truncated cylinder.**

### Checkpoint 5.5

Prepare the development of the given truncated cylinder.



### Development of oblique cylinder

Since an oblique cylinder theoretically may be thought of as a regular oblique prism with an infinite sides so the principle of development is more or less similar to that of oblique prism discussed earlier with minor variation.

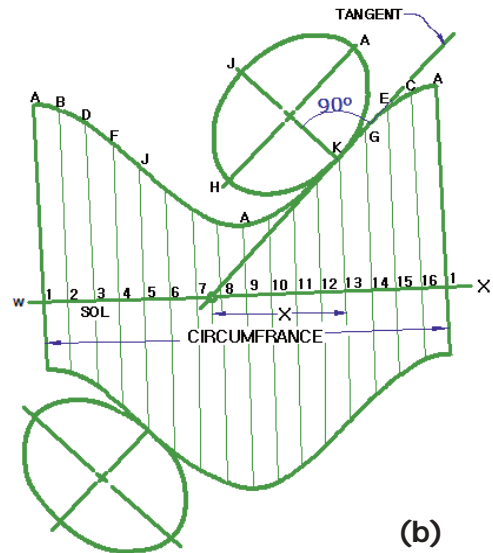
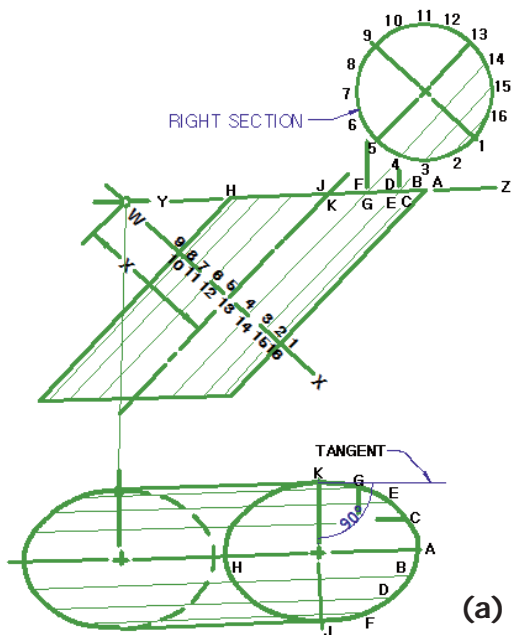
### *To prepare the development of an oblique cylinder.*

- 1) Draw the front and top view of the oblique Cylinder.
- 2) Draw the right auxiliary section.
- 3) Divide the right section into say example 16 equal parts to get 16 surface line elements and label them in all views.
- 4) Draw the stretch-out line w-x i.e. equal in length to the circumference of the right section circle.



- 5) Divide the stretch-out line into the same number of equal parts as in step 3 locating points 1, 2, 3, etc.
- 6) Draw lines perpendicular to the stretch-out line through points 1, 2, 3 ...etc.
- 7) Transfer the true length of each surface line elements from the front view to the pattern development to locate points A, B, C etc.
- 8) Draw smooth curve passing through point A, B, C... etc, using French curve.
- 9) Attach the top and bottom cover at the tangent points established or the development by using tangent line as shown on the figure below.

The top and bottom covers (i.e. ellipse) will be constructed by using major axis AH and minor axis KJ of the top view (use any ellipse construction method.)



**Fig. 5.10 Development of oblique cylinder**

### 5.2.1.2. Radial-Line Development

This method of development is used to develop shapes that are based on pyramid and cone which have a series of lines which radiate from the apex down to the base of the object and requires the determination of true length of foreshortened lateral edges before attempting to prepare the development.

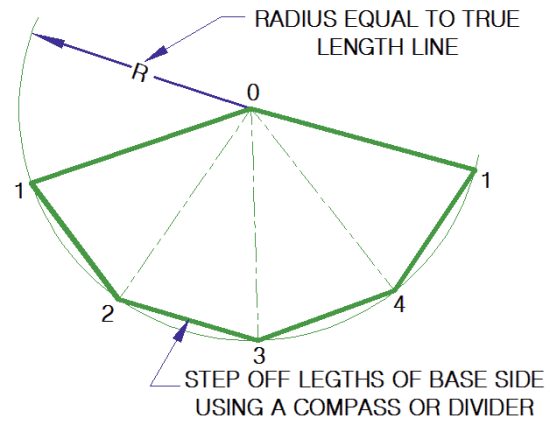
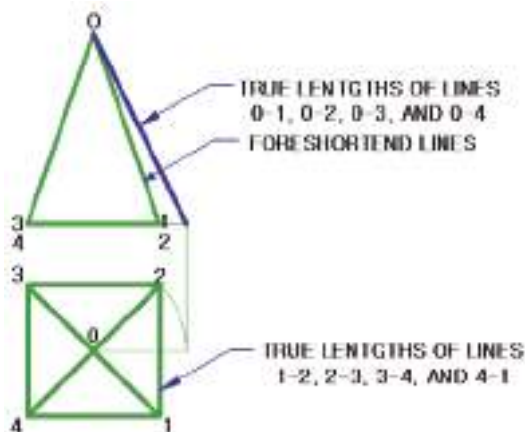
### Development of right pyramid

A right pyramid is a pyramid having all the lateral edges from vertex to base of equal length.

In the process of developing a right pyramid, a large arc is made with radius equal to the true length of the lateral edge of the pyramid. Then, points are marked on this large arc using compass by setting off arcs with radius equal to the true lengths of the base sides of the pyramid. The true lengths of the edges of a pyramid are found by using the triangulation method.

**To draw the development of full pyramid.**

- 1) Draw the front and top view of the pyramid.
- 2) Label all corners on top view and front view as well.
- 3) Find the true length of edge (e.g. 0-1) using revolution or other method.
- 4) Draw a large arc with 0 as center and radius equal to the true length of edge 0-1.
- 5) Drop a perpendicular (vertical) line from 0 so as to intersect the large arc and get 3.
- 6) Start from 3 and step off the true distance 3-2, 2-1, 3-4 and 4-1, which are true lengths of base edges obtained from top view, along the large arc with compass.
- 7) Join these points with straight line to establish the base edges.
- 8) Finally join these points (i.e. 1, 2, 3, 4 and 1) to the vertex point to represent folding edges of the solid.



**Fig. 5.11 Development of right pyramid.**

**Checkpoint 5.6**

Draw the complete surface development of hexagonal pyramid if one base side length and the altitude are 20 and 50mm respectively.

**Development of truncated right pyramid**

If a full right pyramid is cut with a cutting plane at a convenient angle other than 90° with the axis the remaining pyramid is called truncated right pyramid and if it is cut perpendicular or at 90° angle with the axis. It is called frustum pyramid.

The procedure of development is the same as the full pyramid except that only the truncated edge lines are required.

**To draw the development of truncated pyramid.**

- 1) Draw the front and top view of the truncated pyramid.

- 2) Label all corners on top view and front view as well.
- 3) Find true length of the full lateral edge of the pyramid on the front view by first revolving line 0-1 of the top view to intersect horizontal center line passing through apex 0 at  $1^1$  and then project up  $1^1$  and to front view to intersect the extended base line at  $1'$ , and finally join 0 with  $1'$  of front view.
- 4) Find the true length of the truncated lateral edges (A-1 and B-2, C-3 and D-4) on front view by projecting horizontal line from AB and DC to true length edge  $01^1$ .  
Now line  $E-1'$ , is the true length of edge C-3 and D-4. Line  $F-1'$ , is the true length of edge A-1 and B-2.
- 5) Draw a large arc with 0 as center and radius equal to the true length edge  $0-1'$  as shown on front view on a blank space.
- 6) Drop perpendicular/vertical line from 0 so as to intersect the large arc and establish 3.
- 7) Start from 3 and step off the true distance 3-2, 2-1, 3-4 and 4-1 from the top view using compass to get the remaining point 1,2 and 4 along the large arc.
- 8) Join the points located on the large arc with straight line to establish the true base edges on the development.
- 9) Connect points 1,2,3,4 of the large arc with the apex '0'.
- 10) Transfer the true lengths of each edges ( $E-1'$  and  $F-1'$ .) for the corresponding

edge length along lines established at step 8 to get A,B,C,D and A.

- 11) Let us connect the top cover of the truncated pyramid to edge A-B of the development. To do so first use B as center and true edge length B-C of the development as a radius and strike an arc. Use A as a center and true distance of A-C as a radius as shown to the left of front view and strike another arc so as to intersect the previously drawn arc and establish 'C' of top cover. Use A as a center and true distance A-D of the development as a radius and strike an arc.

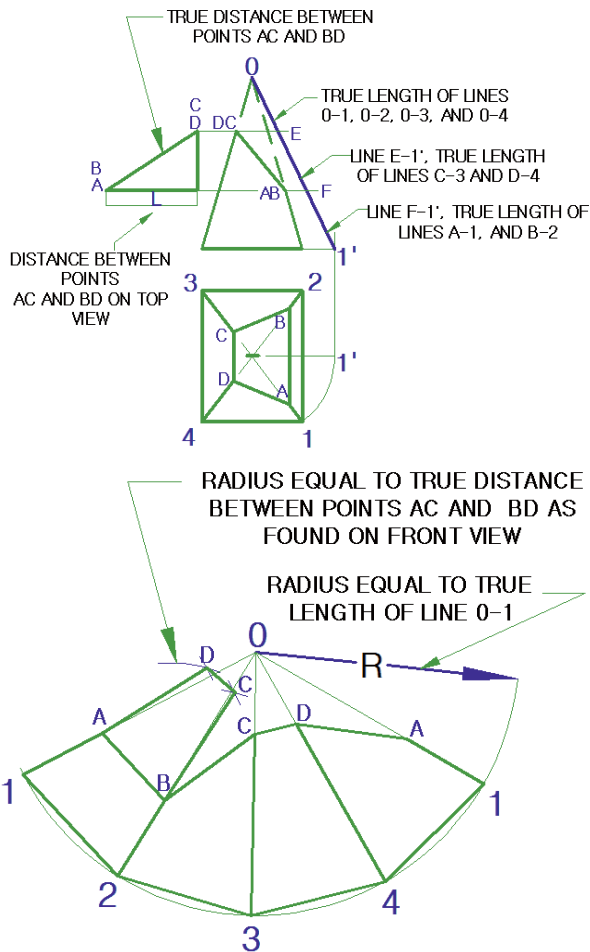
Use B as a center and true distance of B-D (equal in length to A-C) as a radius and strike another so as to intersect arc drawn at previous step and establish "D" of the top cover. Join points A, D, C and B to complete the top cover.

**Note:** You can first draw the true shape of the inclined surface by auxiliary view method and use two of the corners as center and the diagonal distance as a radius accordingly as discussed above to establish the remaining two corners and complete the top cover.

***To attach the bottom cover on the development.***

- i. Select one of the base edges upon which to connect the bottom cover.
- ii. Draw perpendicular lines through the end points of the edge selected to the direction the cover is drawn.

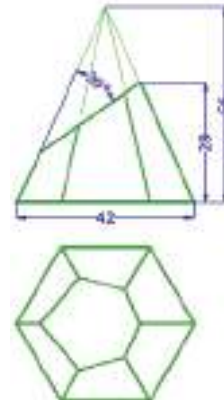
- iii. Transfer the true adjacent base edge lengths along these perpendicular lines.
- iv. Connect the points obtained along these perpendicular lines at step III with straight line parallel to the initial base edge selected.



**Fig. 5.12 Development of truncated pyramid**

**Checkpoint 5.7**

Prepare the complete surface development of the following truncated hexagonal pyramid shown below



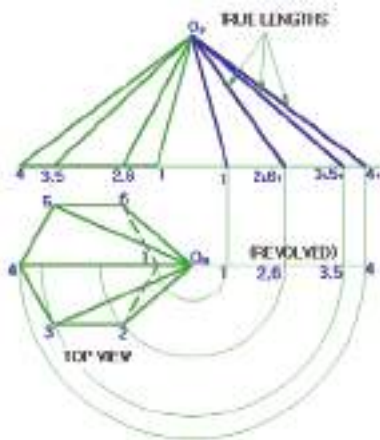
**Development of oblique pyramid**

Oblique pyramid is a pyramid having its axis at an angle other than  $90^\circ$  with the base of the solids, so that paired or all lateral edges have unequal lengths. So the true length of these edges should be found as shown in Fig.5.13.

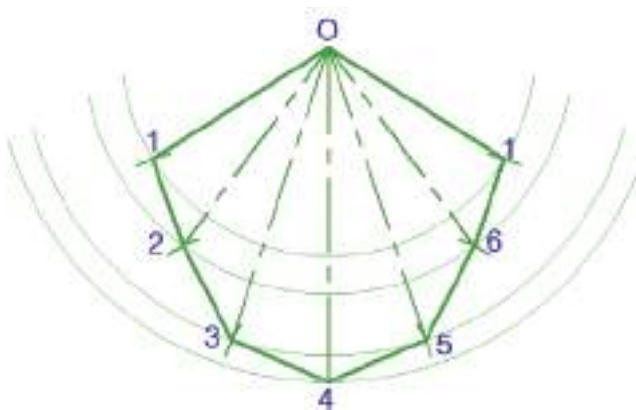
**To prepare the development of full hexagonal oblique pyramid.**

- 1) Draw the front and top views of the oblique pyramid (Fig.5.93).
- 2) Label the edges of the pyramid on both top and front views.
- 3) Construct the true length diagram that shows the true length of all lateral edges on the front view.
- 4) Start the development by first drawing line  $O_F 1_r$  (the shortest edge) from the true length diagram.

- 5) With  $O_F$  as center and radius  $O_F 2_r$  drawn an arc and adjust your compass with side 1-2 as radius from top view and draw another arc to intersect the first arc drawn at 2.
- 6) In a similar manner locate the other points i.e 3, 4, 5, 6.
- 7) Join points 1, 2, 3, 4, 5 and 6 to each other and to point O. Also attach the base with the same procedure discussed on right pyramid to make the development complete.



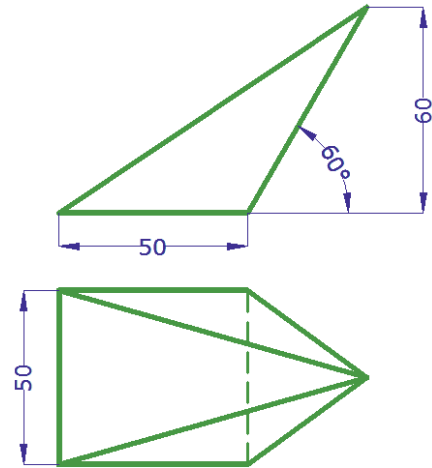
**Fig. 5.13 True length diagram**



**Fig. 5.14 Development of oblique pyramid.**

### Checkpoint 5.8

Prepare the development of the given square oblique pyramid

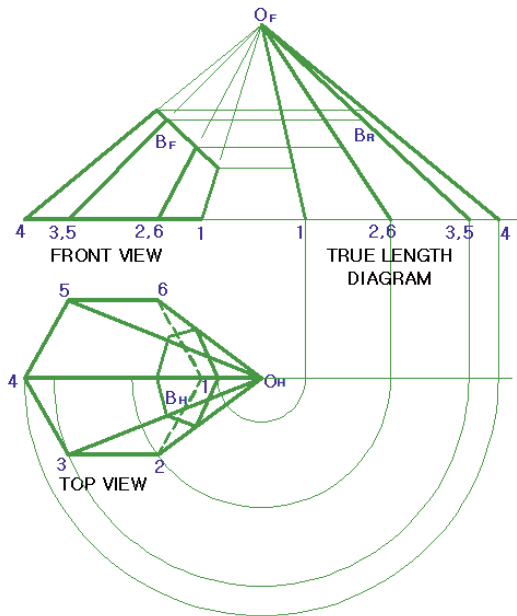


### Development of truncated oblique pyramid

The procedure of finding the true length of the truncated edges is similar to that of truncated right shown discussed earlier. The method and procedures of surface development is also similar to that of full oblique pyramid (See Fig. 5.15).

### Key terms

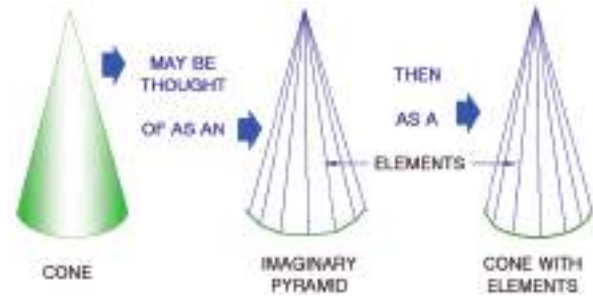
- **Frustum:** is a section of a conical shape.
- **Pattern making:** is the process of creating a 2D map of a 3D shape to be formed.
- **Patterns:** are two dimensional maps of three dimensional shapes.
- **Radial lines:** are the development lines used to construct a pattern for a shape. Also known as radial guidelines.



**Fig. 5.15 Development of truncated oblique pyramid.**

**Development of cone**

The development of a cone is similar to that of pyramid, use the radial line method of development. The cone is thought of as a many sided pyramid.

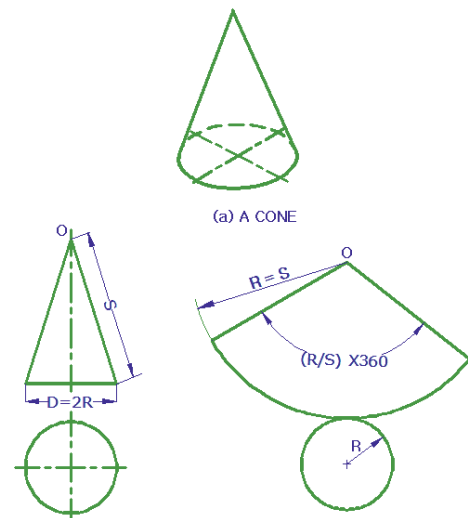
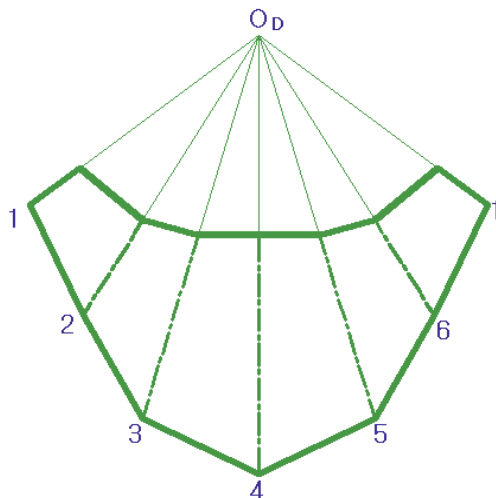


**Fig. 5.16 Development of cone.**

The development of a right full cone is simply a sector whose radius is equal to the slant height (hypotenuse) of the cone and whose arc length is equal to the circumference of the base of the cone. The subtended angle can be found using the following formula.

$$\theta = \frac{r}{s} \times 360^\circ$$

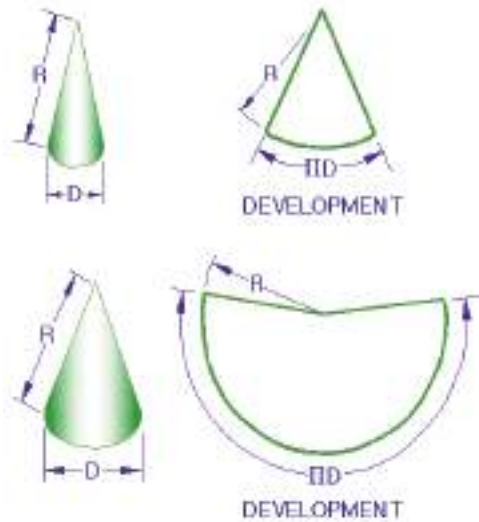
Where: r- is the radius of the base circle of the cone and s is the slant height (hypotenuse) of the cone.



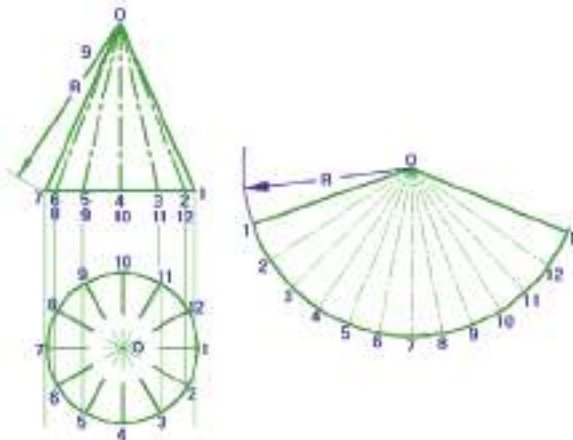
**Fig. 5.17 Development of right cone**

The proportion of the height to the base diameter determines the size of the sector as shown on Fig.5.18.





(A) PROPORTION OF HEIGHT TO BASE



(B) DEVELOPMENT PROCEDURE

**Fig. 5.18 Development of right cone**

**Steps to draw the development of a cone**

- 1) Draw the front and top view of the full right cone.
- 2) Divide the top view into a convenient number of equal divisions in this instant into 12.
- 3) Label all division points on top view and their corresponding points on front view.

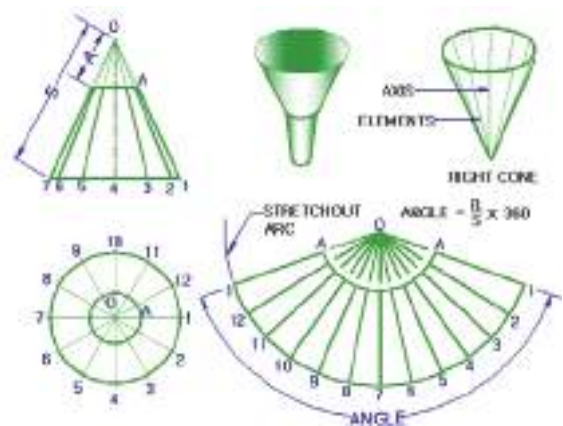
- 4) Draw a large arc on the development using O as a center and true length edge O-1 (O-7) of front view as radius.
- 5) Take a single chordal length of the top view to approximate the arc length with compass and step off along the large arc equal divisions as you have on top view.
- 6) Join the end point of the large arc to apex 'O' to complete the lateral surface development.

**Note:** You can also attach the bottom cover taking its true shape from top view.

**To draw development of frustum of a cone.**

Draw the development of the full cone as shown in Fig 5.18.

- 1) Draw an arc on the development of the cone with O as center and OA as radius to locate the top edge of the frustum. (Fig.5.19).
- 2) Include the top and bottom cover obtained from top view to make the pattern development complete.



**Fig. 5.19 Development of frustum of a cone**

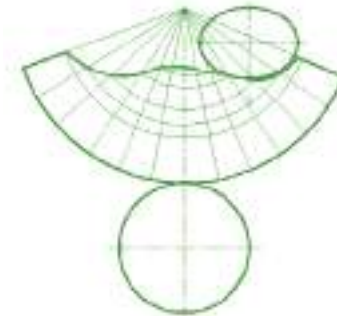
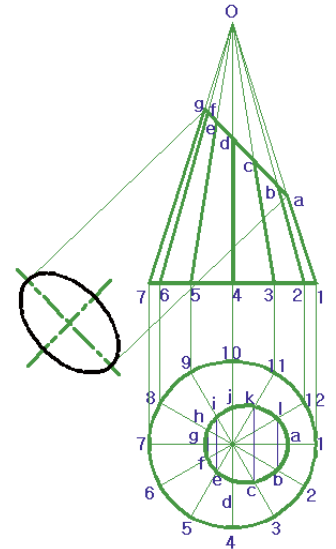
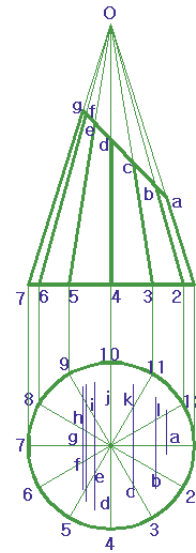
## Development of truncated right cone

The development of truncated right cone is similar to the development of full cone except minor difference resulting from the truncated element lines.

Before preparing the pattern development of a truncated right cone, the top view of the truncate part (i.e. the ellipse) and its true shape should be complete and found respectively.

### ***To complete the top view truncate part (ellipse) of the cone***

- 1) Draw the front and top view of the truncated cone with its apex 'O'
- 2) Divide the top view into any convenient number of equally spaced element line say 12 then label them in a clockwise direction.
- 3) Project these element lines from top view to the base of front view and then to the apex 'O' so as to get points a, b, c etc on the edge view of the ellipse.
- 4) Project points a, b, c, etc from front view back to top view on the corresponding elements lines to get points a', b', c' etc
- 5) Draw smooth curve through points a', b', c' etc to complete the top view of the ellipse.
- 6) Draw the true shape of the ellipse using auxiliary view method to help complete the pattern development.

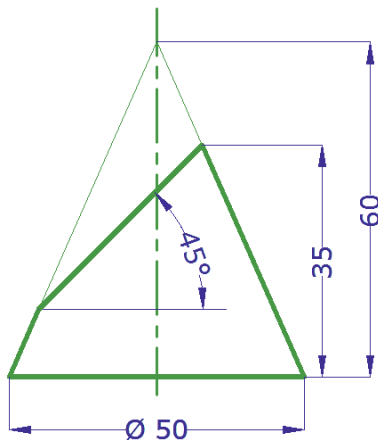


**Fig. 5.20 Development of truncated cone.**

- 7) Project points a, b, c, etc from the edge view of the ellipse to the true length line 0-1 of front view to get the true lengths of all other element lines.
- 8) Draw the development of the full cone as discussed earlier.
- 9) Transfer the true length of all element lines (eg.0-a, 0-b, 0-c etc) from front view to the corresponding element lines of the development to locate points a, b, c, etc
- 10) Draw smooth curve through points a, b, c, etc obtained on the development and attach the base and the top elliptical surface to complete the development.

**Checkpoint 5.9**

Prepare the development of the following truncated cone.



**Development of oblique cone**

Oblique cone can have either a circular or elliptical base as shown on Fig.5.21, either type can be developed approximately. The

development of an oblique cone may be made in a manner similar to the development of an oblique pyramid by considering the cone as a pyramid with infinite number of edges however here finite number of edges (i.e. 12 element lines) are used.

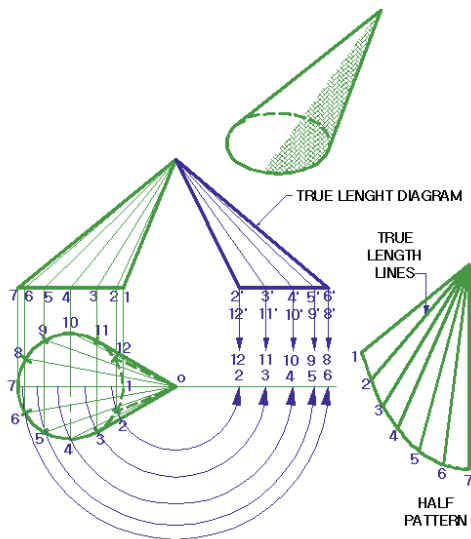
**To prepare development of oblique cone**

- 1) Draw the front and top views of the oblique cone.
- 2) Divide the circular view of top view into any number of equal parts (say 12).
- 3) Label the points in a clockwise direction starting from 1 as shown on figure. 5.21 and connect them to apex 0 to establish element lines on top view.
- 4) Project point 1, 2, 3, etc from top view to the base edge of front view and label them accordingly.
- 5) Draw the element lines from each base edge points to apex '0' of the front view. This divides the lateral surface into series of triangles.
- 6) Construct the true length diagram that shows the true length of all element except 0-1 and 0-7 which appeared as true length on front view by revolution method
- 7) Make the development by laying out the triangles in the order they are found on the views of the cone. Start with the 1<sup>st</sup> triangle 0-1-2

First layout true length side 0-1. All radiuses for other lateral elements and arc length are taken from true length diagram and top view respectively. Draw an arc using 0 as a center

and 0-2 as a radius. Draw another arc with 1 as center and 1-2 as radius to intersect the first arc drawn and establish 2 on the development. Again draw an arc using 0 as a center and 0-3 as a radius. Draw another arc with 2-3 as a radius to intersect the previous arc drawn and establish 3 on the development.

- 8) Repeat these steps for each element until all points on the development are shown.
- 9) Draw a smooth curve through points 1, 2, 3 etc using French curve. You can also attach the base to complete the development.



**Fig. 5.21 Development of oblique cone.**

**Development of truncated oblique cone.**

The procedures of finding the true length of the truncated edges is similar to that of truncated oblique pyramid and other procedures of development construction is Similar to that of oblique cone.

### 5.3 Intersection Between Geometrical Solids

List the geometrical solids you know. Imagine when some of the solids intersecting and make an intersection line or curve between them.

A thorough knowledge of this subject would help greatly a student of engineering or an engineer engaged in his/her practical field.

A machine part of any kind normally may be assumed to consist of a number of geometric shapes arranged to produce the desired form. The common intersecting geometric shapes in sheet metal work like prism, cylinder, pyramid and cone may sometimes be combined or interlocked in a pattern that is easily represented. However in this text only intersection of solids based on prism and cylinder is discussed. In sheet metal work, the line of intersection between intersecting or penetrating solids will have to be found out before the development of the solids is prepared. The principles of intersection have many more practical applications in making of ducts, pipe joints, containers, fitting of a steam dome on cylindrical boiler, cutting of openings in roof surface for flues and stacks, etc. can be mentioned.

**Classification of surface intersection**

- A) Intersection of two solids with plane surfaces (Example intersection of prism and pyramid). The common intersection outline becomes a straight line so it is called as line of intersection.

- B) Intersection of two solids one with plane surface and the other with curved surface (Example intersection of prism and cylinder). When they intersect each other the common intersection outline in majority case becomes curve, but sometimes partially line and partially curve depending on the shape, size and orientation of the solids under intersection.
- C) Intersection of two solids bounded by curved surfaces. (Example intersection cylinder and cone). When they intersect each other, the common intersection outline becomes a curve so it is called as curve of intersection and the manufacturing of which will directly depends on the development of solids intersected.

### 5.3.1. Piercing point

Bring a paper and pierce it with your pen or pencil and observe the exact contact point of the pen and the paper.

Before trying to determine the line or curve of intersection resulting from intersection or penetrating solids, we must be able to determine a piercing point.

**Piercing point** is the point of intersection of a line and a plane. The line can represent the lateral edge of a plane solid or the element of a curved solid. The plane can represent the surface of a solid.

A number of piercing points so located by the intersection of the edge or elements of one solid with the plane or surface of another intersecting solid will be joined to each other

using set square or French curve to establish the required line or curve of intersection.

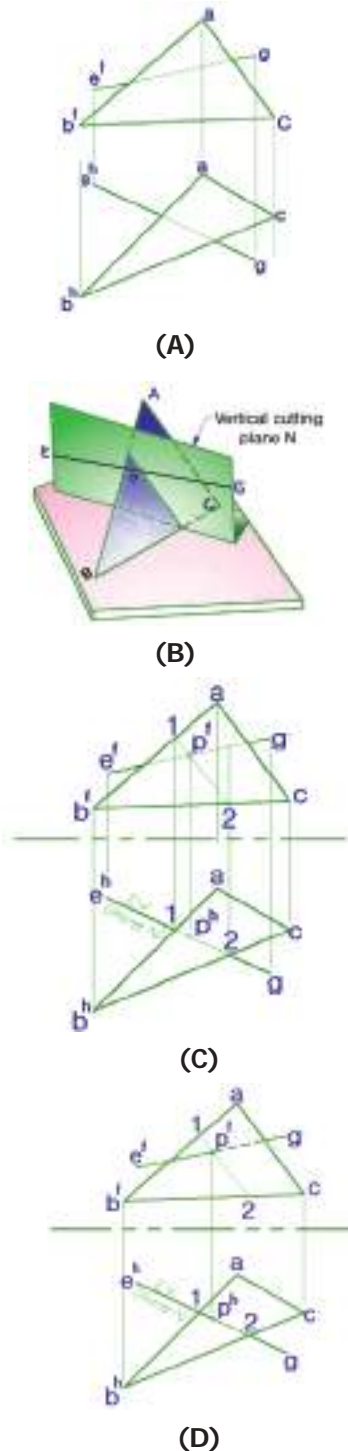
**Finding piercing point resulted from intersection of line EG and triangular plane ABC (Fig 5.22).**

**Note:** Line ED can represent the lateral edge of one of intersecting element and plane ABC, the lateral surface of another intersecting element.

The piercing point is obtained by assuming a cutting plane (Containing line EG and at the same time passing through the triangular plane ABC using the two given views of the line and plane.

#### **Steps to find the piercing point**

- 1) Draw the front and top views of the two intersection elements (line and plane).
- 2) Label the line as EG and the plane as ABC.
- 3) Introduce any convenient cutting plane containing line EG. A cutting plane perpendicular to one of the principal plane (in this case horizontal plane) is convenient because it appears as an edge (line) view in a principal view (i.e. top view.)
- 4) The line of intersection 1-2 is determined by the intersection of plane ABC and the assumed cutting plane.
- 5) Since line EG and line of intersection 1-2 both lie in the same cutting plane, they intersect each other to locate point "P".
- 6) Since line of intersection 1-2 also lies in plane ABC, point 'P' is now the required piercing point under the intersection of line EG and plane ABC.



**Fig. 5.22 Finding piercing point of a line and a plane intersecting.**

### 5.3.2. Methods of Locating Point of Intersection.

There are two commonly known methods of locating point of intersection between intersecting solids.

- 1) End view method
- 2) Cutting plane method

#### 1) End view method

This method is commonly used to find the line of intersection between intersecting solids with plane surfaces.

Begin by labeling the corners/vertices of a plane figure or surface of one of the intersecting solids on end view.

**Note:** The plane figure/surface labeled on the end view represents the edge view of the lateral surface and the labels show the point view of the lateral edges along which the line of intersection lies.

#### 2) Cutting plane method

This method is used to find the line of intersection between intersecting solids with both plane and curved surfaces, so it is preferable for curved surfaces.

Pass a series of imaginary cutting planes as required through both solids under intersection used to locate points on the line/curve of intersection, resulted from intersection of cutting planes with edge view of the lateral surface of both solids on the views.

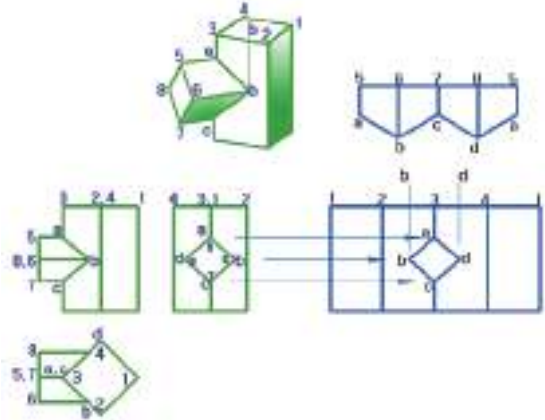


### 5.3.3. Intersection of two Regular Prisms and their Development.

The intersection of two prisms is found by locating the piercing points of the edges of one solid on the surface of the other solid using end view (side view) method.

#### **Steps to find the line of intersection of the two intersecting solids (Fig.2.23).**

- 1) Draw the front and top views of both prisms.
- 2) Label the corners of the end view of the horizontal prism in a clock wise direction as shown by a, b, c and d along which the piercing points lie.
- 3) Project points a, b, c and d from end view to top view to intersect the edge view of the lateral surface of vertical prism along which piercing points again lie.
- 4) Project the same points a, b, c and d from top view down to front view to intersect the projection lines of corresponding points from end view and establish the required piercing points that lie on the line of intersection.
- 5) Connect the piercing points obtained at step 4 to complete the line of intersection of the two intersecting prisms.



**Fig. 5.23 Finding line of intersection of two intersecting prisms.**

#### **Steps to prepare the lateral surface development of the vertical prism.**

We are using parallel-line method of development as the solid to be developed is a prism. So follow the basic procedures to be used for this method as discussed earlier.

- 1) Draw the top and front views of the prism. (As already shown)
- 2) Label all the top corners of the prism in a clockwise direction as (1, 2, 3, and 4) also show corresponding labeling on front view.
- 3) Draw the stretch-out base line passing through the base of the front view.
- 4) Transfer the true length edges of the top view 1-2, 2-3, 3-4 and 4-1 along the stretch out line and label them.
- 5) Draw perpendicular lines through labeled points of the stretch-out line to establish the various lateral edge heights.
- 6) Project the piercing points (a, b, c and d) from front view onto the development to intersect corresponding lateral/vertical

edges and establish the line of intersection.

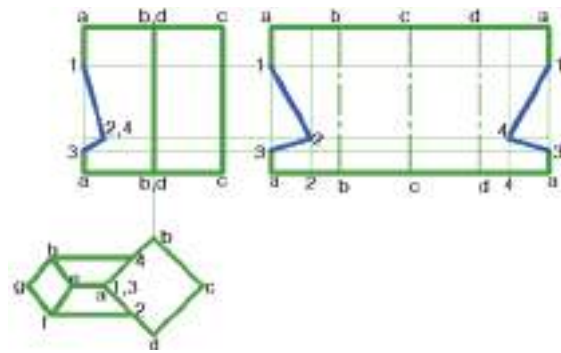
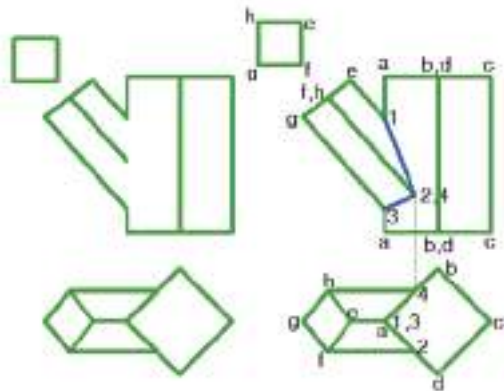
i.e. points a and c lie on lateral edge 3 where as points b and d lie on assumed lateral edges whose true distance can be measured from edge 3 of top view and transferred along the stretchout line each side.

- 5) Connect the piercing points so obtained at step 6 to complete the line of intersection on the development.

To develop the small horizontal prism follow the same steps as the vertical prism provided that the true length edges to be transfer along the stretch out line are obtained from end/side view i.e. 5-6, 6-7, 7-8 & 8-5 and the true heights of the lateral edges are obtained either from front view or top view to get piercing points a,b,c and d finally connect these points to complete the corresponding line of intersection on this prism.

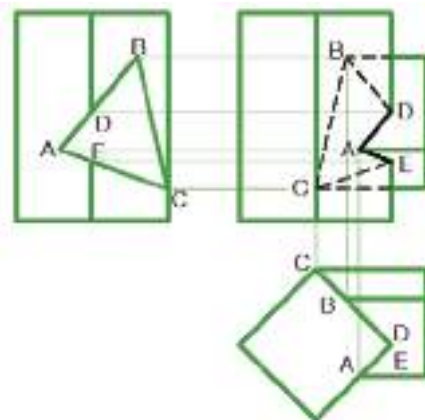
**Intersection of two prism at an angle different from 90°.**

The step to find the line of intersection is more or less similar to the previous case.



**Fig.5.24 Finding line of intersection between intersecting prism at an angle and their development**

If the axis of the two intersecting solids intersect at right angle or other angle regardless of their sizes and orientation we will obtain a visible line of intersection on the front view. However the possibility of getting hidden and visible line of intersection is high under the following conditions: If the axis of the intersecting solids do not intersect or apart each other by some distance, If the shapes of the solids under intersection are different and If different arrangement/orientation is used than a regular arrangement.

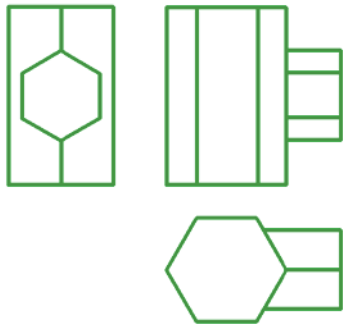


**Fig.5.25 Visible and hidden line of intersection of intersecting prisms.**

So you see that on front view of Fig.5.25 line DA and AE are visible line of intersection, where as line BD, BC, CE are Invisible/hidden line of intersection.

**Checkpoint 5.10**

Find the line of intersection created between the following intersecting solids and prepare the lateral surface development of both solids.



**5.3.4. Intersection of two Cylinders and their Development.**

The curve of intersection of two intersecting cylinders is found by using a series of cutting planes. So we are using cutting plane method.

**Steps to find the curve of intersection of two intersecting cylinders at right angle (Fig 5.26).**

- 1) Draw the front and top views of both cylinders and circular view of the horizontal cylinder on the front or side view is required.
- 2) Pass a required number of vertical cutting planes through both the cylinders by the following two options.

- i. By dividing the circular view of the horizontal cylinder into say 12 equal parts on side view or draw elements along which the cutting planes are assumed to pass through
  - ii. By dividing the edge of the horizontal cylinder on top view into defined number of equal parts. Including the center line as marked as A,B,C,D.
- 3) Label all the points established by the intersection of the circular view with cutting planes both on top view (i.e. 1,2,3,4,5,6 and 7) front view (i.e. A,B,C,D) where only half view of the circle is used.
  - 4) Project points established at step 3 from top view of vertical cylinder and end view of horizontal cylinder to the front view to get corresponding intersection points.
  - 5) Connect intersection points obtained at step 4 with French curve so as to get the required curve of intersection.

**Steps to prepare the lateral surface development of the vertical cylinder (Fig 5.26)**

As discussed earlier parallel line method of development is used to develop the cylinder.

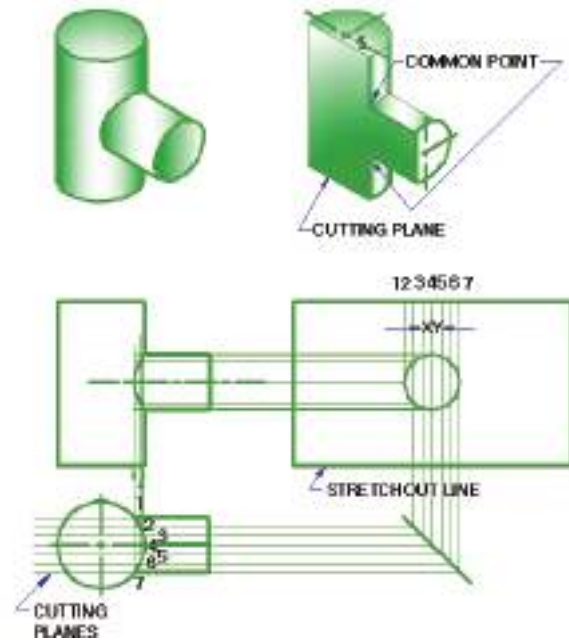
- 1) Draw the front and top views of both cylinders. As discussed already.
- 2) Draw the stretch out line passing through the base of the front view whose length is equal to the circumference length of the large circle of top view.

- 3) The total height drawn perpendicular to the stretch-out line is directly projected from the front view.
- 4) Draw the center line perpendicular and passing through the mid point of the stretch-out line.
- 5) Draw the other lines representing the cutting plane parallel to the center line and through points 1, 2, 3 etc located by taking the chordal lengths X,Y, etc. from top view onto the development.
- 6) Project the points of intersection from the curve of intersection of front view to the corresponding cutting plane lines to get another intersection points on the development.
- 7) Connect these points with French curve to complete the shape of the opening into which the small cylinder fits.

The lateral surface development of the small horizontal cylinder can be made in a manner similar to the development of truncated cylinder.

### Key terms

**Stretch out:** is two dimension patterns of a three dimensional object.



**Fig. 5.26 Finding the curve of intersection and development of intersecting cylinders at right angle.**

### Steps to find the curve of intersection of two intersecting cylinders at an angle (Fig.5.27 (A)).

- 1) Draw the front and top views of both cylinders under intersection.
- 2) Draw the auxiliary view of the intersecting cylinder at an angle as half/full circle and divide it into equal parts to establish surface line elements on its lateral surface.
- 3) Label these points and project them to corresponding elliptical outline on top view.
- 4) Project all the points from the elliptical outline to circle representing the edge view of the vertical cylinder on top view.

- 5) Project points from circular view of top view to front view to intersect corresponding surface line element of the intersecting cylinder at an angle.
- 6) Connect points obtained at step 5 to complete the required curve of intersection.

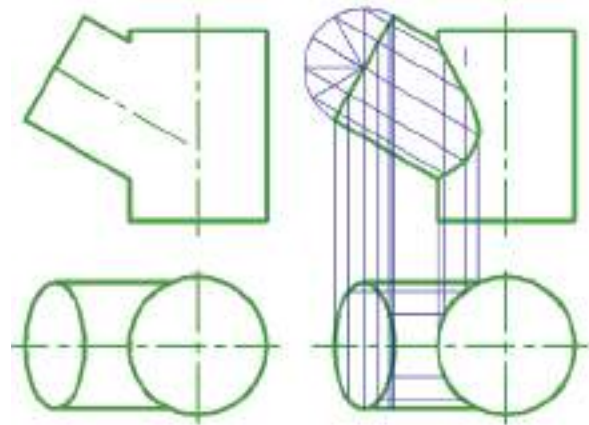
**To develop the lateral surface of the vertical cylinder (Fig. 5.27(B)).**

- 1) First draw the development of the full cylinder as discussed earlier.
- 2) Consider appropriate number of surface line elements on the cut portion of the cylinder then draw these elements on the development by transferring the spacing between them from the top view to the development.
- 3) Transfer the lengths of these elements from the front view to the development to locate points on the line of intersection.
- 4) Connect the points so obtained in step 3 to complete the curve of intersection on the development.

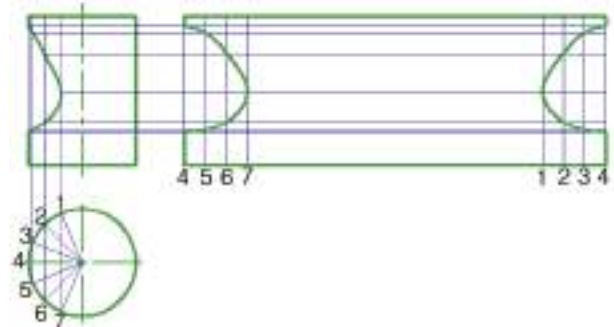
The lateral surface development of the cylinder intersected at an angle can be drawn in a similar manner to the development of truncated cylinder.

**Key terms**

**Truncate:** to cut the top of a shape along a plane that is not parallel to the base.



(A) Intersection of two cylinders



(B) Development of the lateral surface of the vertical cylinder

**Fig. 5.27 cylinder intersect at an angle**

**Checkpoint 5.11**

Find the line of intersection and prepare their lateral surfaces' development of two intersecting cylinders at right angle. The diameter and length of the horizontal cylinder are 50mm and 80mm, respectively. The diameter and height of the vertical cylinder are 40mm and 80mm, respectively.

## UNIT SUMMARY

A layout of the complete surface of an object is called a development or pattern. If we wanted to make an object such as a cone, prism or pyramid a development may firstly be required. The development shows the true sizes of the surface of the object. A development should be drawn with the inside face up.

In prism development a development of only the sides of an object without the top or base is called a lateral development. With the top and bottom surfaces included it is called a full development. The true lengths of the lines must always be determined.

In the development of a cylinder firstly divide the circumference into elements. Then use the true length of these elements in the development.

While developing a pyramid first determine the true lengths of the edges and base.

Transition Pieces are pieces that change from one shape to another. So to develop a rectangular transition piece: the true lengths of lines must be determined. Lines that are not parallel to the frontal plane in the top view are not true length in the front view.

We can develop a transition piece that connects two circular pipes by stepping of the distance between points in the top view and using the height of the lines in the front view, the true length of the lines can be determined.

Intersection of two cylinders is possible by projecting data points in the top view down to the front view, obtaining both the height and width of the position of the points, the complete intersection of the two solids can be obtained.


For the Intersection of a cone and cylinder: The cone base must be divided into sections and then projection lines are projected up to the vertex of the cone. The intersection points can then be established on these projection lines by projecting from the front view.



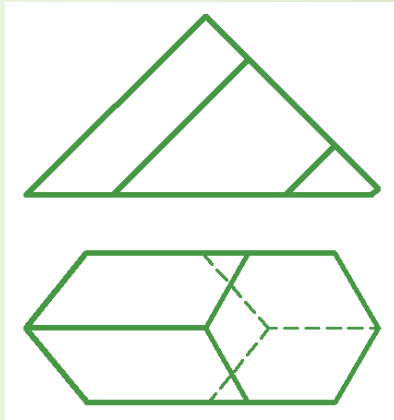
# Exercise

## EXERCISE I

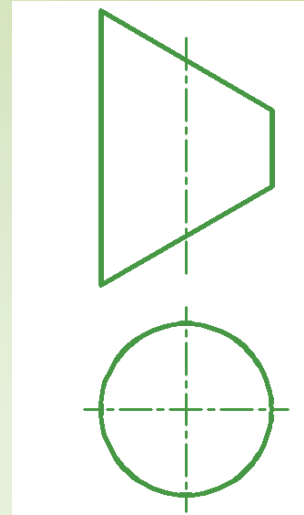
Prepare the complete surface development of the following shapes.



(A)



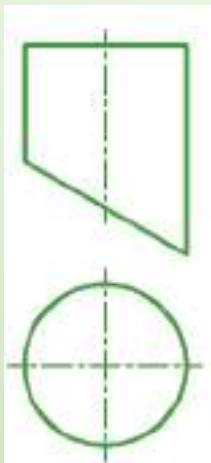
(B)



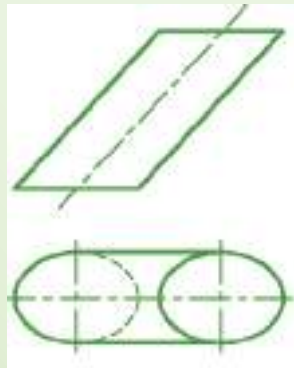
(C)



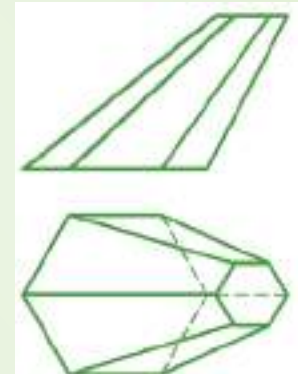
(D)



(E)



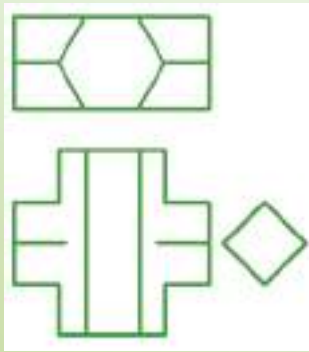
(F)



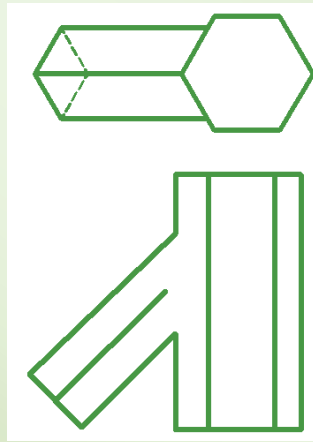
(G)

**EXERCISE II**

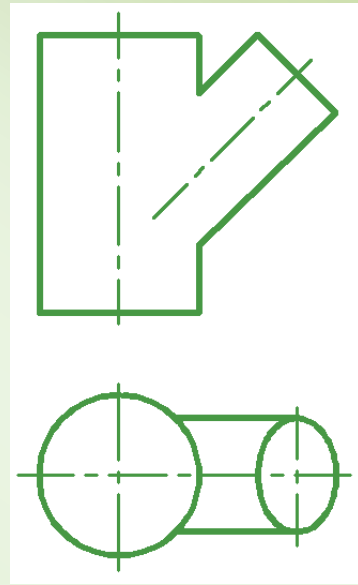
*Find the line of intersection and then prepare the lateral surface development of the following intersecting solids.*



(H)



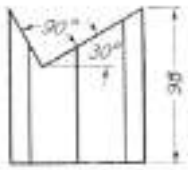
(I)



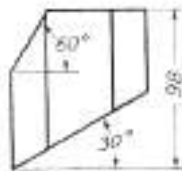
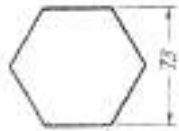
(J)

**Project:**

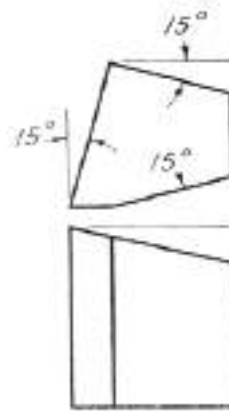
*Develop the lateral surface with the upper and lower cover of the given drawing*



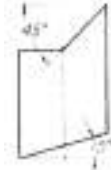
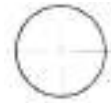
(1)



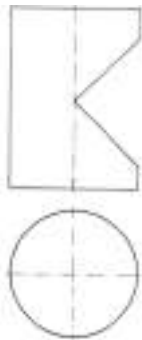
(2)



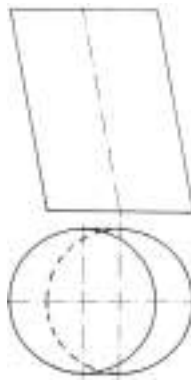
(3)



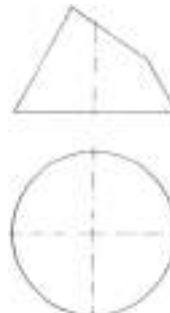
(4)



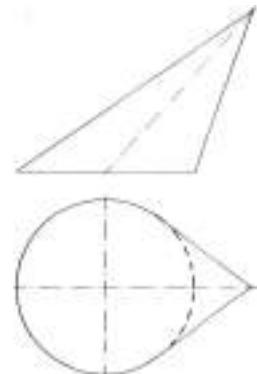
(5)



(6)



(7)




(8)



(9)



(10)



(11)

